



Name: _____

Get a fidget spinner! Spin it.

I needed to spin _____ time(s) to finish.

— —
seven tens— —
three tens— — —
27 tens— — —
eight hundreds and four
ones— — —
53 tens— — —
77 tens— —
four tens— —
19 ones— — —
99 tens— — — —
83 hundreds— —
two tens— —
five tens— —
66 ones— — —
nine hundreds and six tens— — —
six hundreds and two tens— —
42 ones— —
five tens— —
36 ones— — — —
71 hundreds— — —
61 tens— — —
three hundreds and nine
ones— —
53 ones— —
nine tens— —
seven tens— — — —
20 hundreds— — —
six hundreds and seven ones— — — —
11 hundreds

Name: _____

9	-2		-3		+2		-3	
	+1		+1		-1			
+2								
				-3				
+1								
				+2				
-3				8				
	+1		+3		-2		+1	1

$13 - 8 = \underline{\quad\quad\quad}$

☐ 5 ☐ 9 ☐ 18

4 is more than

☐ 5 ☐ 3 ☐ 4

six

☐ 8 ☐ 4 ☐ 6

Write the words into the boxes.

 see
eat

--	--	--

--	--	--

What day comes after Sunday?

Name: _____

Adding and Subtracting 3

$6 - 3 = \underline{\quad}$ $14 - 11 = \underline{\quad}$ $8 - 3 = \underline{\quad}$ $5 - 3 = \underline{\quad}$

$3 + 5 = \underline{\quad}$ $7 - 4 = \underline{\quad}$ $8 + 3 = \underline{\quad}$ $3 + 4 = \underline{\quad}$

$9 + 3 = \underline{\quad}$ $3 + 2 = \underline{\quad}$ $3 + 3 = \underline{\quad}$ $6 + 3 = \underline{\quad}$

$12 - 9 = \underline{\quad}$ $11 - 3 = \underline{\quad}$ $3 + 10 = \underline{\quad}$ $3 + 11 = \underline{\quad}$

$13 - 3 = \underline{\quad}$ $1 + 3 = \underline{\quad}$ $4 - 3 = \underline{\quad}$ $12 - 9 = \underline{\quad}$

$$\begin{array}{r} 9 \\ + 3 \\ \hline \end{array}$$

$$\begin{array}{r} 12 \\ - 9 \\ \hline \end{array}$$

$$\begin{array}{r} 1 \\ + 3 \\ \hline \end{array}$$

$$\begin{array}{r} 4 \\ - 3 \\ \hline \end{array}$$

$$\begin{array}{r} 7 \\ + 3 \\ \hline \end{array}$$

$$\begin{array}{r} 10 \\ - 3 \\ \hline \end{array}$$

$$\begin{array}{r} 6 \\ + 3 \\ \hline \end{array}$$

$$\begin{array}{r} 9 \\ - 3 \\ \hline \end{array}$$

$$\begin{array}{r} 3 \\ + 3 \\ \hline \end{array}$$

$$\begin{array}{r} 6 \\ - 3 \\ \hline \end{array}$$

$$\begin{array}{r} 10 \\ + 3 \\ \hline \end{array}$$

$$\begin{array}{r} 13 \\ - 3 \\ \hline \end{array}$$

$$\begin{array}{r} 11 \\ + 3 \\ \hline \end{array}$$

$$\begin{array}{r} 14 \\ - 11 \\ \hline \end{array}$$

$$\begin{array}{r} 5 \\ + 3 \\ \hline \end{array}$$

$$\begin{array}{r} 8 \\ - 3 \\ \hline \end{array}$$

$$\begin{array}{r} 12 \\ + 3 \\ \hline \end{array}$$

$$\begin{array}{r} 15 \\ - 12 \\ \hline \end{array}$$

$$\begin{array}{r} 2 \\ + 3 \\ \hline \end{array}$$

$$\begin{array}{r} 5 \\ - 3 \\ \hline \end{array}$$

$$\begin{array}{r} 4 \\ + 3 \\ \hline \end{array}$$

$$\begin{array}{r} 7 \\ - 4 \\ \hline \end{array}$$

$$\begin{array}{r} 8 \\ + 3 \\ \hline \end{array}$$

$$\begin{array}{r} 11 \\ - 3 \\ \hline \end{array}$$

$$\begin{array}{r} 5 \\ + 3 \\ \hline \end{array}$$

$$\begin{array}{r} 4 \\ - 3 \\ \hline \end{array}$$

$$\begin{array}{r} 8 \\ - 3 \\ \hline \end{array}$$

$$\begin{array}{r} 3 \\ + 11 \\ \hline \end{array}$$

$$\begin{array}{r} 9 \\ - 3 \\ \hline \end{array}$$

$$\begin{array}{r} 4 \\ + 3 \\ \hline \end{array}$$

$$\begin{array}{r} 3 \\ + 10 \\ \hline \end{array}$$

$$\begin{array}{r} 3 \\ + 3 \\ \hline \end{array}$$

$$\begin{array}{r} 12 \\ - 9 \\ \hline \end{array}$$

$$\begin{array}{r} 6 \\ - 3 \\ \hline \end{array}$$

$$\begin{array}{r} 6 \\ - 3 \\ \hline \end{array}$$

$7 - 4 = \underline{\quad}$ $11 + 3 = \underline{\quad}$ $3 + 5 = \underline{\quad}$ $13 - 3 = \underline{\quad}$

$6 + 3 = \underline{\quad}$ $6 + 3 = \underline{\quad}$ $11 - 3 = \underline{\quad}$ $3 + 12 = \underline{\quad}$

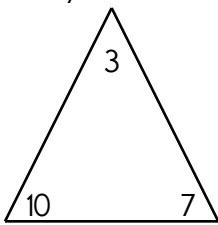
$6 - 3 = \underline{\quad}$ $1 + 3 = \underline{\quad}$ $15 - 12 = \underline{\quad}$ $9 - 3 = \underline{\quad}$

Name: _____

Adding and Subtracting 3

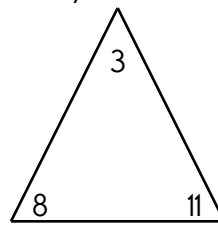
$6 - 3 = \underline{\quad}$	$3 - 1 = \underline{\quad}$	$7 - 3 = \underline{\quad}$	$6 - 3 = \underline{\quad}$	$7 + 3 = \underline{\quad}$
$3 - 1 = \underline{\quad}$	$15 - 12 = \underline{\quad}$	$8 - 3 = \underline{\quad}$	$4 - 3 = \underline{\quad}$	$3 - 3 = \underline{\quad}$
$7 - 4 = \underline{\quad}$	$3 + 7 = \underline{\quad}$	$6 - 3 = \underline{\quad}$	$7 - 3 = \underline{\quad}$	$3 - 3 = \underline{\quad}$
$13 - 3 = \underline{\quad}$	$12 - 9 = \underline{\quad}$	$7 + 3 = \underline{\quad}$	$15 - 12 = \underline{\quad}$	$8 + 3 = \underline{\quad}$
$8 - 3 = \underline{\quad}$	$7 - 4 = \underline{\quad}$	$5 - 3 = \underline{\quad}$	$3 + 10 = \underline{\quad}$	$8 - 3 = \underline{\quad}$
$12 - 3 = \underline{\quad}$	$13 - 3 = \underline{\quad}$	$4 - 3 = \underline{\quad}$	$11 - 3 = \underline{\quad}$	$13 - 3 = \underline{\quad}$
$15 - 12 = \underline{\quad}$	$5 - 3 = \underline{\quad}$	$10 + 3 = \underline{\quad}$	$6 - 3 = \underline{\quad}$	$10 - 3 = \underline{\quad}$
$5 - 3 = \underline{\quad}$	$3 + 11 = \underline{\quad}$	$4 - 3 = \underline{\quad}$	$9 - 3 = \underline{\quad}$	$12 - 9 = \underline{\quad}$
$14 - 11 = \underline{\quad}$	$14 - 11 = \underline{\quad}$	$3 + 1 = \underline{\quad}$	$11 - 3 = \underline{\quad}$	$4 - 3 = \underline{\quad}$

Fill in the blanks using numbers from the fact family.



<input type="text"/>	+	<input type="text"/>	=	<input type="text"/>
<input type="text"/>	+	<input type="text"/>	=	<input type="text"/>
<input type="text"/>	-	<input type="text"/>	=	<input type="text"/>
<input type="text"/>	-	<input type="text"/>	=	<input type="text"/>

Fill in the blanks using numbers from the fact family.



<input type="text"/>	+	<input type="text"/>	=	<input type="text"/>
<input type="text"/>	+	<input type="text"/>	=	<input type="text"/>
<input type="text"/>	-	<input type="text"/>	=	<input type="text"/>
<input type="text"/>	-	<input type="text"/>	=	<input type="text"/>

Name: _____

Jim has five red trucks and three blue trucks. He gave half of his trucks to Tim. How many trucks did he give to Tim?

Eric hated green peas. There were 24 peas on his plate. His mother said he had to eat them. "Yuck!" Eric said. He put 8 peas in his mouth. How many peas were left on his plate?

It is very hot today. Kevin drank six cups of water. Eric drank four cups of tea. Hunter drank seven cups of water. Robert drank three cups of water. How many cups of water did the boys drink?

Connor found 10 dimes and 5 nickels. How many coins did he find in all?

Fill in the numbers.

32	33	34	35	36	37
42	43		45		
52	53	54	55	56	57

	53	54	
	63		65

word root **bene** can mean **well or good**

benevolence, benevolent

Name: _____

Complete the pattern.

2	4	6	8	10	12	14	<u> </u>
---	---	---	---	----	----	----	-------------

1	2	3	4	5	6	7	<u> </u>
---	---	---	---	---	---	---	-------------

3	6	9	12	15	18	21	<u> </u>
---	---	---	----	----	----	----	-------------

5	10	15	20	25	30	35	<u> </u>
---	----	----	----	----	----	----	-------------

Complete the pattern.

4	8	12	16	20	24	<u> </u>	<u> </u>
---	---	----	----	----	----	-------------	-------------

8	10	12	14	16	18	<u> </u>	<u> </u>
---	----	----	----	----	----	-------------	-------------

3	4	5	6	7	8	<u> </u>	<u> </u>
---	---	---	---	---	---	-------------	-------------

Name: _____

Complete the pattern.

20	24	28	32	36			
----	----	----	----	----	--	--	--

10	15	20	25	30			
----	----	----	----	----	--	--	--

6	9	12	15	18			
---	---	----	----	----	--	--	--

20	24	28	32	36			
----	----	----	----	----	--	--	--


Complete the pattern.



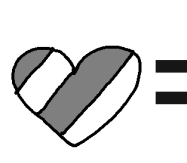
3	4	5	6	7			
---	---	---	---	---	--	--	--

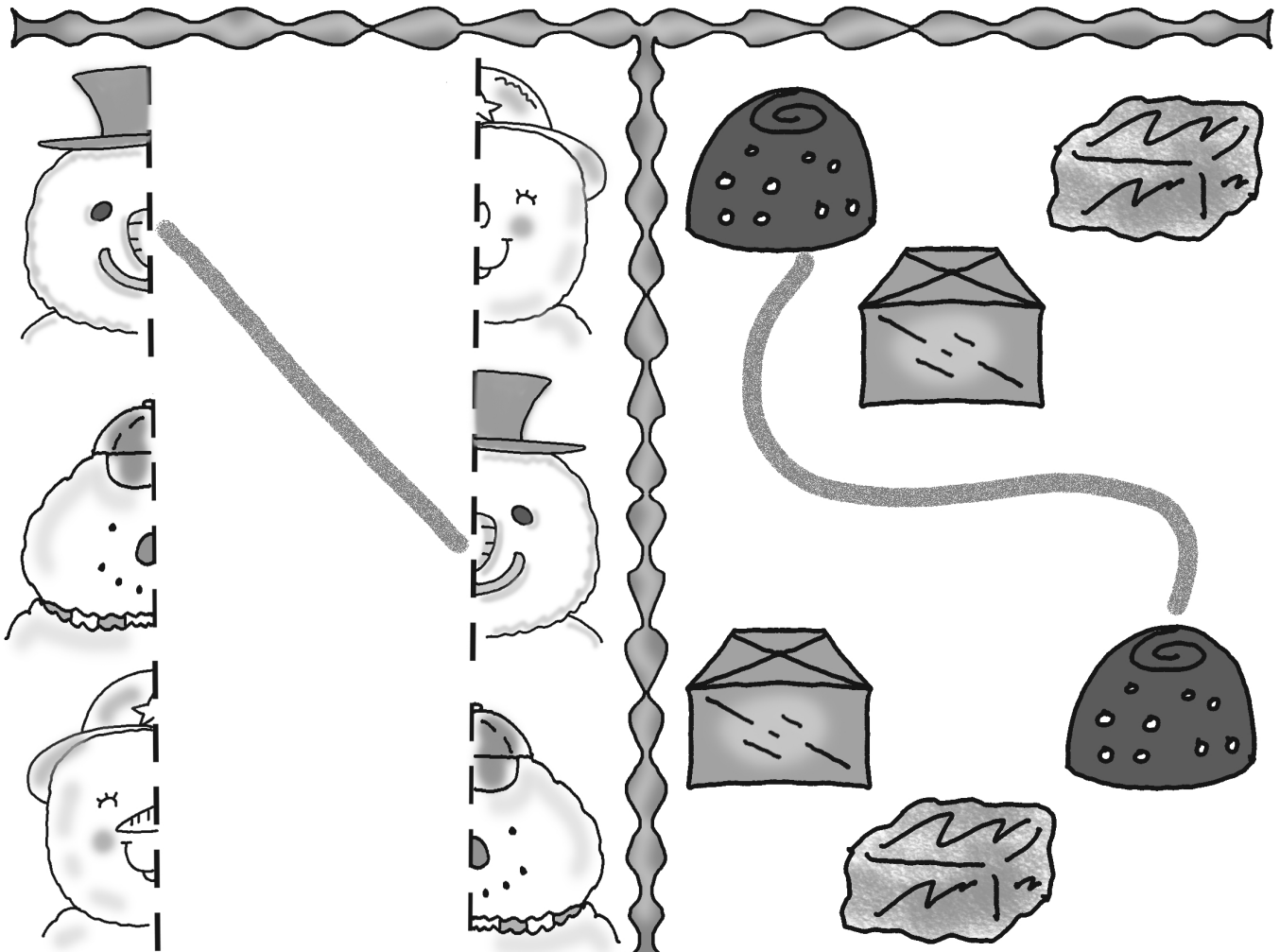
12	15	18	21	24			
----	----	----	----	----	--	--	--

15	20	25	30	35			
----	----	----	----	----	--	--	--

Name: _____



 = 3  =  =



©edHelper

Name: _____

Fill in the missing numbers.

Only rule - The same number CAN NOT be next to each other, in ANY direction.

Dark lines surround a block. Numbers to use in a block:

A block with 1 space has to be the number 1.

A block with 2 spaces must have the numbers 1 and 2.

A block with 3 spaces must have the numbers 1, 2, and 3.

A block with 4 spaces must have the numbers 1, 2, 3, and 4.

		1	4
		3	2
3	2	1	4
1	4	3	2

An entire block with 4 spaces is blank. Since the block is 4 spaces it uses the numbers 1-4.

4 3 1 2

		3	1
		4	2
3	1	3	1
4	2	4	2

An entire block with 4 spaces is blank. Since the block is 4 spaces it uses the numbers 1-4.

3 1 4 2

4	1	4	1
	2		2
4			1
3	2	3	2

Hint - These numbers are missing:

3 3 4 1

1	2	1	
4		4	3
		2	1
3	4	3	4

Hint - These numbers are missing:

2 1 2 3

Name: _____

Fill in the missing numbers.

	1	4	
4		3	1
	1	4	2
	2		1

Hint - These numbers are missing:

3 2 2 3 3 4

4	3	4	
			3
	3		1
2	1	2	3

Hint - These numbers are missing:

2 4 1 4 1 2

2	4		
1		2	4
	4	1	
1		2	4

Hint - These numbers are missing:

1 3 2 3 3 3

4		4	1
3			
	1	4	1
3	2	3	

Hint - These numbers are missing:

2 3 4 1 2 2

Circle the third letter.

X, F, 4, D, 7, 9, B, 3, R, 5,
A, 7, Z, 3, 8, 8, Z

$5 + 5 + 3 = \underline{\quad}$

$5 + 5 + 4 = \underline{\quad}$

$9 + 1 = \underline{\quad}$

$10 + 1 = \underline{\quad}$

word root **mob** can mean **move****mobilize, immobile**

Name: _____

Make change. You can use \$20, \$10, \$5, \$1, 25¢, 10¢, 5¢, or 1¢.

Use the fewest bills and coins to make \$17.42.

\$10	\$5	\$1	\$1
25¢	10¢	5¢	1¢

Use the fewest bills and coins to make \$46.34.

\$20			
25¢			

Use the fewest bills and coins to make \$55.38.


Use the fewest bills and coins to make \$46.36.

$$\begin{array}{r} 84 \\ + 15 \\ \hline \end{array}$$

Nine is an even number.


yes no

05:00

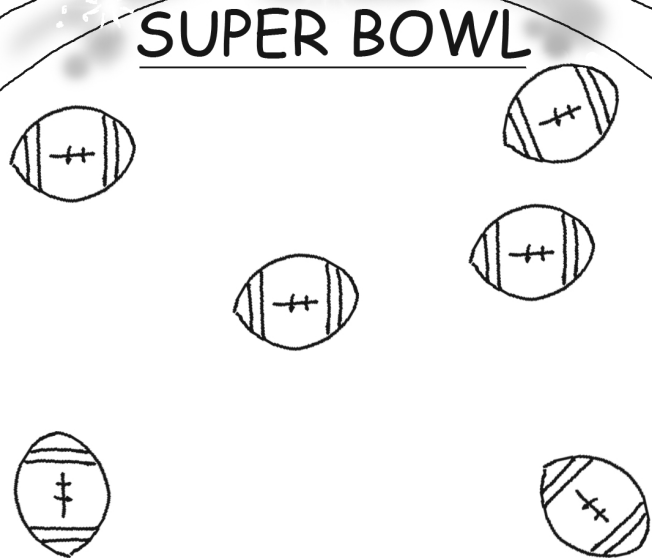


Name: _____

Check four things that have changed in the bottom box when compared to the top.




Draw more footballs to equal twelve.



Cross out the picture that is different.



Count how many candy hearts. Circle the number.



17

18

19

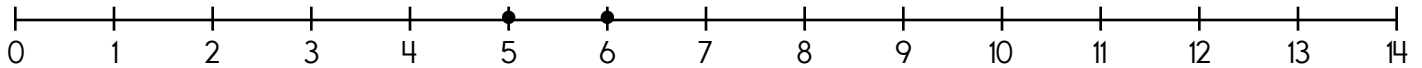
Name: _____

There were some marshmallows in the bag. Jack ate 6. Jacob ate 4. There are 10 marshmallows left. How many marshmallows were in the bag before Jack and Jacob ate some?

There were 20 pieces of birthday cake. After the picnic there were 3 pieces of cake. How many pieces of cake were eaten?

Ava made 10 cookies. She gave 5 cookies to her best friend. How many cookies are left?

Erin went fishing. She caught 2 big fish. She caught an old shoe. She caught 2 little fish. She caught 3 more big fish. How many fish did she catch in all?



$$6 - \underline{\quad} = 5$$

What is the sum of $4 + 1 + 2$?

☐ 7 ☐ 3 ☐ 11 ☐ 6

$$12 - 8 = \underline{\quad}$$

☐ 15 ☐ 4 ☐ 1

6 is more than

☐ 6 ☐ 7 ☐ 5

Write the missing letter to spell **find**.

fi_d fin_ _ind

Count by 2s.

16 20

six

Name: _____

Erin knew two magic tricks. She learned six new tricks. How many magic tricks can she do now?

Emily told on her brother. He put four bugs on her arms and one bug on her leg. How many bugs did her brother put on her in all?

How many?



How much is this?



26, ____, ____, 29, ____, 31,

Which number should replace the third blank?

April ate three slices of pizza. Gavin ate two slices of pizza. How many slices of pizza did April and Gavin together eat altogether?

There were six pink bears on the shelf. Mrs. Johnson put five more bears on the shelf. How many bears are on the shelf now?

Mary has five red crayons, four blue crayons, and three green crayons. How many crayons does she have in all?

Name: _____

Kevin walked 3 blocks to the store. He bought some socks. He walked 3 blocks to his grandmother's house. He walked 2 blocks home. How far did he walk in all?

Adam is ready to go back to school. He had 3 yellow pencils. His mother gave him 2 red pencils and 3 blue pencils. How many pencils did he have in all?

Nathan had 8 apple seeds. After he gave some apple seeds to David, he had 3 left. How many apple seeds did Nathan give to David?

Gavin has a garden. He grows peas, corn, beans, and peppers in the garden. He has five rows of peas, three rows of corn, four rows of beans, and three rows of peppers. How many rows of vegetables does Gavin have in all?

The bird ate 15 pieces of corn. Then he ate 4 more pieces. How many pieces did the bird eat in all?

Max had 8 shirts. His mother bought him some new shirts for school. Now he has 11 shirts. How many shirts did his mother buy?



Name: _____

Get a fidget spinner! Spin it.

I needed to spin _____ time(s) to finish.

$\begin{array}{r} 7 \\ + 3 \\ \hline \end{array}$	$\begin{array}{r} 7 \\ + 2 \\ \hline \end{array}$	$\begin{array}{r} 5 \\ + 8 \\ \hline \end{array}$	$\begin{array}{r} 8 \\ + 1 \\ \hline \end{array}$	$\begin{array}{r} 3 \\ + 9 \\ \hline \end{array}$	$\begin{array}{r} 1 \\ + 5 \\ \hline \end{array}$	$\begin{array}{r} 9 \\ + 5 \\ \hline \end{array}$	$\begin{array}{r} 9 \\ + 9 \\ \hline \end{array}$	$\begin{array}{r} 2 \\ + 8 \\ \hline \end{array}$
---	---	---	---	---	---	---	---	---

$\begin{array}{r} 3 \\ + 4 \\ \hline \end{array}$	$\begin{array}{r} 5 \\ + 1 \\ \hline \end{array}$	$\begin{array}{r} 8 \\ + 8 \\ \hline \end{array}$	$\begin{array}{r} 4 \\ + 2 \\ \hline \end{array}$	$\begin{array}{r} 7 \\ + 3 \\ \hline \end{array}$	$\begin{array}{r} 4 \\ + 8 \\ \hline \end{array}$	$\begin{array}{r} 2 \\ + 3 \\ \hline \end{array}$	$\begin{array}{r} 7 \\ + 6 \\ \hline \end{array}$	$\begin{array}{r} 5 \\ + 9 \\ \hline \end{array}$
---	---	---	---	---	---	---	---	---

$\begin{array}{r} 3 \\ + 9 \\ \hline \end{array}$	$\begin{array}{r} 4 \\ + 3 \\ \hline \end{array}$	$\begin{array}{r} 4 \\ + 8 \\ \hline \end{array}$	$\begin{array}{r} 9 \\ + 6 \\ \hline \end{array}$	$\begin{array}{r} 2 \\ + 7 \\ \hline \end{array}$	$\begin{array}{r} 2 \\ + 4 \\ \hline \end{array}$	$\begin{array}{r} 3 \\ + 8 \\ \hline \end{array}$	$\begin{array}{r} 7 \\ + 1 \\ \hline \end{array}$	$\begin{array}{r} 3 \\ + 6 \\ \hline \end{array}$
---	---	---	---	---	---	---	---	---

$\begin{array}{r} 5 \\ + 6 \\ \hline \end{array}$	$\begin{array}{r} 6 \\ + 2 \\ \hline \end{array}$	$\begin{array}{r} 3 \\ + 9 \\ \hline \end{array}$	$\begin{array}{r} 4 \\ + 1 \\ \hline \end{array}$	$\begin{array}{r} 5 \\ + 4 \\ \hline \end{array}$	$\begin{array}{r} 7 \\ + 1 \\ \hline \end{array}$	$\begin{array}{r} 1 \\ + 3 \\ \hline \end{array}$	$\begin{array}{r} 6 \\ + 3 \\ \hline \end{array}$	$\begin{array}{r} 5 \\ + 8 \\ \hline \end{array}$
---	---	---	---	---	---	---	---	---

$\begin{array}{r} 8 \\ + 5 \\ \hline \end{array}$	$\begin{array}{r} 9 \\ + 2 \\ \hline \end{array}$	$\begin{array}{r} 7 \\ + 4 \\ \hline \end{array}$	$\begin{array}{r} 9 \\ + 4 \\ \hline \end{array}$	$\begin{array}{r} 1 \\ + 2 \\ \hline \end{array}$	$\begin{array}{r} 5 \\ + 4 \\ \hline \end{array}$	$\begin{array}{r} 1 \\ + 4 \\ \hline \end{array}$	$\begin{array}{r} 6 \\ + 8 \\ \hline \end{array}$	$\begin{array}{r} 5 \\ + 6 \\ \hline \end{array}$
---	---	---	---	---	---	---	---	---



Name: _____

Spin again.

I needed to spin _____ time(s) to finish.

$\begin{array}{r} 6 \\ + 5 \\ \hline \end{array}$	$\begin{array}{r} 4 \\ + 1 \\ \hline \end{array}$	$\begin{array}{r} 2 \\ + 4 \\ \hline \end{array}$	$\begin{array}{r} 3 \\ + 2 \\ \hline \end{array}$	$\begin{array}{r} 7 \\ + 2 \\ \hline \end{array}$	$\begin{array}{r} 5 \\ + 1 \\ \hline \end{array}$	$\begin{array}{r} 3 \\ + 9 \\ \hline \end{array}$	$\begin{array}{r} 9 \\ + 7 \\ \hline \end{array}$	$\begin{array}{r} 5 \\ + 5 \\ \hline \end{array}$
---	---	---	---	---	---	---	---	---

$\begin{array}{r} 6 \\ + 5 \\ \hline \end{array}$	$\begin{array}{r} 4 \\ + 9 \\ \hline \end{array}$	$\begin{array}{r} 8 \\ + 7 \\ \hline \end{array}$	$\begin{array}{r} 4 \\ + 6 \\ \hline \end{array}$	$\begin{array}{r} 3 \\ + 4 \\ \hline \end{array}$	$\begin{array}{r} 7 \\ + 1 \\ \hline \end{array}$	$\begin{array}{r} 6 \\ + 7 \\ \hline \end{array}$	$\begin{array}{r} 2 \\ + 2 \\ \hline \end{array}$	$\begin{array}{r} 8 \\ + 3 \\ \hline \end{array}$
---	---	---	---	---	---	---	---	---

$\begin{array}{r} 4 \\ + 3 \\ \hline \end{array}$	$\begin{array}{r} 7 \\ + 5 \\ \hline \end{array}$	$\begin{array}{r} 4 \\ + 8 \\ \hline \end{array}$	$\begin{array}{r} 5 \\ + 3 \\ \hline \end{array}$	$\begin{array}{r} 8 \\ + 7 \\ \hline \end{array}$	$\begin{array}{r} 2 \\ + 3 \\ \hline \end{array}$	$\begin{array}{r} 5 \\ + 5 \\ \hline \end{array}$	$\begin{array}{r} 4 \\ + 1 \\ \hline \end{array}$	$\begin{array}{r} 4 \\ + 2 \\ \hline \end{array}$
---	---	---	---	---	---	---	---	---

$\begin{array}{r} 4 \\ + 7 \\ \hline \end{array}$	$\begin{array}{r} 5 \\ + 9 \\ \hline \end{array}$	$\begin{array}{r} 6 \\ + 8 \\ \hline \end{array}$	$\begin{array}{r} 5 \\ + 8 \\ \hline \end{array}$	$\begin{array}{r} 9 \\ + 3 \\ \hline \end{array}$	$\begin{array}{r} 7 \\ + 9 \\ \hline \end{array}$	$\begin{array}{r} 2 \\ + 8 \\ \hline \end{array}$	$\begin{array}{r} 3 \\ + 8 \\ \hline \end{array}$	$\begin{array}{r} 1 \\ + 5 \\ \hline \end{array}$
---	---	---	---	---	---	---	---	---

$\begin{array}{r} 2 \\ + 8 \\ \hline \end{array}$	$\begin{array}{r} 4 \\ + 7 \\ \hline \end{array}$	$\begin{array}{r} 8 \\ + 7 \\ \hline \end{array}$	$\begin{array}{r} 5 \\ + 5 \\ \hline \end{array}$	$\begin{array}{r} 9 \\ + 7 \\ \hline \end{array}$	$\begin{array}{r} 3 \\ + 8 \\ \hline \end{array}$	$\begin{array}{r} 9 \\ + 2 \\ \hline \end{array}$	$\begin{array}{r} 7 \\ + 2 \\ \hline \end{array}$	$\begin{array}{r} 4 \\ + 5 \\ \hline \end{array}$
---	---	---	---	---	---	---	---	---

Name: _____



edHelper

Color to show how to make the number.

5

●	●			

+ 5 =

Count by 2s. Color the numbers green.

1	2	3	4	5	6	7	8	9	10
11	12	13	14	15	16	17	18	19	20

Count by 2s.

2

4

6

12

There are 5 purple shirts and 9 pink shirts. How many shirts are there?

☐ 11 ☐ 14 ☐ 2

two

☐ 5 ☐ 8 ☐ 2

6 - 3 = _____

☐ 11 ☐ 6 ☐ 5 ☐ 12

☐ 3 ☐ 1

USED Q E K I S I D D U U U S E D U E F E S Y A X

SOME S X J I U S O M E D S O M M T B L C F K S P

THAT T T Y H N V T H A T D T T H X T A H T P I F

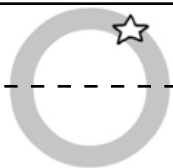
VOTE B G V O T E S C T U R F W V N V O I T E V T

Name: _____



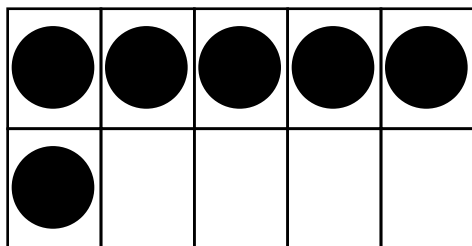
edHelper

Print the letter O.

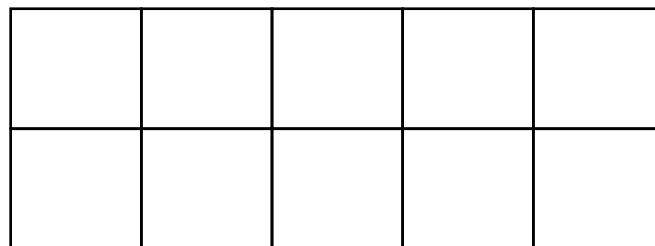


Fill in the missing numbers.

1	2	3	☆4	5	6	7	8	9	☆10
11	12		14	15	16		18		20



=



Which is a doubles fact?

☐ $8 + 8 = 16$

☐ $7 + 9 = 16$

☐ $2 + 1 = 3$

Which is a doubles fact?

☐ $6 + 6 = 12$

☐ $4 + 5 = 9$

☐ $2 + 7 = 9$

5 is more than

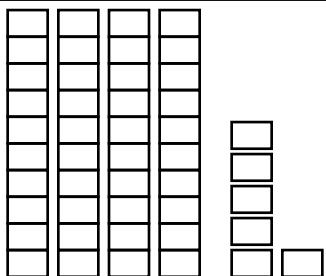
☐ 4

☐ 6

☐ 5

Write the missing sign.

11 5 = 6



____ tens ____ ones

Number = _____

g o o d r n
m f u n n y
y g o d m q
x d f d u n

Word Bank

good funny

Subtract.

$6 - 5 =$

$8 - 7 =$

Name: _____



edHelper



	+1	-1	+2	-2
48				
85				
23				
71				
56				
69				
34				
37				
20				
62				

Name: _____



edHelper

What is ten less than 57?

How much is this?



A, D, G, J, _____, P, S,
V, Y

Write the number that
comes before.

2 1

9 ____

5 ____

9, 11, 13, _____, 17, 19

49, _____, 51, _____, 53,

Which number should
replace the first blank?

What is ten more than 83?

Circle all the ways to make
6.

3 + 3 4 + 2 3 + 1
4 + 4 1 + 5 4 + 1
2 + 2 2 + 3 5 + 3

C, A, C, _____, C, A, C,
A, C, A

How many?



Circle the third number.

8, 6, Z, A, X, 2, 5, R, F, 4,
5, D, 2, B, 2, D, F, 9, 9

How many dots on the bug?



Name: _____



edHelper

Complete each pattern, using the same rule. Write what the rule is.

72, 63, 54, 45, _____, _____, 18, 9

117, _____, _____, _____, _____, 72, 63

Find the missing numbers. These both have the same rule. What is the rule?

If

$$1, 1 = 2$$

$$2, 2 = 4$$

$$3, 3 = 6$$

$$4, 4 = 8$$

Then

$$5, 5 = ?$$

If

$$6, 6 = 12$$

$$7, 7 = 14$$

$$8, 8 = 16$$

$$9, 9 = 18$$

Then

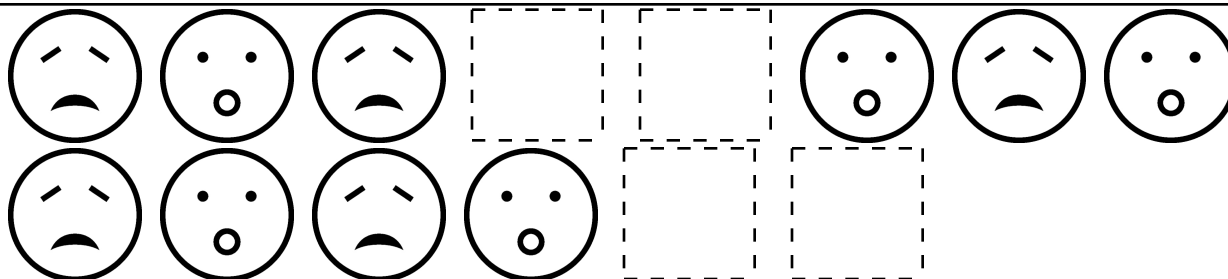

$$10, 10 = ?$$

Name: _____





edHelper

Draw the missing emojis. Explain the rule.



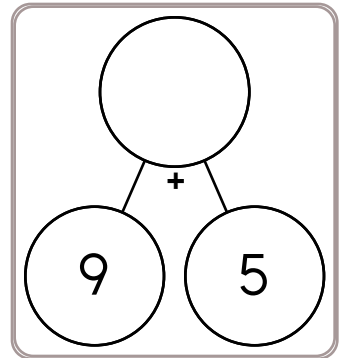
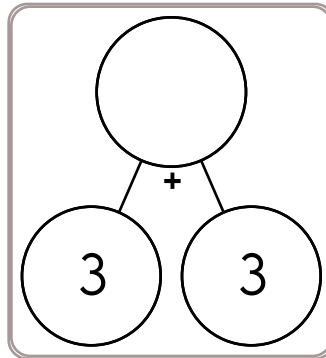
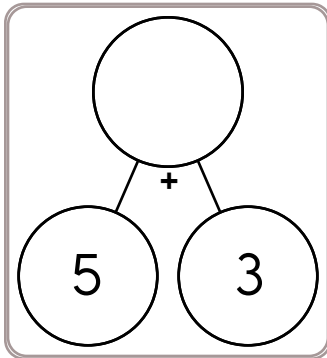
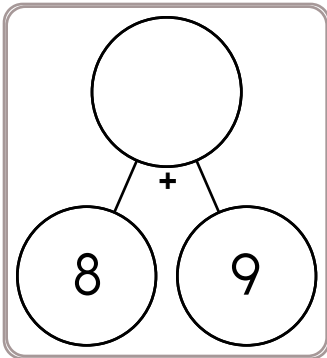
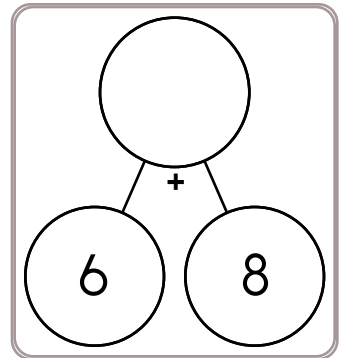
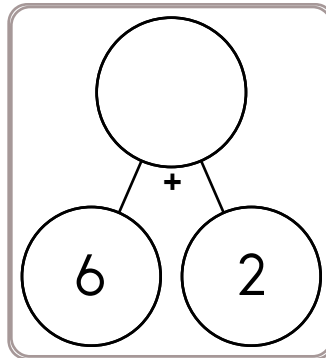
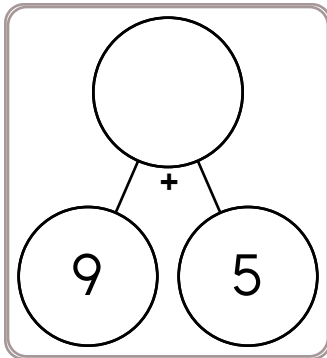
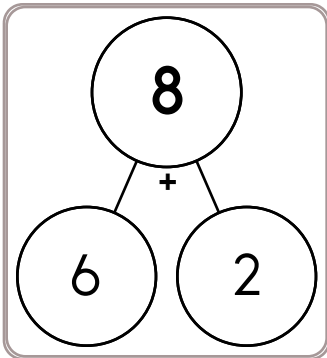
Draw the missing emojis. Explain the rule.



Name: _____



edHelper



$5 + 3 =$

$7 + 4 =$

$4 + 5 =$

$7 + 8 =$

$8 + 7 =$

$9 + 8 =$

$3 + 6 =$

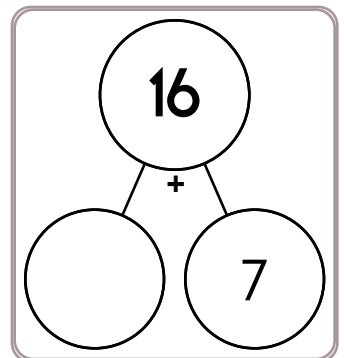
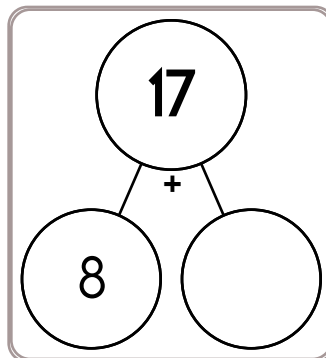
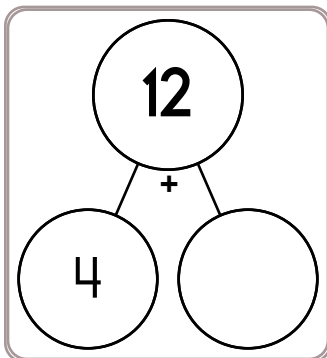
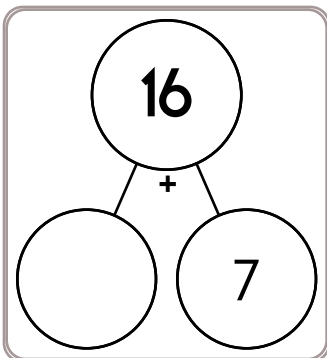
$6 + 3 =$

$7 + 4 =$

$7 + 6 =$

$5 + 4 =$

$4 + 2 =$



Name: _____



edHelper

$\begin{array}{r} 4 \\ + 2 \\ \hline \end{array}$	$\begin{array}{r} 7 \\ + 7 \\ \hline \end{array}$	$\begin{array}{r} 6 \\ + 7 \\ \hline \end{array}$	$\begin{array}{r} 6 \\ + 5 \\ \hline \end{array}$	$\begin{array}{r} 2 \\ + 8 \\ \hline \end{array}$	$\begin{array}{r} 2 \\ + 7 \\ \hline \end{array}$	$\begin{array}{r} 3 \\ + 6 \\ \hline \end{array}$	$\begin{array}{r} 5 \\ + 3 \\ \hline \end{array}$	$\begin{array}{r} 7 \\ + 1 \\ \hline \end{array}$
---	---	---	---	---	---	---	---	---

$\begin{array}{r} 9 \\ + 2 \\ \hline \end{array}$	$\begin{array}{r} 2 \\ + \square \\ \hline \end{array}$	$\begin{array}{r} \square \\ + 1 \\ \hline \end{array}$	$\begin{array}{r} 5 \\ + \square \\ \hline \end{array}$	$\begin{array}{r} 9 \\ + 6 \\ \hline \end{array}$	$\begin{array}{r} \square \\ + 1 \\ \hline \end{array}$	$\begin{array}{r} 9 \\ + \square \\ \hline \end{array}$	$\begin{array}{r} 4 \\ + \square \\ \hline \end{array}$	$\begin{array}{r} 9 \\ + 7 \\ \hline \end{array}$
---	---	---	---	---	---	---	---	---

$\begin{array}{r} 7 \\ + 6 \\ \hline \end{array}$	$\begin{array}{r} 1 \\ + 9 \\ \hline \end{array}$	$\begin{array}{r} 8 \\ + 9 \\ \hline \end{array}$	$\begin{array}{r} 7 \\ + 9 \\ \hline \end{array}$	$\begin{array}{r} 7 \\ + 4 \\ \hline \end{array}$	$\begin{array}{r} 8 \\ + 3 \\ \hline \end{array}$	$\begin{array}{r} 8 \\ + 7 \\ \hline \end{array}$	$\begin{array}{r} 8 \\ + 1 \\ \hline \end{array}$	$\begin{array}{r} 3 \\ + 9 \\ \hline \end{array}$
---	---	---	---	---	---	---	---	---

$\begin{array}{r} \square \\ + 4 \\ \hline \end{array}$	$\begin{array}{r} \square \\ + 7 \\ \hline \end{array}$	$\begin{array}{r} 1 \\ + \square \\ \hline \end{array}$	$\begin{array}{r} \square \\ + 2 \\ \hline \end{array}$	$\begin{array}{r} \square \\ + 1 \\ \hline \end{array}$	$\begin{array}{r} 3 \\ + 1 \\ \hline \end{array}$	$\begin{array}{r} 8 \\ + \square \\ \hline \end{array}$	$\begin{array}{r} \square \\ + 5 \\ \hline \end{array}$	$\begin{array}{r} 6 \\ + \square \\ \hline \end{array}$
---	---	---	---	---	---	---	---	---

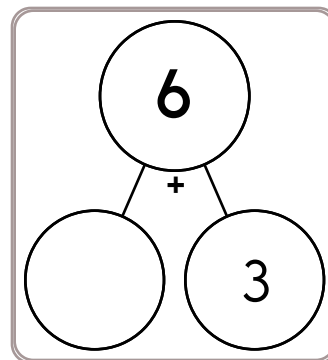
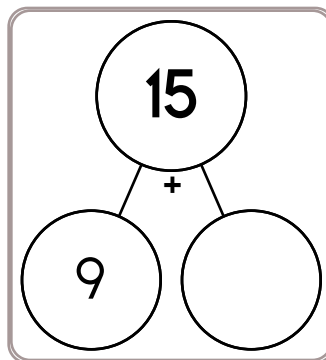
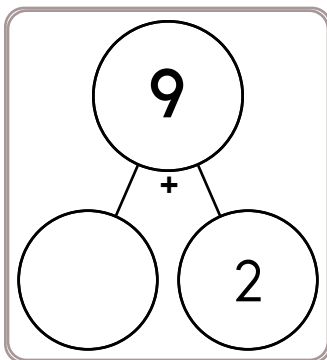
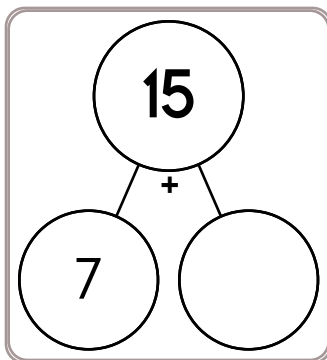
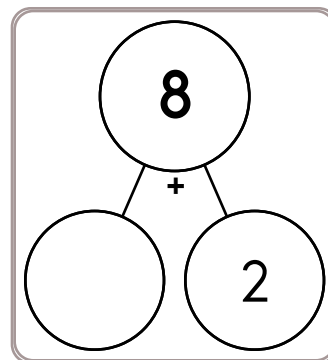
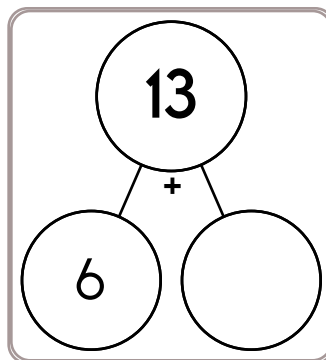
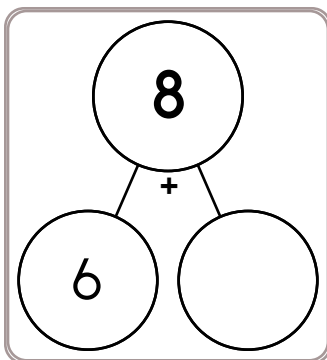
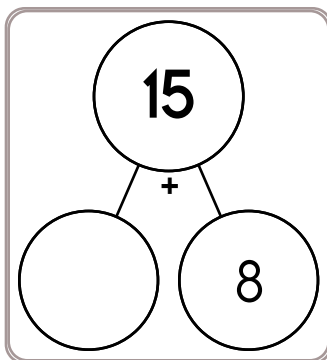
$\begin{array}{r} 7 \\ + 3 \\ \hline \end{array}$	$\begin{array}{r} 1 \\ + 1 \\ \hline \end{array}$	$\begin{array}{r} 3 \\ + 2 \\ \hline \end{array}$	$\begin{array}{r} 1 \\ + 8 \\ \hline \end{array}$	$\begin{array}{r} 1 \\ + 2 \\ \hline \end{array}$	$\begin{array}{r} 2 \\ + 9 \\ \hline \end{array}$	$\begin{array}{r} 6 \\ + 8 \\ \hline \end{array}$	$\begin{array}{r} 5 \\ + 4 \\ \hline \end{array}$	$\begin{array}{r} 5 \\ + 6 \\ \hline \end{array}$
---	---	---	---	---	---	---	---	---

$\begin{array}{r} \square \\ + 8 \\ \hline \end{array}$	$\begin{array}{r} 3 \\ + \square \\ \hline \end{array}$	$\begin{array}{r} 9 \\ + \square \\ \hline \end{array}$	$\begin{array}{r} 9 \\ + \square \\ \hline \end{array}$	$\begin{array}{r} \square \\ + 4 \\ \hline \end{array}$	$\begin{array}{r} \square \\ + 2 \\ \hline \end{array}$	$\begin{array}{r} 4 \\ + \square \\ \hline \end{array}$	$\begin{array}{r} \square \\ + 5 \\ \hline \end{array}$	$\begin{array}{r} \square \\ + 4 \\ \hline \end{array}$
---	---	---	---	---	---	---	---	---

Name: _____



edHelper



$7 + 2 =$

$4 + 3 =$

$4 + 8 =$

$9 + 7 =$

$5 + 9 =$

$8 + 4 =$

$9 + 5 =$

$3 + 6 =$

$5 + 6 =$

$7 + 3 =$

$2 + 2 =$

$3 + 7 =$



$6 - \underline{\quad} = 2$

$8 - \underline{\quad} = 2$

$\underline{\quad} - 5 = 4$

$\underline{\quad} - 3 = 0$

$\underline{\quad} - 6 = 3$

$6 - \underline{\quad} = 3$

$\underline{\quad} - 3 = 3$

$9 - \underline{\quad} = 1$

$9 - \underline{\quad} = 6$

$\underline{\quad} - 2 = 0$

$\underline{\quad} - 7 = 1$

$4 - \underline{\quad} = 2$

Name: _____



edHelper

$\begin{array}{r} 2 \\ + 1 \\ \hline \end{array}$	$\begin{array}{r} 9 \\ + 6 \\ \hline \end{array}$	$\begin{array}{r} 3 \\ + 1 \\ \hline \end{array}$	$\begin{array}{r} 6 \\ + 1 \\ \hline \end{array}$	$\begin{array}{r} 6 \\ + 4 \\ \hline \end{array}$	$\begin{array}{r} 9 \\ + 1 \\ \hline \end{array}$	$\begin{array}{r} 4 \\ + 7 \\ \hline \end{array}$	$\begin{array}{r} 1 \\ + 5 \\ \hline \end{array}$	$\begin{array}{r} 9 \\ + 4 \\ \hline \end{array}$
---	---	---	---	---	---	---	---	---

$\begin{array}{r} 5 \\ + 9 \\ \hline \end{array}$	$\begin{array}{r} \square \\ + 4 \\ \hline \end{array}$	$\begin{array}{r} \square \\ + 5 \\ \hline \end{array}$	$\begin{array}{r} 7 \\ + \square \\ \hline \end{array}$	$\begin{array}{r} \square \\ + 7 \\ \hline \end{array}$	$\begin{array}{r} 7 \\ + 5 \\ \hline \end{array}$	$\begin{array}{r} 3 \\ + \square \\ \hline \end{array}$	$\begin{array}{r} 6 \\ + 7 \\ \hline \end{array}$	$\begin{array}{r} 6 \\ + 8 \\ \hline \end{array}$
---	---	---	---	---	---	---	---	---

$\begin{array}{r} 3 \\ + 9 \\ \hline \end{array}$	$\begin{array}{r} 7 \\ + 8 \\ \hline \end{array}$	$\begin{array}{r} 2 \\ + 7 \\ \hline \end{array}$	$\begin{array}{r} 7 \\ + 7 \\ \hline \end{array}$	$\begin{array}{r} 4 \\ + 2 \\ \hline \end{array}$	$\begin{array}{r} 7 \\ + 6 \\ \hline \end{array}$	$\begin{array}{r} 8 \\ + 8 \\ \hline \end{array}$	$\begin{array}{r} 3 \\ + 8 \\ \hline \end{array}$	$\begin{array}{r} 6 \\ + 6 \\ \hline \end{array}$
---	---	---	---	---	---	---	---	---

$\begin{array}{r} \square \\ + 3 \\ \hline \end{array}$	$\begin{array}{r} \square \\ + 4 \\ \hline \end{array}$	$\begin{array}{r} 4 \\ + 3 \\ \hline \end{array}$	$\begin{array}{r} \square \\ + 5 \\ \hline \end{array}$	$\begin{array}{r} 5 \\ + \square \\ \hline \end{array}$	$\begin{array}{r} 5 \\ + 8 \\ \hline \end{array}$	$\begin{array}{r} \square \\ + 9 \\ \hline \end{array}$	$\begin{array}{r} 5 \\ + \square \\ \hline \end{array}$	$\begin{array}{r} 1 \\ + \square \\ \hline \end{array}$
---	---	---	---	---	---	---	---	---

$\begin{array}{r} 8 \\ + 9 \\ \hline \end{array}$	$\begin{array}{r} 2 \\ + 9 \\ \hline \end{array}$	$\begin{array}{r} 1 \\ + 4 \\ \hline \end{array}$	$\begin{array}{r} 2 \\ + 2 \\ \hline \end{array}$	$\begin{array}{r} 2 \\ + 6 \\ \hline \end{array}$	$\begin{array}{r} 5 \\ + 1 \\ \hline \end{array}$	$\begin{array}{r} 1 \\ + 7 \\ \hline \end{array}$	$\begin{array}{r} 3 \\ + 4 \\ \hline \end{array}$	$\begin{array}{r} 5 \\ + 6 \\ \hline \end{array}$
---	---	---	---	---	---	---	---	---

$\begin{array}{r} 9 \\ + \square \\ \hline \end{array}$	$\begin{array}{r} 7 \\ + 2 \\ \hline \end{array}$	$\begin{array}{r} 9 \\ + \square \\ \hline \end{array}$	$\begin{array}{r} 5 \\ + \square \\ \hline \end{array}$	$\begin{array}{r} \square \\ + 8 \\ \hline \end{array}$	$\begin{array}{r} 3 \\ + 2 \\ \hline \end{array}$	$\begin{array}{r} 3 \\ + \square \\ \hline \end{array}$	$\begin{array}{r} \square \\ + 2 \\ \hline \end{array}$	$\begin{array}{r} 8 \\ + \square \\ \hline \end{array}$
---	---	---	---	---	---	---	---	---

Name: _____



edHelper

Get a fidget spinner! Spin it.

I needed to spin _____ time(s) to finish.

Circle all the ways to make 8.

$6 + 3$ $1 + 7$ $5 + 3$
 $6 + 2$ $4 + 4$ $1 + 6$
 $6 + 4$ $5 + 2$ $4 + 2$

How many?



Circle the third number.

7, B, Z, 1, 1, X, 1, F, R, 7,
D, 9, 6, 7, A, A, R, 8, 2

In two years Mary will be in the ninth grade. What grade is she currently in?

Hannah is reading book 2 of the My Club series. There are 7 books in the series. After she finishes book 2, how many more books will she read to finish the series?

C, H, _____, R, W

Circle the fifth letter.

D, A, 9, 4, 4, X, R, 2, Z, F,
6, 9, B, 3, B, Z, 8

$$9 + 3 = \underline{\quad}$$

$$10 + 3 = \underline{\quad}$$

How many?



Circle the even numbers.

8 46 14
5 53 87
31 499 132

Circle the odd numbers.

7 23 61
2 89 96
88 514 975

Which shows the equation four plus eight equals twelve?

Name: _____



Mr. Miller has 15 ties. He gave his brother 8 ties. How many ties does he have now?	Rosa has 3 coins. They equal 75¢. What coins does Rosa have?	A chocolate milkshake costs 92¢. Justin has 11 pennies. How many more pennies does he need?
---	--	---

plural		add s	add es	drop e add s	drop y add ies	oddball
1. leader	_____ leaders	<input checked="" type="checkbox"/>	<input type="checkbox"/>	<input type="checkbox"/>	<input type="checkbox"/>	<input type="checkbox"/>
2. theft	_____	<input type="checkbox"/>	<input type="checkbox"/>	<input type="checkbox"/>	<input type="checkbox"/>	<input type="checkbox"/>
3. sprain	_____	<input type="checkbox"/>	<input type="checkbox"/>	<input type="checkbox"/>	<input type="checkbox"/>	<input type="checkbox"/>
4. cold	_____	<input type="checkbox"/>	<input type="checkbox"/>	<input type="checkbox"/>	<input type="checkbox"/>	<input type="checkbox"/>
5. baby	_____	<input type="checkbox"/>	<input type="checkbox"/>	<input type="checkbox"/>	<input type="checkbox"/>	<input type="checkbox"/>
6. jelly	_____	<input type="checkbox"/>	<input type="checkbox"/>	<input type="checkbox"/>	<input type="checkbox"/>	<input type="checkbox"/>

word root **il** can mean **into or not** **illuminate, illumination, illuminative**

Name: _____



edHelper

<p>Kayla saw 14 birds in the tree. Seven flew away. How many birds were left in the tree?</p>	<p>Don has 27 lemon drops. He gives 16 to Scott. How many lemon drops does Don have left?</p>	<p>Wendy saved 33 pennies. She gave 12 pennies to Jacob. How many pennies are left?</p>
---	---	---

<p>It is your turn. Write O to make your move.</p> <table style="margin: 20px auto; border-collapse: collapse;"> <tr> <td style="border: 1px solid black; padding: 5px; text-align: center;">X</td> <td style="border: 1px solid black; width: 20px; height: 20px;"></td> <td style="border: 1px solid black; padding: 5px; text-align: center;">O</td> </tr> <tr> <td style="border: 1px solid black; width: 20px; height: 20px;"></td> <td style="border: 1px solid black; width: 20px; height: 20px;"></td> <td style="border: 1px solid black; width: 20px; height: 20px;"></td> </tr> <tr> <td style="border: 1px solid black; padding: 5px; text-align: center;">O</td> <td style="border: 1px solid black; width: 20px; height: 20px;"></td> <td style="border: 1px solid black; padding: 5px; text-align: center;">X</td> </tr> </table>	X		O				O		X	$\begin{array}{r} 51 \\ + 35 \\ \hline \end{array}$	<p>100 less than 853</p>	$\begin{array}{r} 74 \\ 53 \\ + 17 \\ \hline \end{array}$
X		O										
O		X										

<p>If March 8 is on a Monday, then what day of the week will March 10 fall on?</p> <p>_____</p>	<div style="text-align: center; margin-bottom: 10px;"> </div> <div style="display: flex; align-items: center;"> <div style="text-align: center; margin-right: 10px;"> 8 _____ </div> <div style="flex-grow: 1; border-bottom: 1px dashed black; position: relative;"> <div style="position: absolute; right: 0; bottom: 0; text-align: right; margin-right: 10px;">28</div> </div> </div>
---	--


$\begin{array}{r} 6 \\ 7 \\ + 5 \\ \hline \end{array}$	$\begin{array}{r} 60 \\ + 34 \\ \hline \end{array}$	<p>Rewrite the sentence correctly.</p> <p>her bought a new purse boots and a coat</p> <p>_____</p> <p>_____</p>
--	---	---

Name: _____



edHelper

Circle the words that should be capitalized.



new year's day

party tuesday

january fun clock

Circle the correct plurals.



mitten mittens mittans mittenes

hat hattes hats hates hathes

coat coats coates coatts


penguin penguines penguins

scarf scarfs scarvs scarves


Circle the correct contractions.

hasn't youv'e
could'nt she'll
I've wo'nt

Write the contraction to each penguin pair.







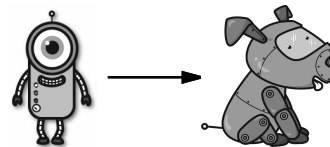
©edHelper.com



Name: _____



edHelper

Help Robot find Rover. Color the boxes that have a sum of 8 or 7 to make a path.



	$2 + 4 =$	$4 + 8 =$	$3 + 2 =$	$4 + 5 =$	$2 + 4 =$	$2 + 4 =$	$5 + 5 =$
$4 + 3 =$	$6 + 2 =$	$3 + 4 =$	$3 + 4 =$	$1 + 6 =$	$2 + 6 =$	$1 + 6 =$	$3 + 9 =$
$8 + 3 =$	$1 + 5 =$	$7 + 7 =$	$6 + 5 =$	$4 + 6 =$	$1 + 2 =$	$3 + 4 =$	$9 + 7 =$
$2 + 1 =$	$6 + 4 =$	$6 + 7 =$	$3 + 2 =$	$6 + 1 =$	$2 + 5 =$	$1 + 7 =$	$5 + 8 =$
$1 + 6 =$	$2 + 6 =$	$6 + 2 =$	$1 + 7 =$	$1 + 7 =$	$7 + 9 =$	$7 + 6 =$	$4 + 8 =$
$6 + 2 =$	$6 + 1 =$	$6 + 1 =$	$4 + 3 =$	$1 + 7 =$	$3 + 5 =$	$4 + 3 =$	$4 + 2 =$
$7 + 6 =$	$8 + 1 =$	$9 + 3 =$	$8 + 6 =$	$1 + 4 =$	$7 + 1 =$	$1 + 6 =$	

Name: _____



edHelper

+	3		5	9
7		11		16
	$\frac{7}{\quad} + \frac{3}{\quad}$	$\frac{7}{\quad} + \frac{\quad}{\quad}$	$\frac{7}{\quad} + \frac{5}{\quad}$	$\frac{7}{\quad} + \frac{9}{\quad}$
	10		12	
	$\frac{\quad}{\quad} + \frac{3}{\quad}$	$\frac{\quad}{\quad} + \frac{\quad}{\quad}$	$\frac{\quad}{\quad} + \frac{5}{\quad}$	$\frac{\quad}{\quad} + \frac{9}{\quad}$
				15
	$\frac{\quad}{\quad} + \frac{3}{\quad}$	$\frac{\quad}{\quad} + \frac{\quad}{\quad}$	$\frac{\quad}{\quad} + \frac{5}{\quad}$	$\frac{\quad}{\quad} + \frac{9}{\quad}$
			7	
	$\frac{\quad}{\quad} + \frac{3}{\quad}$	$\frac{\quad}{\quad} + \frac{\quad}{\quad}$	$\frac{\quad}{\quad} + \frac{5}{\quad}$	$\frac{\quad}{\quad} + \frac{9}{\quad}$

8 - 4 = _____	6 tens and 2 ones	9 + 6 = _____
<input type="radio"/> 4 <input type="radio"/> 4 <input type="radio"/> 3	<input type="radio"/> 26 <input type="radio"/> 6 <input type="radio"/> 62	<input type="radio"/> 15 <input type="radio"/> 6 <input type="radio"/> 96

TELL T L G L N X L E E Q U T E L L S L W T U H L

KID B K K D D W H G D K U H D K I D K I I C N F

CLAM U P L E N C L A M A Y I R A C L A I M H A Z

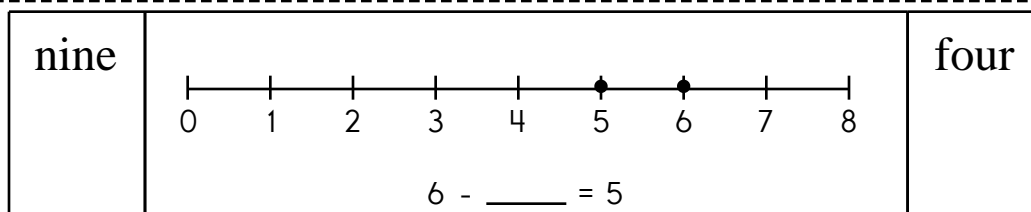
BUY B Y E K L Y S Y T A J B D B U Y Y R X B U Y

MANY R M A N Y O N U Y M F J A M U N Y M Y P H D

SHARK M O H R A B S A K S V S H E R K S H A R K R

FOG F O G U O C A W O Q B Z K X F F E G V L P G

SUN P S U H N S T I V S X J Y S W S U N U A N E



Name: _____



edHelper

☒ $1 + 9 = 10$

☐ $3 + 3 =$

☐ $8 + 2 = 10$

☐ $3 + 5 = 8$

☐ $3 + 9 = 12$

☐ $3 + 6 =$

☐ $8 + 4 = 12$

☐ $7 + 6 =$

☐ $9 + 5 = 14$

☐ $5 + 4 =$

☐ $3 + 4 =$

7	15	12	12	11	3	14	$9 + 5 = 14$	1	20	12	4	1	4
15	3	11	3	3	1	5	11	16	5	4	$3 + 9 = 12$	6	15
13	8	5	9	9	2	12	12	13	9	9	6	9	8
3	6	8	9	26	8	10	13	4	5	8	5	12	6
9	6	1	8	6	1	12	9	4	9	6	15	9	3
2	4	9	9	12	25	8	20	$3 + 5 = 8$	3	13	6	3	6
3	7	8	13	7	6	1	3	4	1	14	18	11	5
13	22	4	10	3	10	10	9	4	7	6	1	3	5
22	8	10	8	4	3	8	11	9	7	6	7	10	5
7	25	10	6	27	4	5	23	15	6	10	13	2	8
6	9	5	$1 + 9 = 10$	12	7	3	6	9	15	3	1	10	3
29	5	5	24	9	4	3	7	8	11	9	$8 + 2 = 10$	10	9
3	15	4	5	9	19	8	1	2	3	6	4	2	13
10	1	8	9	9	9	$8 + 4 = 12$	5	4	3	3	11	2	14



Write
operation.

Write = sign.

Circle.

☒ $2 + 3 = 5$

☐ $3 + 6 = 9$

☐ $9 + 6 =$

☐ $5 + 8 = 13$

☐ $3 + 1 =$

☐ $5 + 4 =$

☐ $6 + 1 = 7$

☐ $9 + 1 =$

☐ $8 + 9 = 17$

☐ $3 + 4 =$

1	4	23	5	5	10	2	$9 + 4 = 13$	26	11	8	9	6	6
5	3	7	14	$2 + 3 = 5$	9	9	10	9	10	12	9	18	4
11	8	3	17	6	$3 + 6 = 9$	14	18	4	4	5	3	3	4
9	10	12	13	4	16	9	6	15	18	$8 + 9 = 17$	9	14	8
9	8	18	13	15	16	8	1	5	8	9	9	13	1
6	2	3	9	24	1	5	21	5	9	1	13	18	13
1	1	7	4	6	1	3	4	1	1	1	8	16	15
1	12	14	12	5	28	3	4	6	4	7	10	7	9
$6 + 1 = 7$	3	1	7	9	8	7	12	$5 + 8 = 13$	9	6	18		
8	9	7	8	6	1	6	1	1	3	20	12	5	2
13	4	9	3	1	8	14	6	5	3	6	1	11	2
9	18	25	17	1	10	21	16	5	4	10	17	8	2
28	6	3	11	14	4	1	9	5	4	9	12	7	3

Name: _____



edHelper

How many?



17, ____, ____, ____, 21, 22

Which number should
replace the first blank?

How much is this?



Write these numbers in
order from smallest to
largest.

12, 14, 0

4 tens + 0 ones

14, 16, 18, 20, ____, 24

____, ____, ____

13, 15, ____, 19, 21, 23, 25,
27, 29, 31

10, ____, 14, 16, 18, 20,
22, 24

What is ten more than 78?

57, ____, 59, ____, 61,

Which number should
replace the first blank?

How much is this?




What is ten less than 53?

Name: _____

Only use a pencil to write the numbers on the blank lines. You do not need any scrap paper! Solve it in your head. If you forget a number, then start over.

Cool, huh?



imagine 8 in your head

double it

Write the number.

A B

imagine 4 in your head

add 3

add 8

Write the number.

C D

imagine 6 in your head

add 8

subtract 2

Write the number.

E F

imagine 9 in your head

subtract 2

subtract 5

Write the number.

G

What is the sum?

A + B + C + D + E + F + G

Wow! Great job! That's the answer, but do you know how to SPELL the number?

 h e

7 before 18 _____

7 after 16 _____

5 before 16 _____

8 before 14 _____

4 after 17 _____

4 before 15 _____

2 before 19 _____

2 after 11 _____

1 before 17 _____

6 before 11 _____

6 after 18 _____




3 before 12 _____

Name: _____



edHelper

Puzzle:

2		11
		8
6	13	+

Work Area:

2		11
		8
6	13	+

The sum for each column
and row is given.



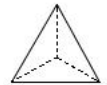
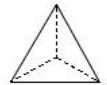


= _____



= _____

Puzzle:

		10
		8
9	9	+

Work Area:

		10
		8
9	9	+

The sum for each column
and row is given.



= _____



= _____

49, ____, 51, ____, ____, 54

Which number should
replace the second
blank?

$$9 + 3 = \underline{\quad}$$

$$10 + 3 = \underline{\quad}$$

How much is this?



word root **in** can mean **not**

insomnia, insane

Name: _____




edHelper

Mental Math

— #1 —

- ☐ Start with the sum of 4 and 3.

7



- ☐ Add the number of days in a week.

9 1 8 6 5 1 4 8 3 4 (Circle your answer to double check you are correct.)

- ☐ Subtract 5.

6 9 3 1 1 9 8 3 2 4

- ☐ Divide by 3.

2 9 8 7 6 8 1 3 5 7

Mental Math

— #2 —

- ☐ Start with the sum of 7 and 12.

7 6 8 9 1 9 2 7 3 6 (Circle your answer to double check you are correct.)

- ☐ Add the number of legs on 3 chickens.


2 5 9 0 2 6 7 7 4 4

- ☐ Increase that number by 5.

9 1 3 0 4 4 3 3 6 0

- ☐ Add the digits in your number. The sum of that is your new number.

7 4 6 5 9 3 3 2 8 3



Name: _____



edHelper

Get a fidget spinner! Spin it.

I needed to spin _____ time(s) to finish.

How many?



How many dots on the bug?



Circle the fourth letter.

D, 7, 8, R, A, 4, 9, F, B, 4,
9, X, Z, A, 8, D, 2

Write the number that is 1
more.

17 ____

79 ____

32 ____

What comes before and
after?

____, 83, ____

____, 113, ____


Write the number that is 2
more.

15 ____

24 ____

43 ____

What time is it?



____:____

Circle all the ways to make
8.

8 + 2 5 + 3 4 + 4
2 + 6 1 + 8 1 + 7
5 + 2 4 + 2 7 + 3

Write these numbers in
order from smallest to
largest.

13, 7, 2

27, ____, 29, ____, 31,

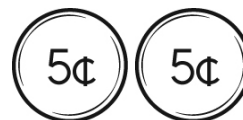
____, ____

Which number should
replace the first blank?

How many?



How much is this?





Name: _____



edHelper

Spin again.

I needed to spin _____ time(s) to finish.

Circle the fifth number.

F, 7, R, X, 7, 5, 3, D, Z, 1,
1, B, 6, A, 8, A, 9

What is ten less than 63?

How many?



What is ten more than 68?

$$9 + 2 = \underline{\quad}$$

$$10 + 2 = \underline{\quad}$$

What is ten more than 72?

0, 6, 0, 6, 0, 6, 0, _____,

0, 6, 0, 6, 0, 6

Draw a rectangle that is
about 1 cm long on each
side. Do not use a ruler.
Just guess!

Write these numbers in
order from largest to
smallest.

13, 11, 15

____, _____, _____

How many?



Circle the fourth number.

D, 4, R, 4, Z, 2, 4, X, 8, F,
9, A, B, 6, 8, 6, Z, A, D


Circle the third letter.

X, 1, Z, 7, 8, D, 6, A, 4, B,
8, F, R, 9, 9, F, X


Subscribe to Get Answer Keys



and Weekly Math, Challenge Workbooks, Posters, Daily Reading, and so much more!



SUBSCRIBE TO RECEIVE EVEN MORE
Answer Keys • Effective Activities • Access
to as many printables as you need!



edHelper.com



It's NO PREP at edHelper.

More history!



edHelper.com!



New online math games!



New ideas!



More science!



More puzzles!

