
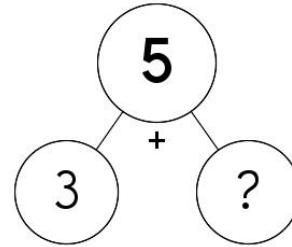


Name: _____

What number is the little or hour hand on?



Skill: Numbers to 5




What is the missing number?

4 3 2 5

Skill: Addition and Subtraction

How many?



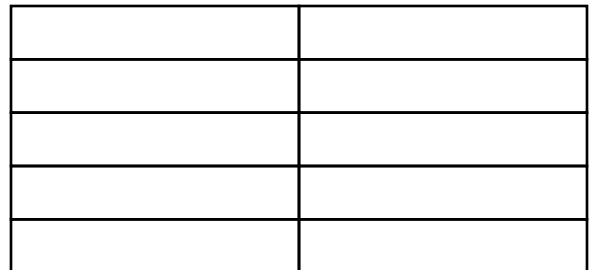
4 (four)

5 (five)

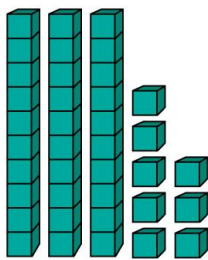
1 (one)

Skill: Numbers to 10

Color two-tenths of the figure.



Skill: Fractions



How many? Write the number.

Skill: Numbers to 1,000

April has 5 points.

Erin has 4 more points than April.

How many points does April have?

7 5 20 2

Skill: Addition and Subtraction to 20

Name: _____

Complete each pattern, using the same rule. Write what the rule is.

D, ____, ____, P, T, X

C, ____, ____, O, ____, __

Complete each pattern.

U, 8, w, 0, U, 8, w, 0, U, 8, w, 0, ____, 8, w

2, 9, 2, 9, 2, ____, ____, 9, 2, 9, 2, 9, 2, 9

Name: _____

Let's Chop Numbers!**Matching**

$$11+2=$$

$$10+8=$$

$$80+11=$$



$$10+2=$$

$$10+8=$$

$$20+1=$$



$$12+6=$$

$$60+10=$$

$$10+6=$$



$$10+1=$$

$$10+10=$$

$$10+8=$$



$$10+7=$$

$$20+1=$$

$$10+1=$$

Shade 10 trees.

$$15-10=$$




Shade 5 trees.


$$15-5=$$



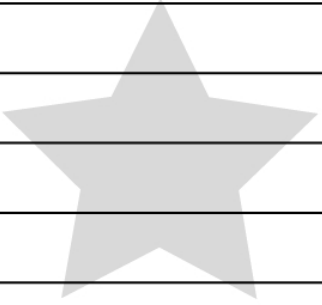
Name: _____



A mysterious masked man comes to your door. He asks you to be a superhero and says he can give you a special power. What power do you pick? Why do you pick that power?



Draw a picture of yourself using your new power!



Name: _____

Complete each pattern, using the same rule. Write what the rule is.

7, 9, 11, 13, _____, 17, 19, 21, 23, 25

9, 11, 13, 15, _____, _____, 21, 23, 25, _____

_____, _____, 19, 21, _____, _____, 27, 29

Complete each pattern, using the same rule. Write what the rule is.

6, 8, 10, 12, _____, _____

12, 14, _____, _____, 20, _____, 24

10, 12, 14, _____, _____, 20, _____

Name: _____

Lists to Sentences

Jot down the things requested. Then structure sentences that include them.



Two games you'd play _____

Sentence: _____

Three treats you'd serve _____

Sentence: _____

Four items you'd like as gifts _____







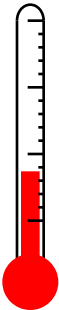
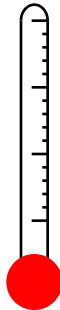







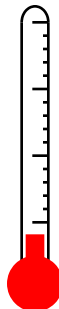

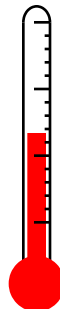

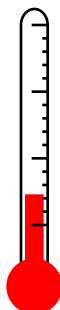




Sentence: _____

Five people you'd invite _____

Sentence: _____

Name: _____

Circle the thermometer that shows a warmer temperature.

| | | |
|-------------------------------------------------------------------------------------------------------------------------------------------------------------------------|-------------------------------------------------------------------------------------------------------------------------------------------------------------------------|-----------------------------------------------------------------------------------------------------------------------------------------------------------------------------|
|   |   |   |
|   |   |   |
|   |   |   |
|   |   |   |

Name: _____

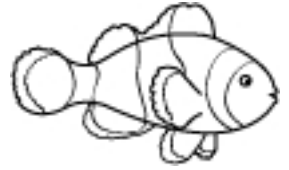
Solve the story using the clues. Fill in the chart using Y for yes or N for no.



dove



mosquito



clown fish



Tyler

| | dove | mosquito | clown fish |
|--------|-----------------|----------|------------|
| Tyler | N By clue 1. | | |
| Emily | | | |
| Lauren | | | |



Emily



Lauren

The Story

Three people each have a favorite animal. Can you figure out each person's favorite animal?

The Clues

1. A girl likes birds.
2. Lauren does not like insects or birds.

Name: _____

Write in the missing numbers.

$6 + \underline{\quad} = 12$


$8 - \underline{\quad} = 1$

$\underline{\quad} - 4 = 7$

$\underline{\quad} + 5 = 13$

$9 + 9 = \underline{\quad}$

$3 - 3 = \underline{\quad}$



A week from today is...

 Month - Day - Year


Draw the missing hands to show the times.

9:00



Circle the number that shows the...



8 in 38

10 in 16

90 in 92

5 in 45

30 in 39




4:30



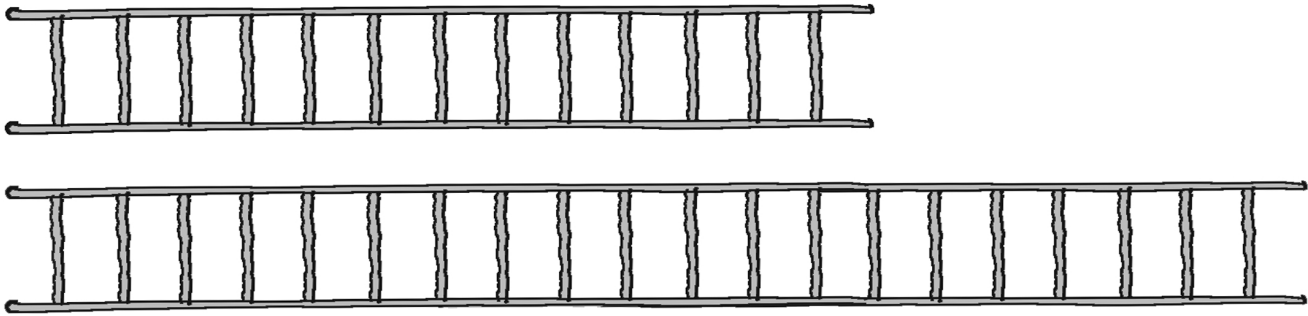
Name: _____

Example:


Circle the vine that is longer.



Circle the ladder that is shorter.

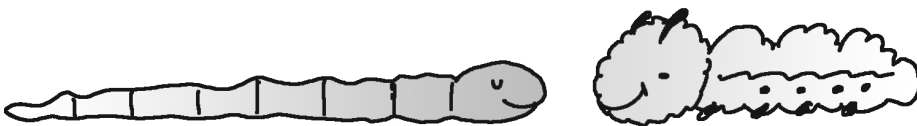


Circle the dinosaur that is taller.



Underline the longer one.


Put a check on the shorter one.




Subscribe to Get Answer Keys



and Weekly Math, Challenge Workbooks, Posters, Daily Reading, and so much more!



SUBSCRIBE TO RECEIVE EVEN MORE
Answer Keys • Effective Activities • Access
to as many printables as you need!



edHelper.com



It's NO PREP at edHelper.


More history!



edHelper.com!



New online math games!



New ideas!



\times $=$ $-$ \div $<$ $-$ $>$

More puzzles!



