

My Name: _____

Pick 9 to do:

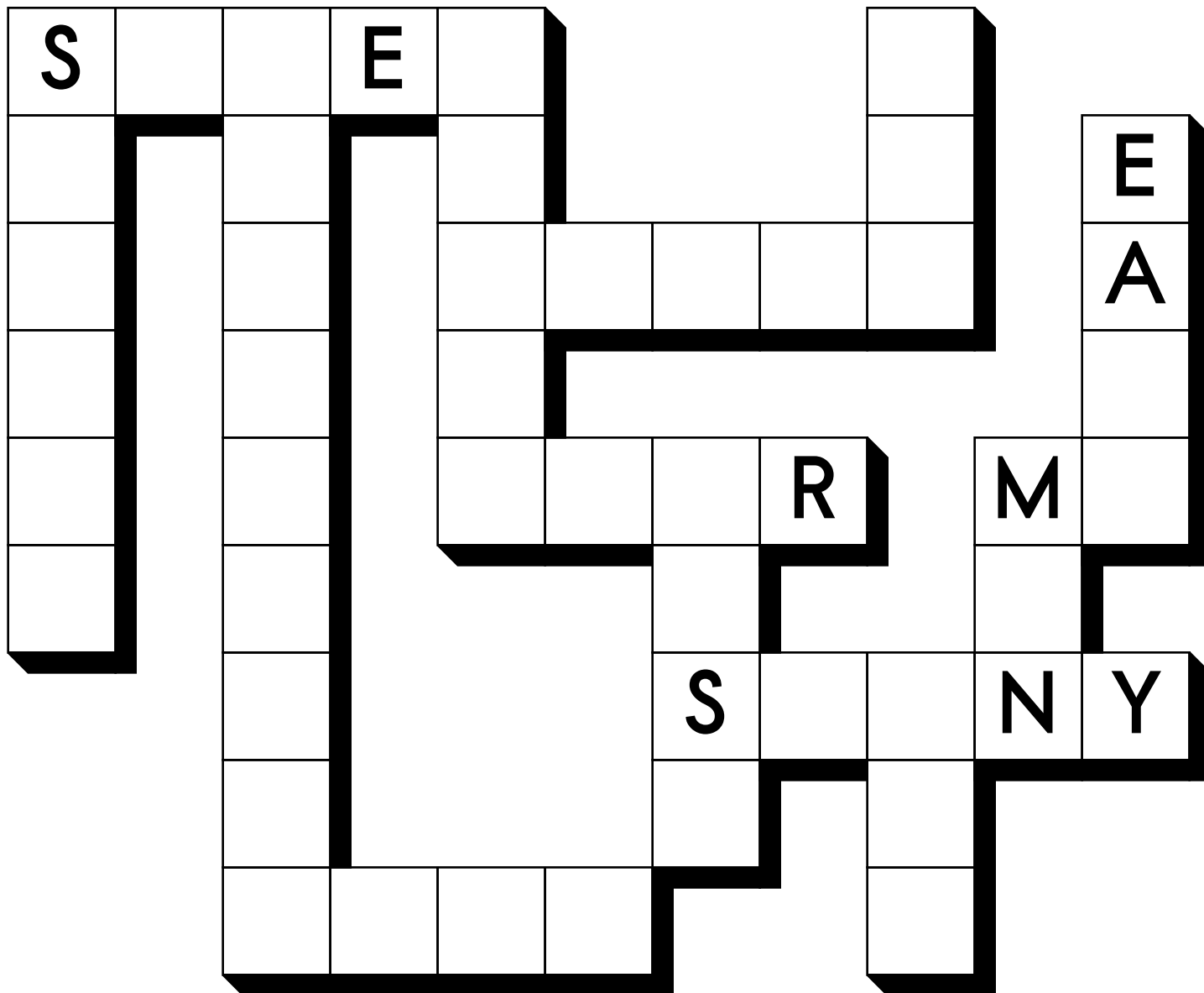
- ☐ page 1
- ☐ page 2
- ☐ page 3
- ☐ page 4
- ☐ page 5
- ☐ page 6
- ☐ page 7
- ☐ page 8
- ☐ page 9
- ☐ page 10
- ☐ page 11

Skip 2 Pages!



USE • SUNNY • NUT • SUPER • EASY • ALSO • MY • PEACE • MAN
REAR • DELICIOUS • SIDES • SEEM • SCREEN




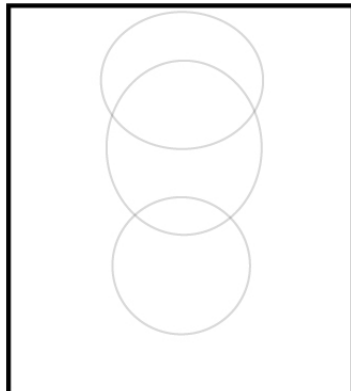
Write each word into the puzzle.



Name: _____

☐ I did page 2

edHelper



Draw it.
What can you add to your picture?

I added _____

Subtract 1 or 10.

97

	49
--	----

	40
--	----

67

	18
--	----

71

	98
--	----

32

82

	50
--	----

	55
--	----

$99 - 1 = \underline{\hspace{2cm}}$

When you take nine away from me, the answer is eight. What number am I?



Name: _____

☐ I did page 3

edHelper

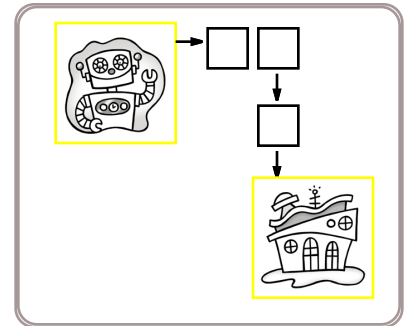
go_down (how many squares) The robot will go down this many squares.

go_right (how many squares) The robot will go right this many squares.

Secret map:

```
print robot()  
go right ( 2 )  
go down ( 1 )  
print robot home()
```

Draw the map:




Robot moved 3 squares.

Secret map:

```
print robot()  
go down ( 3 )  
go right ( 2 )  
go down ( 2 )  
print robot home()
```

Draw the map:



Robot moved ____ squares.

$54 \div 6 =$

$2 \times 2 =$ _____

How many pounds are in 144 ounces?

_____ pounds

Name: _____

☐ I did page 4

edHelper

Dr. Programmer typed:

```
print ("I am Justin.")
```

The computer replied:

I am Justin.



Dr. Programmer typed:

```
AGIRL="Rose"  
ABOY="Hunter"  
print ("I sit with ",AGIRL," and ",  
      ABOY," on the first table.")
```

The computer replied:



Dr. Programmer typed:

```
print ("Mary sits with  
      Lucas and Sara.")
```

The computer replied:

 t L


_____.

Name: _____

☐ I did page 5

knew • nio • new • teo • major • ~~to~~ • really • two • tuo

Ms. Darcy _____ it was time to _____ crackdown on her children. The family of five needed _____ to _____ start cleaning up after themselves. Ms. Darcy felt more like a maid than she did a mom. It was time to make some _____ changes at home.

100 less than 619	Circle each even number.	seventeen
	18 27 63 15 34 36	
	39 14 21 76 95	
	48 90 100 87 23 95	
	42 5 85 16 74	
	54 43 4 49 23 94	
		$\begin{array}{r} 54 \\ - 21 \\ \hline \end{array}$

Write the words into the boxes.		
reach • bottom • coach • lunch • short • flock • shadow • would today		
<div><div></div><div></div><div></div><div></div><div></div></div>	<div><div></div><div></div><div></div><div></div><div></div></div>	<div><div></div><div></div><div></div><div></div><div></div></div>
<div><div></div><div></div><div></div><div></div><div></div></div>	<div><div></div><div></div><div></div><div></div><div></div></div>	<div><div></div><div></div><div></div><div></div><div></div></div>
<div><div></div><div></div><div></div><div></div><div></div></div>	<div><div></div><div></div><div></div><div></div><div></div></div>	<div><div></div><div></div><div></div><div></div><div></div></div>
6 tens and 1 one ○ 61 ○ 1 ○ 610	11 + 13 = _____ ○ 22 ○ 7 ○ 24	Which number is odd? ○ 85 ○ 84

Name: _____

☐ I did page 6

edHelper

Write your starting time.

:

$9 - 3 = \boxed{}$

$17 - 8 = \boxed{}$

$4 + 7 = \boxed{}$

$7 + 8 = \boxed{}$

$2 + 4 = \boxed{}$

$9 - 4 = \boxed{}$

$6 + 7 = \boxed{}$

$8 - 7 = \boxed{}$

$10 - 9 = \boxed{}$

$14 - 9 = \boxed{}$

$7 + 2 = \boxed{}$

$6 + 3 = \boxed{}$

$8 + 7 = \boxed{}$

$2 - 1 = \boxed{}$

$5 + 3 = \boxed{}$

$3 - 1 = \boxed{}$

$3 + 3 = \boxed{}$

$6 - 4 = \boxed{}$

$18 - 9 = \boxed{}$

$12 - 9 = \boxed{}$

$2 + 8 = \boxed{}$

$5 + 6 = \boxed{}$

$8 + 6 = \boxed{}$

$11 - 7 = \boxed{}$

$11 - 6 = \boxed{}$

$9 - 8 = \boxed{}$

$4 + 6 = \boxed{}$

$7 - 1 = \boxed{}$

$5 + 8 = \boxed{}$

$6 + 1 = \boxed{}$

$13 - 7 = \boxed{}$

$9 + 2 = \boxed{}$

$2 + 1 = \boxed{}$

$10 - 8 = \boxed{}$

$3 + 6 = \boxed{}$

$12 - 8 = \boxed{}$

$8 + 9 = \boxed{}$

$5 + 4 = \boxed{}$

$1 + 6 = \boxed{}$

$15 - 9 = \boxed{}$

$10 - 6 = \boxed{}$

$16 - 7 = \boxed{}$

Write your ending time.

:

Make your own equations.

$\boxed{} - 5 = \boxed{}$

$\boxed{} - \boxed{} = \boxed{}$

$3 + \boxed{} = \boxed{}$

$\boxed{} + 3 = \boxed{}$

$8 - \boxed{} = \boxed{}$

$\boxed{} + 9 = \boxed{}$

$8 + \boxed{} = \boxed{}$

$\boxed{} + 3 = \boxed{}$

Name: _____

☐ I did page 7

edHelper

a l l t e e e h m m
c l e r q a l v l h
i m e l u m c l n u
l l a h s t h g i e
g g a h c a e u l l
t l h n e m l g l g
k t l g e r n i r m
s q r u t u l l e t

Sara picked 6 pink flowers.
Then she picked 8 blue
flowers. How many
flowers did she pick in all?

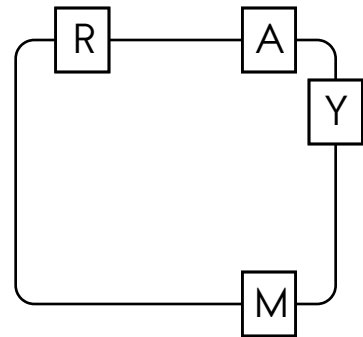
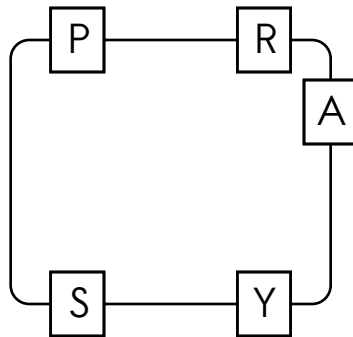
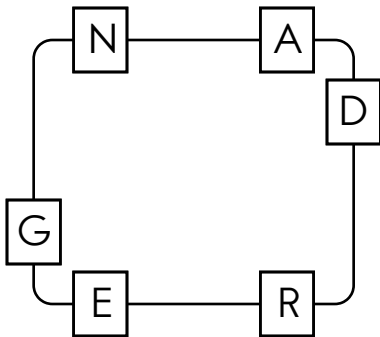
$$\begin{array}{r} 77 \\ - 14 \\ \hline \end{array}$$

David bought 4 ice cream
sodas. He gave 3 sodas to
his brother. How many
sodas are left?

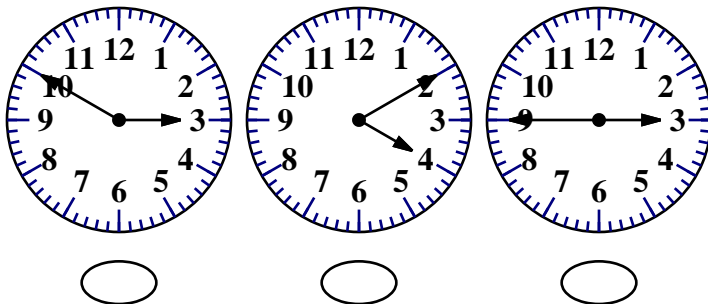
Look for these words **BACKWARDS**
in the word search:

shall men tell
mule each eight


Write the hidden word. Start at one letter and then move either left or right. Continue in same direction.



Which clock shows 10 minutes to 4?



Which clock shows 15 minutes to 2?



Name: _____

☐ I did page 8

edHelper

Finish each sentence using a word from the box.

are write were under

We _____ going home.

All my shirts _____ white.

I want to walk _____ the brown bridge.

Always _____ your name on your paper.

$$\begin{array}{r} 77 \\ - 14 \\ \hline \end{array}$$

$$\begin{array}{r} 2 \\ 5 \\ + 1 \\ \hline \end{array}$$



Complete each analogy with the best word.

fifth month monkey extra

scarcity is to not enough as

surplus is to _____

nut is to squirrel as

banana is to _____

September is to ninth month as

May is to _____

Circle the words that are spelled correctly.

burthday

hungrier

befor

February

fifteenth

basket

$$36 + 3 = \underline{\hspace{2cm}}$$

$$24 + 5 = \underline{\hspace{2cm}}$$

Use these numbers to fill in the blanks.

29 24 23 21 25

The smallest number is _____.

The largest number is _____.

5 more than 16 is _____.

_____ is less than 24 but more than 21.

Make 18

$$\underline{\hspace{2cm}} + \underline{\hspace{2cm}} =$$

$$\underline{\hspace{2cm}} + \underline{\hspace{2cm}} =$$

$$\underline{\hspace{2cm}} + \underline{\hspace{2cm}} =$$

$$\underline{\hspace{2cm}} + \underline{\hspace{2cm}} =$$



$$\begin{array}{r} 30 \\ + 15 \\ \hline \end{array}$$

Combine the words to make a compound word.

tooth + pick = _____

out + do = _____

$$\begin{array}{r} 94 \\ - 52 \\ \hline \end{array}$$

$$900 + 90 + 1$$

Name: _____

☐ I did page 9

edHelper

Write how much to add or subtract.

8 $\bigcirc + 2$ 10 $\bigcirc + 2$ 12

Start with 8.

Add 2. Repeat.

14 \bigcirc 10 \bigcirc 6

Start with ____.

Subtract _____. Repeat.

16 \bigcirc 10 \bigcirc 4

Start with ____.

Subtract _____. Repeat.

5 \bigcirc 10 \bigcirc 15

Start with ____.

Add _____. Repeat.

8 \bigcirc 5 \bigcirc 2

Start with ____.

Subtract _____. Repeat.

3 \bigcirc 6 \bigcirc 9

Start with ____.

Add _____. Repeat.

13 \bigcirc 11 \bigcirc 9

Start with ____.

Subtract _____. Repeat.

1 \bigcirc 7 \bigcirc 13

Start with ____.

Add _____. Repeat.

7 \bigcirc 11 \bigcirc 15

Start with ____.

Add _____. Repeat.

Circle two numbers in each group to make 12.

7 6 5 9

2 1 9 3

12 1 2 10

Cross out the word that does not fit in the group as much as the others.

padding hat
mole body hair
accent clothes

Draw 12 tally marks.

3
2
+ 2

100 less
than 847

72 - 2 = _____

88
+ 11

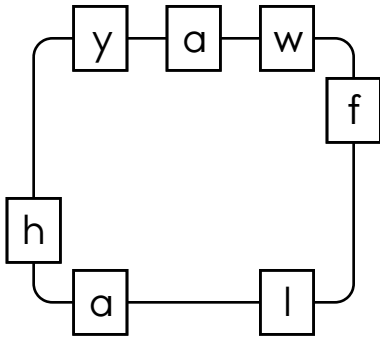


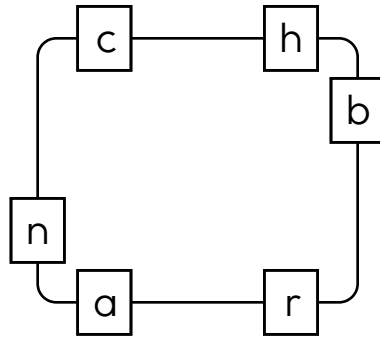
Name: _____

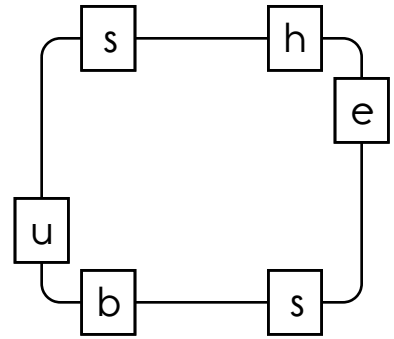
☐ I did page 10

edHelper

Write the hidden word. Start at one letter and then move either left or right. Continue in same direction.







Circle the words.

pilesupervisorthirstdodgesupergasblewslantscience
untilslantdroppeddodgestateblewthirstsloganuseless
statetakeslightglovegasdidn'tpilesiencebeetsscience

Try to spell some words.

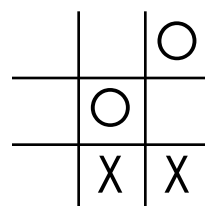
ing • rn • ea • nc • bou • us • bu • ~~ge~~ • ~~ed~~ • ss
ele • sy • why

edge _____

- ☐ clean
- ☐ clen
- ☐ klen
- ☐ claen

A pink bear costs \$6. A brown and white bear costs \$9. How much more does the brown and white bear cost than the pink bear?

It is your turn. Write X to make your move.



Name: _____

☐ I did page 11

edHelper

Use each word ONCE. Cross off each word after it is used.

something • eastern • ascent • brook • receiving • beats • pear
easy • bleach • useless • heave • problem • carrying • emperor
sides • transparent • swimming • robin • transport • agreeing
peace • bouncing • deciding • state • peak • breathless • least
unless • transportation • erosion • heart • leased

These words have "ing" in them.

_____ i n g

_____ i n g

These words have "less" in them.

_____ l e s s

These words have "trans" in them.

t r a n s _____

These words have "ea" in them.

_____ e a _____

e a _____

These words have "ro" in them.

r o _____

_____ r o _____

Fit the rest of the words into these shapes.

				s
--	--	--	--	---

		c			t
--	--	---	--	--	---

--	--	--	--	--