

Name: _____

Jack bought a book about Pearl Harbor. The book cost \$9.80 with tax. He gave the clerk a \$10 bill. How much change did he get?

Emily is having a bad day. Her best friend moved to another city. Now it will take Emily 2 hours and 18 minutes to get to her friend's house. How many minutes will it take to get to her friend's house?

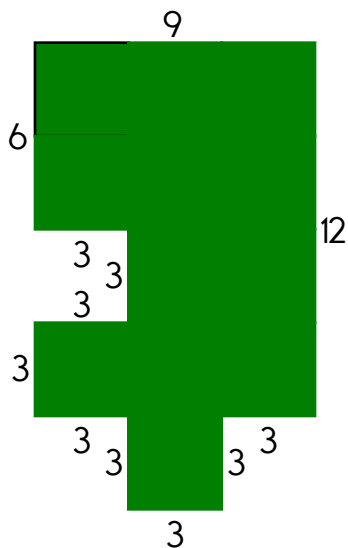
Porric's mother made fish fries for lunch. She made fish ice cream for dessert. It takes 4 small fish to make 1 1/2 cup of ice cream. How many fish does it take to make 6 cups of ice cream?

Sally counted 92 votes. There were 36 votes for Fred and 14 votes for Mark. The rest were for Debbie. How many votes were for Debbie?

How many pints are equal to 9 gallons?

Which is larger, 0.8 or 0.9?

$$\begin{array}{r} 85 \\ + 59 \\ \hline \end{array}$$



The perimeter is _____.


Circle the smallest number.

377 398 358
494 439 538

How many days are in October?

Can you think of a 5-letter word that has the vowel O in it?

$$6 \overline{)18}$$



Name: _____

$\begin{array}{r} 63 \\ - 56 \\ \hline \end{array}$	$\begin{array}{r} 60 \\ - 50 \\ \hline \end{array}$	$\begin{array}{r} 83 \\ - 73 \\ \hline \end{array}$	$\begin{array}{r} 74 \\ - 17 \\ \hline \end{array}$	$\begin{array}{r} 75 \\ - 45 \\ \hline \end{array}$
---	---	---	---	---


<p>Write the correct symbol.</p> <p>< = ></p> <p>515 ○ 515</p>	<p>If you take 36 away from me, the difference is 81. What number am I?</p> <p>_____</p>	$\begin{array}{r} 64 \\ - 27 \\ \hline \end{array}$
---	--	---

<p>What are the first three multiples of 6?</p> <p>_____</p>	<p>Round each number to the place value of the BIG number.</p> <p>89,834</p> <p>_____</p>
--	--



<p>Which is larger, $\frac{3}{4}$ or $\frac{4}{6}$?</p> <p>_____</p>	<p>Calculate the product of 10 and 4.</p> <p>_____</p>	$5 \overline{)40}$
---	--	--------------------

<p>Write the number with 2 thousands and 3 hundreds.</p> <p>_____</p>	<div style="display: flex; justify-content: space-around; align-items: center;"> <div style="text-align: center;"> current time (pm) </div> <div style="text-align: center;"> time party starts (pm) </div> </div> <p>How long until the party? _____</p>
---	---



<p><input type="radio"/> hehr</p> <p><input type="radio"/> hre</p> <p><input type="radio"/> hare</p> <p><input type="radio"/> hari</p>	$\begin{array}{r} 11 \\ \times 1 \\ \hline \end{array}$	$\begin{array}{r} 3 \\ \times 11 \\ \hline \end{array}$	<p>Which is longer: two feet or thirty inches?</p> <p>_____</p>
--	---	---	---



Name: _____

edHelper

$$\begin{array}{r} 9,471 \\ + 9,528 \\ \hline \end{array}$$

$$\begin{array}{r} 7,574 \\ - 3,508 \\ \hline \end{array}$$

$$\begin{array}{r} 3,281 \\ + 2,038 \\ \hline \end{array}$$

$$\begin{array}{r} 7,931 \\ - 6,913 \\ \hline \end{array}$$

$$\begin{array}{r} 1,974 \\ + 9,091 \\ \hline \end{array}$$

$$\begin{array}{r} 5,188 \\ - 3,052 \\ \hline \end{array}$$

$$\begin{array}{r} 7,158 \\ + 3,649 \\ \hline \end{array}$$

$$\begin{array}{r} 10,512 \\ - 9,013 \\ \hline \end{array}$$

$$\begin{array}{r} 8,555 \\ + 5,016 \\ \hline \end{array}$$

$$\begin{array}{r} 4,081 \\ + 9,474 \\ \hline \end{array}$$

$$\begin{array}{r} 8,997 \\ - 1,160 \\ \hline \end{array}$$

$$\begin{array}{r} 13,551 \\ - 6,927 \\ \hline \end{array}$$

$$\begin{array}{r} 9,049 \\ + 3,529 \\ \hline \end{array}$$

$$\begin{array}{r} 15,400 \\ - 7,136 \\ \hline \end{array}$$

$$\begin{array}{r} 2,355 \\ + 2,795 \\ \hline \end{array}$$

$$\begin{array}{r} 13,906 \\ - 4,714 \\ \hline \end{array}$$

$$\begin{array}{r} 11,744 \\ - 3,841 \\ \hline \end{array}$$

$$\begin{array}{r} 4,146 \\ + 3,969 \\ \hline \end{array}$$

$$\begin{array}{r} 9,748 \\ - 1,006 \\ \hline \end{array}$$

$$\begin{array}{r} 9,596 \\ - 3,595 \\ \hline \end{array}$$

$$\begin{array}{r} 8,417 \\ + 7,359 \\ \hline \end{array}$$

$$\begin{array}{r} 1,731 \\ + 3,905 \\ \hline \end{array}$$

$$\begin{array}{r} 6,339 \\ + 4,173 \\ \hline \end{array}$$

$$\begin{array}{r} 17,320 \\ - 9,113 \\ \hline \end{array}$$

$$\begin{array}{r} 15,936 \\ - 6,160 \\ \hline \end{array}$$

$$\begin{array}{r} 10,860 \\ - 1,099 \\ \hline \end{array}$$

$$\begin{array}{r} 4,542 \\ + 9,907 \\ \hline \end{array}$$

$$\begin{array}{r} 8,657 \\ - 4,969 \\ \hline \end{array}$$

$$\begin{array}{r} 9 \\ + 2 \\ \hline \square \end{array}$$

$$\begin{array}{r} + 4 \\ \hline \square \\ + 3 \\ \hline \end{array}$$

$$\begin{array}{r} 18 \\ + \square \\ \hline \end{array}$$

$$\begin{array}{r} 22 \\ + \square \\ \hline \end{array}$$

$$\begin{array}{r} 26 \\ - 8 \\ \hline \square \end{array}$$

$$\begin{array}{r} + 9 \\ \hline 27 \\ + \square \\ \hline \end{array}$$

$$\begin{array}{r} 32 \\ - \square \\ \hline \end{array}$$

$$\begin{array}{r} 28 \\ + \square \\ \hline 31 \\ - \square \\ \hline \end{array}$$

$$23$$

Name: _____

2 • = • 0 • 3 • 0 • 6 • 8 • 4 • 9 • 8 • + • = • 5 • = • 9 • =
5 • 1 • 7 • 8

1

5

1 - 9 = 3 + 9

-

8

0 + 6 + 0

6

2

=

1

5 +

= 5

1

3

2 + 4 =

-

= 6 - 2

0

5

8

9

4

+ 6 =

- 2 = 6 - 3

<p>If $\square = 12$, then $20 - \square =$ _____</p> <p>Write two odd numbers that when added together equal the even number 32.</p> <p>_____</p>	<p>Is 35 prime or composite?</p> <p>_____</p> <p>Write the number for seven hundred twenty thousand, eight hundred sixty-one.</p> <p>_____</p>	<div>$9 \overline{)27}$</div> <div>$3 \overline{)24}$</div>
<p>What is the value of the BIG digit?</p> <p>79,429,001</p> <p>_____</p>	<div>$\begin{array}{r} 42 \\ + 35 \\ \hline \end{array}$</div>	<p>Which number is greater: 0.3 or 0.29?</p> <p>_____</p>

Name: _____

24 is a multiple of 3 and 8.

84 is a multiple of _____ and _____.

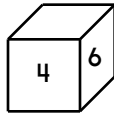
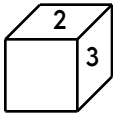
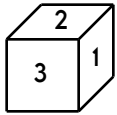
9 is a multiple of _____ and _____.

24 is a multiple of _____ and _____.

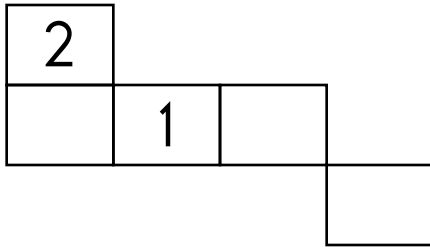
32 is a multiple of _____ and _____.

55 is a multiple of _____ and _____.

This is the look at one cube that is turned around a few times.



This pattern can be folded into the cube. Fill in the missing boxes.



Fill in the missing fractions.

$\frac{3}{9}$, _____ , _____ , $\frac{6}{9}$

If there are three yellow marbles and five blue marbles in a box, what is the probability that you will pick out a blue one with your eyes shut?

☐ paer

☐ paerr

☐ pihr

☐ pear



Write how many should go into each box.

Put 120 toys into 10 boxes. 12 toys per box

Put 108 toys into 12 boxes. _____

Put 10 toys into 5 boxes. _____

Put 56 toys into 8 boxes. _____

Put 16 toys into 4 boxes. _____

Put 84 toys into 7 boxes. _____

What is 100 equal to?

What is the ratio of boys to girls in your class?

Write a word problem for $4 \times 5 = 20$.



Name: _____

Fill in each box of the edHelperKu puzzle using the numbers from 1 to 4.

Every row must contain the numbers 1, 2, 3, and 4.

Every column must contain the numbers 1, 2, 3, and 4.

In a cage with a plus sign, the given number will be the sum of all the digits in the cage.

3	9+ 4	1234	3+ 2
6+ 2	1234	1234	1234
1234	9+ 2	1234	1234
4	6+ 1234	1234	3

Fill in the blanks. These equations are from the puzzle above.

$$2 + \underline{\quad} = 3$$

$$4 + \underline{\quad} + \underline{\quad} = 9$$

$$2 + \underline{\quad} + \underline{\quad} = 6$$

$$\underline{\quad} + \underline{\quad} + 3 = 6$$

$$2 + \underline{\quad} + \underline{\quad} = 9$$