

Name: _____

Copy each letter to the right of the letter.

m m m m

Think of a word that starts with the letter m. Write the word in cursive two times.

Word clues: Search through the words to help with the missing letters in the next section!

roomshammesslump

smellbottommiddlehim

farmermuledampswim

Now fill in the missing letters.

swi

iddle

fa m

hi

l p

h e

m l

ro

s l

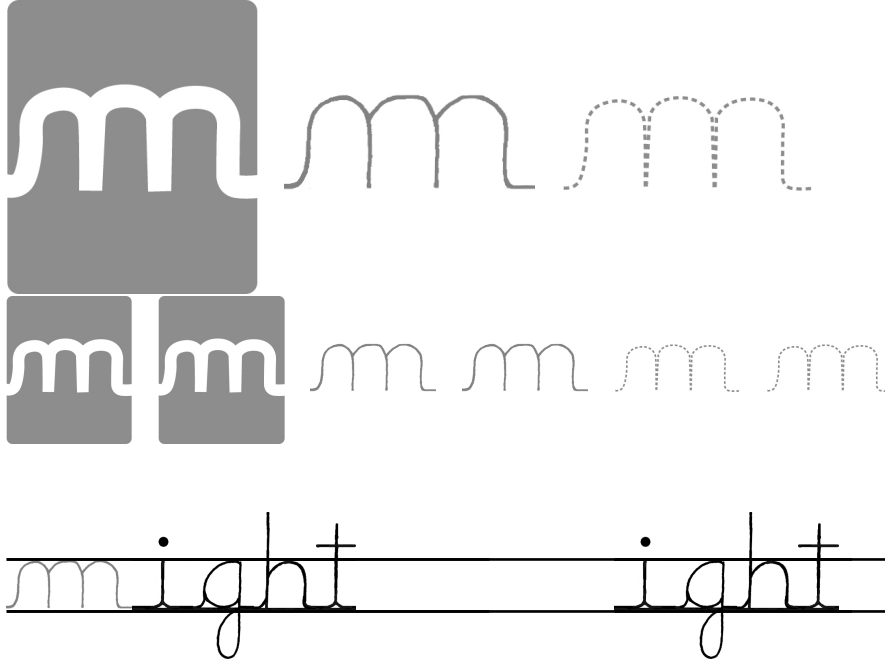
o t

Name: _____

Write the correct symbol.

< = >

7,314 ○ 7,324



Is 9194 closer to 9150 or 9250?

$$\begin{array}{r} 9194 \\ - 9150 \\ \hline \end{array} \quad \begin{array}{r} 9250 \\ - 9194 \\ \hline \end{array}$$

9194 is _____ away from 9150.

9194 is _____ away from 9250.

9194 is closest to _____.

Is 360 closer to 300 or 400?

$$\begin{array}{r} 360 \\ - 300 \\ \hline \end{array} \quad \begin{array}{r} 400 \\ - 360 \\ \hline \end{array}$$

360 is _____ away from 300.

360 is _____ away from 400.

360 is closest to _____.

$8 \times 7 = 56$

$56 \div 8 = 7$

$2 \times 11 = 22$

$22 \div \underline{\quad} = \underline{\quad}$

$7 \times 12 = 84$

$84 \div \underline{\quad} = \underline{\quad}$

$12 \times 10 = 120$

$120 \div 12 = \underline{\quad}$

$10 \times 11 = 110$

$\underline{\quad} \div 10 = \underline{\quad}$

$6 \times 8 = 48$

$\underline{\quad} \div 6 = \underline{\quad}$

Name: _____

merits

merits

erits

match

match

atch

tremors

tremors

remors

reform

reform

eform

drammas

drammas

rammas

Name: _____

Copy each letter to the right of the letter.

m m m m m

Think of a word that starts with the letter n. Write the word in cursive two times.

Word clues: Search through the words to help with the missing letters in the next section!

minus skin might nest

lonely moon slam pine

pint new spider angle ran

Now fill in the missing letters.

ight

pi e

o m

ra

sl

m u

m

ki


st

p t

le

o ly

Name: _____

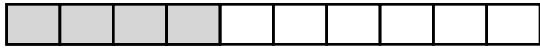


List the first three multiples of 12.

Round 926 to the nearest ten.

Amanda bought a joke book. It cost \$11.19. She gave the clerk one \$10 bill and two \$1 bills. How much change did she get?

Write the unshaded part as a decimal.



Insert a comma in the appropriate place in this sentence.

I think that English is my favorite class but it might be math.

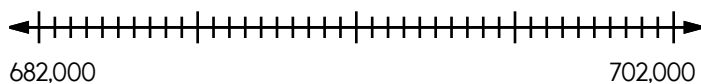
Write a word problem for
 $4 \times 4 = 16$.

What place value does the 7 have in 87,913?

Do you use A.M. or P.M. to write 7:00 in the evening?

$$4 \overline{)20}$$


Locate where to put the number 687,000 and label the point M.



Add the correct end punctuation for this sentence.

I am named after my grandfather

The month before me has thirty days. The month after me has thirty days. What month am I?

May
December
August
February

Name: _____

merits

merits

erits

match

match

atch

tremors

tremors

remors

reform


reform

eform

drammas

drammas

rammas




It's NO PREP
at edHelper.




edHelper.com!

**only \$19.99
per year**

More
history!



More
puzzles!



More
science!



New
ideas!



Things for the
classroom!

