


Name: \_\_\_\_\_

Copy each letter to the right of the letter.

a a a a a a a

 a a a a a a

Write "A ran after a." in cursive.

\_\_\_\_\_

Aeeaa is NOT a word. Who cares! Write Aeeaa in cursive!

\_\_\_\_\_

Word clues: Search through the words to help with the missing letters in the next section!

saddle carriage diamond art

drag awake fast match each

Now fill in the missing letters.

dr \_ g

\_ e \_ ch

\_ c \_ r \_

\_ \_ rt

\_ \_ \_ d

\_ \_ w \_ k

\_ \_ f \_ s

\_ \_ d \_ \_ m \_ \_ ma \_

Name: \_\_\_\_\_

a a a

a a a a a a

amy my

Megan has a \$10 bill, 5 quarters, and 4 dimes. She paid \$4.99 for her breakfast. How much money does she have left?

$$\begin{array}{r} 26 \\ - 12 \\ \hline \end{array}$$



Look at these awful spellings. Someone cannot spell! Write the correct spelling for each misspelled word. Watch out. You will sometimes see a word with the correct spelling.

stimp      stuhm      stemp      stup      \_\_\_\_\_

skap      scra      scrapp      scrap      \_\_\_\_\_

resul      result      rsult      rihzuhl      \_\_\_\_\_

swaetor      swihtur      swehur      swaeter      \_\_\_\_\_

satoin      statin      statoin      staton      \_\_\_\_\_

dear      dea      dihr      daar      \_\_\_\_\_

Write true or false.

4,371 < 4,361 \_\_\_\_\_      6,068 > 6,806 \_\_\_\_\_

2,181 > 1,256 \_\_\_\_\_      7,508 < 7,408 \_\_\_\_\_

551 < 951 \_\_\_\_\_      846 > 876 \_\_\_\_\_

List the first five multiples of 11.

\_\_\_\_\_

Name: \_\_\_\_\_

addition

addition

ddition

arrows

arrows

rrows

sideways

sideways

ideways

activity

activity

ctivity

idea

idea

dea

Name: \_\_\_\_\_

Copy each letter to the right of the letter.

b b b b b b b



B B B B B B

Write "B ran after b." in cursive.

\_\_\_\_\_

Think of a word that starts with the letter b. Write the word in cursive two times.

\_\_\_\_\_

Word clues: Search through the words to help with the missing letters in the next section!

blimp brush belt brought

bread back bedroom ball bag

Now fill in the missing letters.

\_\_e\_\_m\_\_t\_\_

\_\_e\_\_droom

\_\_u\_\_sh\_\_l\_\_


\_\_r\_\_ug\_\_t\_\_

\_\_i\_\_m\_\_

\_\_b\_\_c\_\_

\_\_e\_\_g\_\_

Name: \_\_\_\_\_



What is the range of these numbers?

20, 23, 27, 20, 21, 15, 23

There are five cars parked in a row exactly the same distance from each other. The first car is 28 inches from the second car. The first car is 56 inches from the third car. How far is the second car from the fifth car?

### What Words? Your Words!

Fill in the boxes with letters to make words. Each box is worth points. Earn points by filling in as many boxes as you can. Sum up the points you earn for each word.

Make a Word

Sum

1	2	4	8	14
A	L	I	K	E

7

1	2	6	10	16	22
L	I				

1	2	4	6
		T	

Make a Word

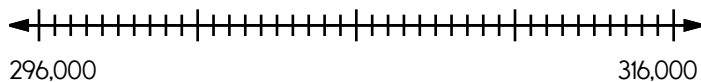
Sum

1	2	4	6	8	14	20
			O			

1	2	6	10	16	22
B	E				

1	2	6	12	18
S	C	A		

Locate where to put the number 314,000 and label the point K.



How many seconds are in one minute?

\_\_\_\_\_

Write a sentence that uses the words acts and ax.



Name: \_\_\_\_\_

addition

addition

ddition

arrows

arrows

rrows

sideways

sideways

ideways

activity

activity

ctivity

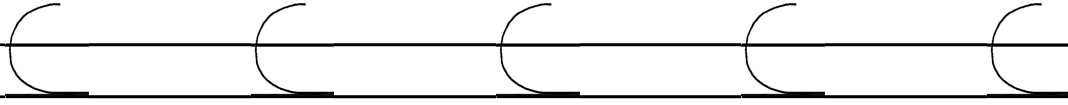
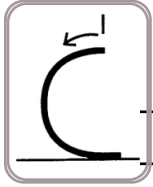

idea

idea


dea

Name: \_\_\_\_\_


Copy each letter to the right of the letter.



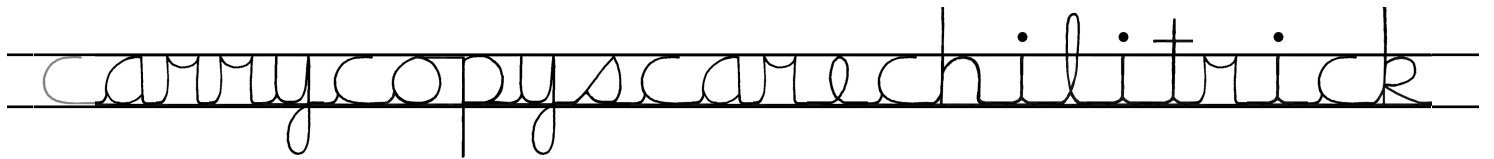
Cuucc is NOT a word. Who cares! Write Cuucc in cursive!



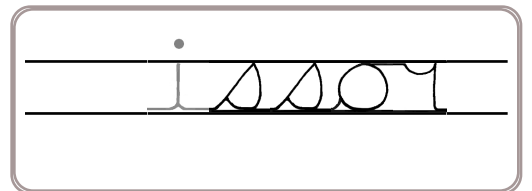
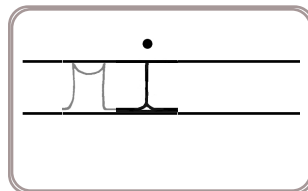
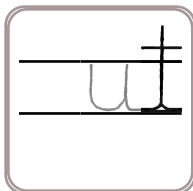
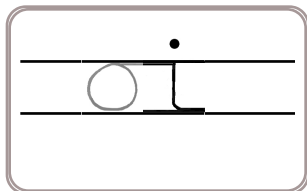
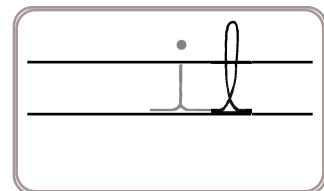
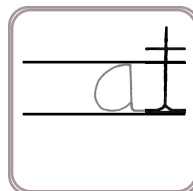
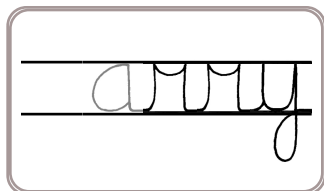
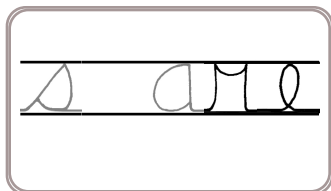
Write "C ran after c." in cursive.




Word clues: Search through the words to help with the missing letters in the next section!



Now fill in the missing letters.

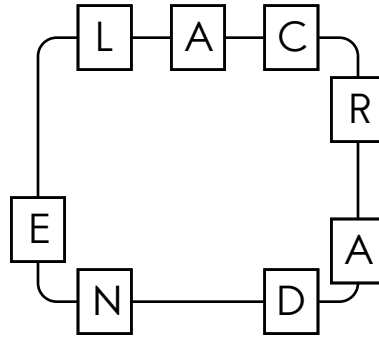


Name: \_\_\_\_\_

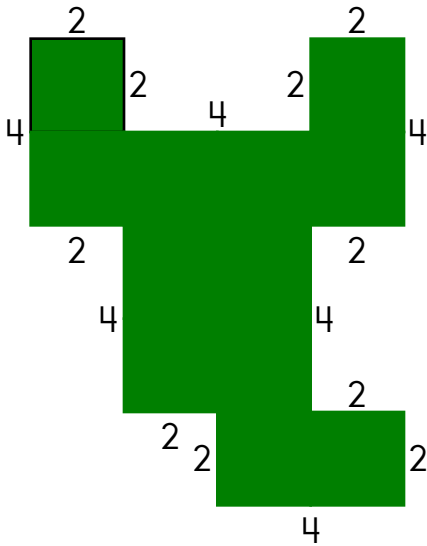


*cara and*

Write the hidden word. Start at one letter and then move either left or right.



\_\_\_\_\_



The perimeter is \_\_\_\_\_.

Fill in the boxes so each line equals 10.

10

$$\boxed{\phantom{00}} - \boxed{2}$$

$$\boxed{\phantom{00}} \div \boxed{4}$$

$$\boxed{2} \times \boxed{\phantom{00}}$$

$$(\boxed{4} + \boxed{\phantom{00}}) - \boxed{\phantom{00}}$$

If  $\square = 6$ , then  $\square - 4 =$  \_\_\_\_\_

$$55 + 6 = \underline{\hspace{2cm}}$$

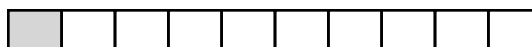
$$\begin{array}{r} 69 \\ - 67 \\ \hline \end{array}$$



Rewrite the adjective as an adverb.  
messy

\_\_\_\_\_

Write the unshaded part as a decimal.



\_\_\_\_\_

Name: \_\_\_\_\_

addition

addition

ddition

arrows

arrows

rrows

sideways

sideways

ideways

activity

activity

ctivity

idea

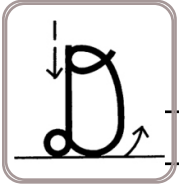
idea

dea

Name: \_\_\_\_\_

Copy each letter to the right of the letter.

d d d d d d d



D

D

D

D

Write "D ran after d." in cursive.

\_\_\_\_\_

Think of a word that starts with the letter d. Write the word in cursive two times.

\_\_\_\_\_

Word clues: Search through the words to help with the missing letters in the next section!

undersaddlebredholiday

adddownnmadhidedi dead

Now fill in the missing letters.

ie

hi e

be

a d e

wn

m e

ol ay


Name: \_\_\_\_\_

d d d

d d d d d

dish ish

Fill in the missing fraction.

 $\frac{1}{6}$  ,  $\frac{2}{6}$  , \_\_\_\_\_ ,  $\frac{4}{6}$ What is the value  
of the BIG digit?7,92**9**,908  
\_\_\_\_\_

$$\begin{array}{r} 11 \\ + 68 \\ \hline \end{array}$$

Calculate the product of 5  
and 10.  
\_\_\_\_\_

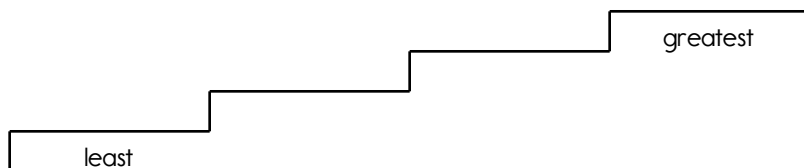
472

467

486

470

Write the numbers in order from least to greatest.

Write the number for  
nine thousand six  
hundred eight.  
\_\_\_\_\_Would you use a ruler or a  
yardstick to measure the  
length of your room?  
\_\_\_\_\_Can you think of a five-letter word  
that has the vowel O in it?  
\_\_\_\_\_☐ trohn☐ thrown☐ thown☐ trownWrite a question you could ask a mad scientist.  
\_\_\_\_\_  
\_\_\_\_\_

Name: \_\_\_\_\_

addition

addition

ddition

arrows

arrows

rrows

sideways

sideways

ideways

activity

activity

ctivity

idea

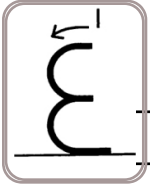
idea

dea

Name: \_\_\_\_\_

Copy each letter to the right of the letter.

*e e e e e e e*



*e e e e e*

Think of a word that starts with the letter e. Write the word in cursive two times.

\_\_\_\_\_

\_\_\_\_\_

Eoooo is NOT a word. Who cares! Write Eoooo in cursive!

\_\_\_\_\_

\_\_\_\_\_

Word clues: Search through the words to help with the missing letters in the next section!

*de p t w e l v e l o v e s p a c e g l u e*

*h o m e y e t b l u e c a p e y e s s u e*

Now fill in the missing letters.

*d \_ e p*

*c a p*

*y e t*

*l o*

*l e*

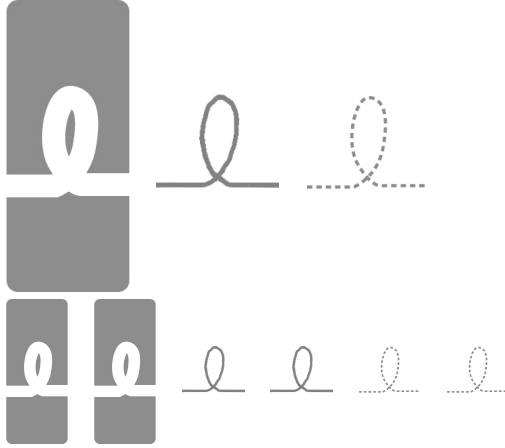
*s u*

*o m*

*e s*

*b u*

Name: \_\_\_\_\_



each      ach

Dave went to see Old Man Faux. He was a name changer. New names cost three quarters for each letter. Dave wanted his new name to be Phillips. How much did his new name cost?

If you add 8 to me, the sum is 88. What number am I?

\_\_\_\_\_

What is a good estimate for 398 times 11?

\_\_\_\_\_

$$\begin{array}{r} 21 \\ 22 \\ + 56 \\ \hline \end{array}$$

How many feet are in three yards?

\_\_\_\_\_

Round the number to the place value of the BIG number.

6,749,888

\_\_\_\_\_

Add one hundred to 616.

\_\_\_\_\_

How many 3s are in 27?

\_\_\_\_\_

$$\begin{array}{r} 6 \\ \times 4 \\ \hline \end{array}$$

How many days are in May?

\_\_\_\_\_

☐ esluep

☐ asleep

☐ aslep

☐ asleap

What temperature is four degrees below freezing in Celsius?

\_\_\_\_\_

Name: \_\_\_\_\_

addition

addition

ddition

arrows

arrows

rrows

sideways

sideways

ideways

activity

activity

ctivity



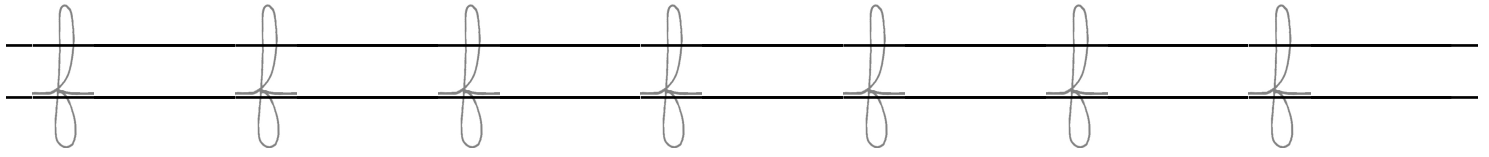
idea

idea


dea

Name: \_\_\_\_\_


Copy each letter to the right of the letter.



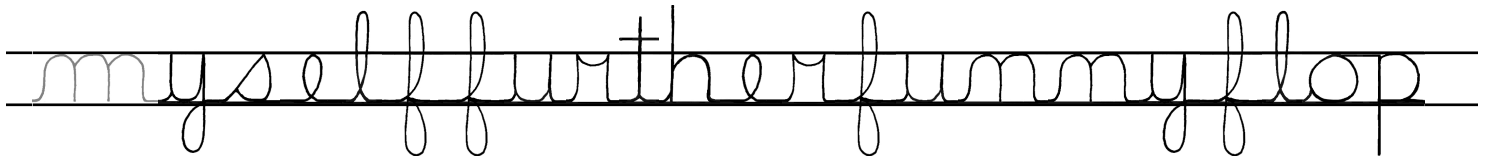
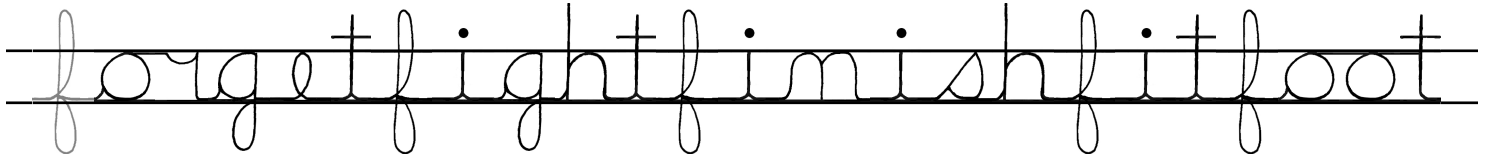
Fooff is NOT a word. Who cares! Write Fooff in cursive!



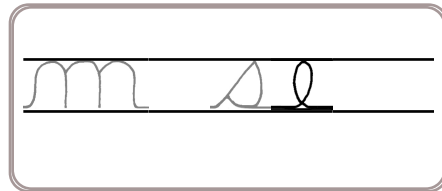
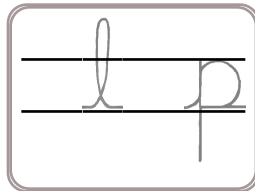
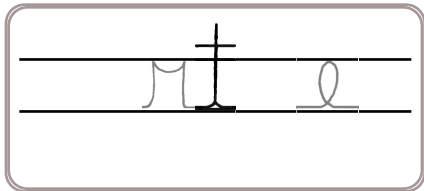
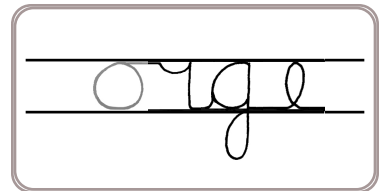
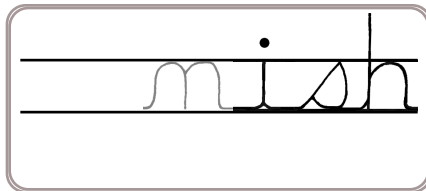
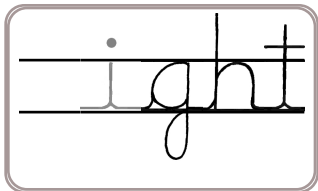
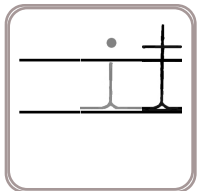
Write "F ran after f." in cursive.



Word clues: Search through the words to help with the missing letters in the next section!



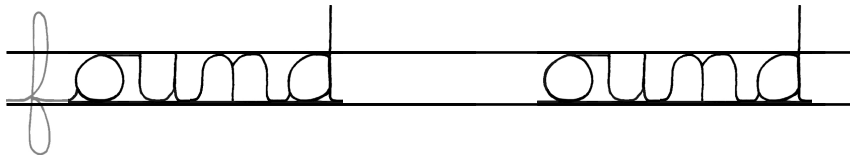
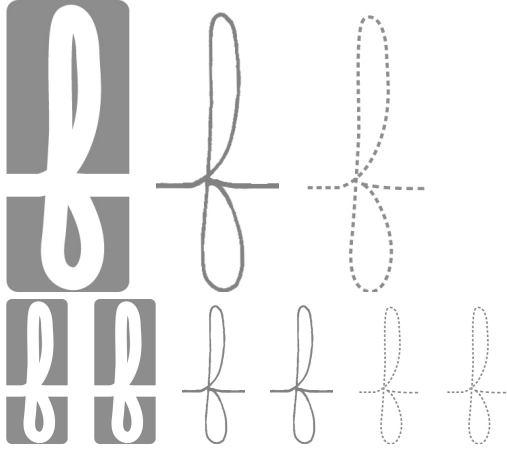
Now fill in the missing letters.



Name: \_\_\_\_\_

How many hours are in one day?  
\_\_\_\_\_

$$66 - 2 = \underline{\hspace{2cm}}$$

Color in  $\frac{3}{4}$  of the rectangle.Which is larger,  $\frac{3}{4}$  or  $\frac{1}{4}$ ?  
\_\_\_\_\_

$$\begin{array}{r} 31 \\ + 46 \\ \hline \end{array}$$

Share 8 equally among 2.  
\_\_\_\_\_What are 23 tens equal to?  
\_\_\_\_\_

$$5 \overline{)20}$$

Do parallel lines intersect?  
\_\_\_\_\_Calculate the sum of 10, 18, and 14.  
\_\_\_\_\_

$$\begin{array}{r} 49 \\ - 11 \\ \hline \end{array}$$

What is half of 22?  
\_\_\_\_\_What number is one thousand more than 3,010?  
\_\_\_\_\_

- ☐ hobby
- ☐ hobeia
- ☐ hoby
- ☐ hobb

Name: \_\_\_\_\_

addition

addition

ddition

arrows

arrows

rrows

sideways

sideways

ideways

activity


activity

ctivity


idea

idea

dea



It's NO PREP  
at edHelper.



**edHelper.com!**

**only \$19.99  
per year**

