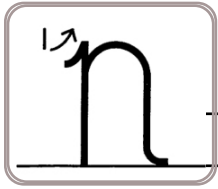


Name: _____

Copy each letter to the right of the letter.

m m m m m



n n n n n n

Noonn is NOT a word. Who cares! Write Noonn in cursive!

Write "N ran after n." in cursive.

Word clues: Search through the words to help with the missing letters in the next section!

frozen screen clean sound

sing fun count munch lam

Now fill in the missing letters.

clea

froze

cre


fu

fa

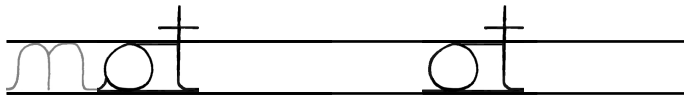
m h

u d

Name: _____



Emma went to the zoo to see the penguins. While she was there, she bought a T-shirt for \$16.52 and a drink for \$1.50. The ticket to the zoo cost \$4. How much did she spend in all?



Draw one line to find two words in each puzzle. The bold letters start each word. You can move left, right, up, or down. Write the two words that you find.

D Q U V F O M U
H U S X B T D E
Z I R U M F M K
O C E D D W V S
Z T A K A I N E
E T E R E U F H
I N I **V** S E M C
R H L V W S N U
P S L E U A H O
E G A B E E L P

D D N E Y N T O
Z L U V H I M I
B E A W B U U B
K A I Q P H E R
Q E N A I C E **D**
T U B E **F** I L L
R O F O R O R Z
E Q K B J I E U
G K I C A A U K
A R L V M H O G

F O L D E G T I
Y H R I C P F A
O P J O B H G F
R L D V F Y K N
T S M W O G J V
A Y I W E F N W
B A L O Q N V C
B D T S Y J I T
P N F G A L I E
V L J Z Z G A U

Write true or false.

6 is a factor of 30 true

7 is a factor of 17 _____

3 is a factor of 26 _____

8 is a factor of 16 _____

2 is a factor of 4 _____

5 is a factor of 22 _____



Name: _____

mimeteem

mimeteem

imeteem

mitches

mitches

itches

meither

meither

eitherr

spent

spent

pent


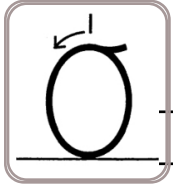
neighbor

neighbor


ighbor

Name: _____


Copy each letter to the right of the letter.



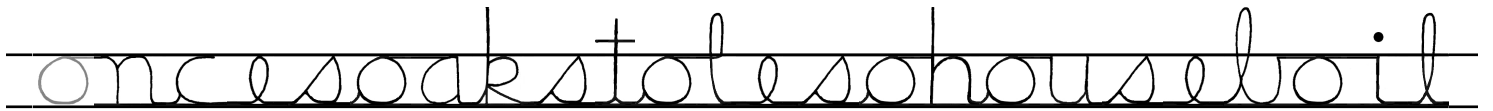
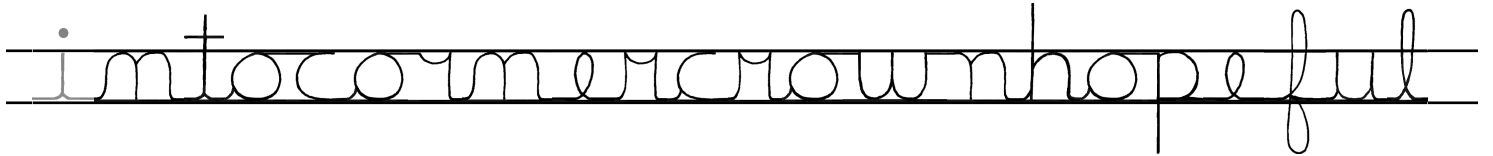
Oaao is NOT a word. Who cares! Write Oaao in cursive!



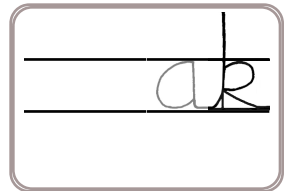
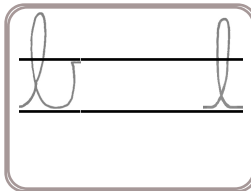
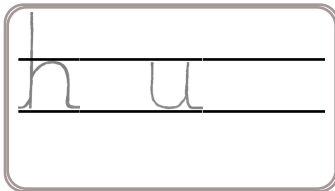

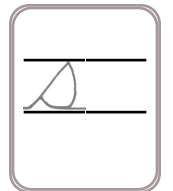
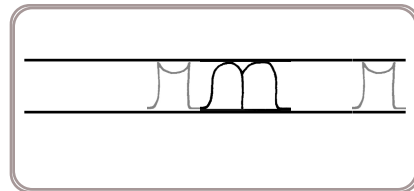
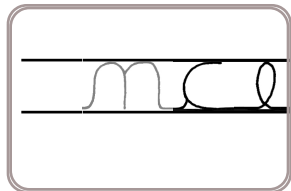
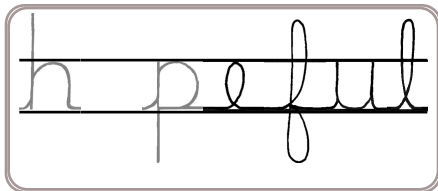
Write "O ran after o." in cursive.



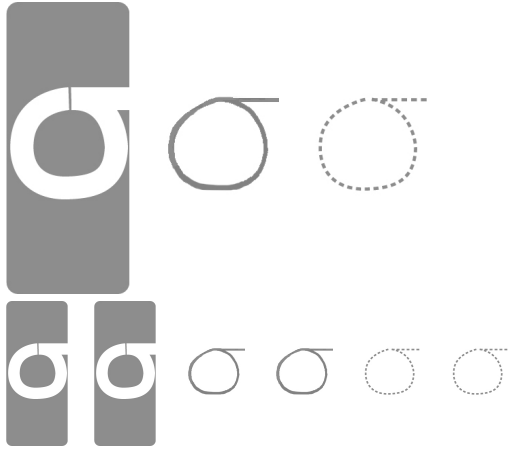
Word clues: Search through the words to help with the missing letters in the next section!



Now fill in the missing letters.



Name: _____



Write a prefix and a suffix to complete the root word.

_____act_____

Write an odd number with a four in the hundreds place.

**What Words? Your Words!**

Fill in the boxes with letters to make words. Each box is worth points. Earn points by filling in as many boxes as you can. Sum up the points you earn for each word.

Make a Word

Sum

1	2	4	6	10	14		
A	I	R	P	L	A	N	E

37

1	2	4		
C	H			

1	2	4	8		
T	O				

Make a Word

Sum

1	2	6		
J	U			

1	2	4	6	10	16	22
	E					

1	2	4	6	10	16
	A				

The factors of 12 are _____ 4 6 _____

What is the value of the 6 in 64?

$$\begin{array}{r} 45 \\ + 79 \\ \hline \end{array}$$

How many 4s are in 48?

$$71 - 52 = \underline{\hspace{2cm}}$$

word root **aqua** can mean **water****aquarium, aquatic**

Name: _____

mimeteem

mimeteem

imeteem

mitches

mitches

otches

meither

meither

eitherr

spent

spent

pent

neighbor

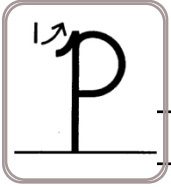
neighbor

eighbor

Name: _____

Copy each letter to the right of the letter.

p p p p p p p



P P P P P

Think of a word that starts with the letter p. Write the word in cursive two times.

Write "P ran after p." in cursive.

Word clues: Search through the words to help with the missing letters in the next section!

put ship cup spring spell pet

sheep expect pick plus pack

Now fill in the missing letters.

ut

lus

s i g

et

up



s e

ck

s i

ac

Name: _____



Mrs. Hernandez drew some bubbles on cards. She put them in order. There were 4 bubbles on the first card. There were 8 bubbles on the second card. There were 12 bubbles on the third card. How many bubbles were on the sixth card?



Which is larger, $\frac{3}{4}$ or $\frac{2}{4}$?

Write the number for four thousand five hundred ninety.

☐ trapp

☐ trep

☐ trap

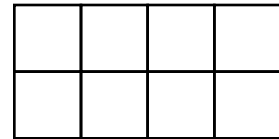
☐ traap

What is the range of these numbers?

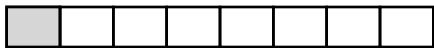
24, 21, 28, 24, 25, 15, 24

If $\square = 7$, then $3 + \square =$ _____

Color in $\frac{1}{2}$.



Write a fraction to represent what is shaded.



What temperature is three degrees below freezing in Celsius?

$$5 \times 7 = \underline{\hspace{2cm}}$$

$$1 \times 9 = \underline{\hspace{2cm}}$$

$$\begin{array}{r} 62 \\ + 34 \\ \hline \end{array}$$

Name: _____

mimeteem

mimeteem

imeteem

mitches

mitches

itches

meither

meither

eitherr

spent

spent

pent

neighbor

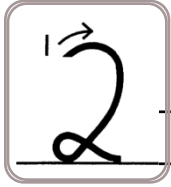
neighbor

ighbor

Name: _____

Copy each letter to the right of the letter.

q q q q q q q



Q Q Q Q

Think of a word that starts with the letter q. Write the word in cursive two times.

Write "Q ran after q." in cursive.

Word clues: Search through the words to help with the missing letters in the next section!

quiet quit quarters quirm

visit inguise stove voice

Now fill in the missing letters.

s u i r m

s o v e

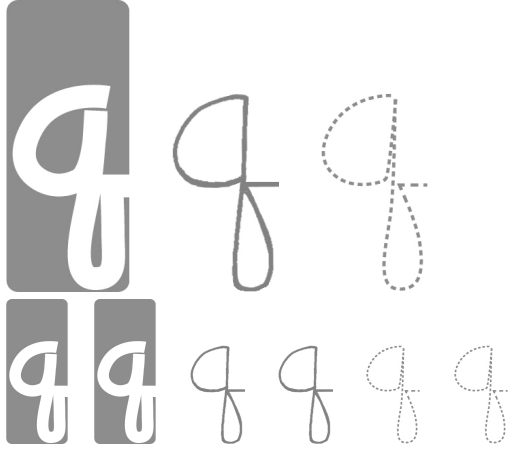
u a r e

i t

s i i n g

v i

Name: _____



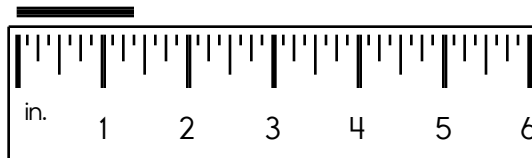
quick uick

Jason's birthday is in April.
Emma's birthday is two
months after Jason's birthday.
What month is Emma's
birthday?

Sarah spent 1 hour writing
about 5 of her cousins.
About how long did she
write about each cousin?

Write the numeral for nine
hundred ninety-six.

Write the length in inches.




$$\begin{array}{r} 43 \\ - 13 \\ \hline \end{array}$$

Round 694 to the nearest
hundred.

Write two odd numbers that
when added together equal
the even number 14.

$$\begin{array}{r} 37 \\ - 25 \\ \hline \end{array}$$

Color $\frac{42}{100}$.



$$\begin{array}{r} 87 \\ - 36 \\ \hline \end{array}$$

$$\begin{array}{r} 85 \\ - 66 \\ \hline \end{array}$$

$$\begin{array}{r} 64 \\ - 39 \\ \hline \end{array}$$

$$\begin{array}{r} 49 \\ - 14 \\ \hline \end{array}$$

What is half of 36?



Name: _____

mimeteem

mimeteem

imeteem

mitches

mitches

otches

meither

meither

eitherr

spent

spent

pent

neighbor

neighbor

eighbor

Name: _____

Copy each letter to the right of the letter.

m m m m m m m



R R R R R R

Ruurr is NOT a word. Who cares! Write Ruurr in cursive!

Think of a word that starts with the letter r. Write the word in cursive two times.

Word clues: Search through the words to help with the missing letters in the next section!

grin rude stream corner

dangerous railroad before

Now fill in the missing letters.

ailroad

ude


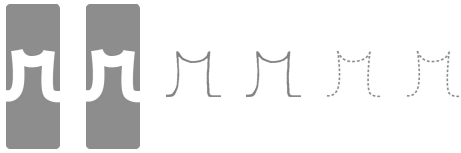
gi

t am

l e

co m

Name: _____



Rewrite these words correctly.

inklude, tiket, toyle

Calculate the sum of 3, 24,
and 21.

Write 491 in expanded
notation.

$$93 + 91 = \underline{\hspace{2cm}}$$

What is the value
of the BIG digit?1,04**7**,100

Which reference material would you
consult to find the answer to this
question?How many definitions are there
for the word "fine"?

$$\begin{array}{r} 52 \\ + 75 \\ \hline \end{array}$$

List the first four multiples of 5.

$$\begin{array}{r} 28 \\ + 22 \\ \hline \end{array}$$

$$\begin{array}{r} 48 \\ + 78 \\ \hline \end{array}$$

$$\begin{array}{r} 85 \\ + 83 \\ \hline \end{array}$$

Which is longer: one foot or
seventeen inches?

Round the number to the
place value of the BIG number.**4**7,511,186



Name: _____

mimeteem

mimeteem

imeteem

mitches

mitches

itches

meither

meither

eitherr

spent

spent

pent

neighbor

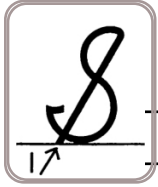
neighbor

ighbor

Name: _____

Copy each letter to the right of the letter.

s s s s s s s



S S S S S S

Saass is NOT a word. Who cares! Write Saass in cursive!

Think of a word that starts with the letter s. Write the word in cursive two times.

Word clues: Search through the words to help with the missing letters in the next section!

sleptcheeseoutside spot

spellingsmile swim stay

Now fill in the missing letters.

lept

wim

p t

ta

o ide

e e

pe lim

Name: _____



south outh

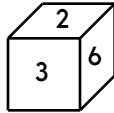
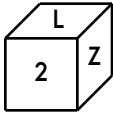
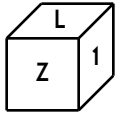
Insert punctuation marks into this sentence.

George Washington said It is better to be alone than to be in bad company

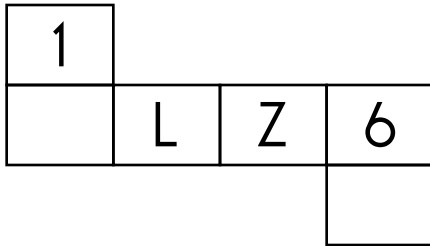
Share 12 equally among 3.

How many days are in September?

This is the look at one cube that is turned around a few times.



This pattern can be folded into the cube. Fill in the missing boxes.



Fill in the missing fraction.

$\frac{2}{7}$, $\frac{3}{7}$, _____ , $\frac{5}{7}$

☐ dayle

☐ daily

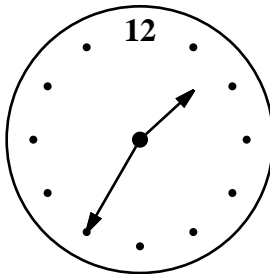
☐ doaly

☐ dialy

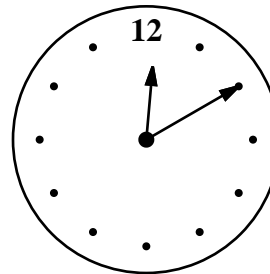


What is a good estimate for 12 times 378?

How many pints are equal to 2 gallons?



current time (pm)



time party starts (pm)

How long until the party? _____

Name: _____

mimeteem

mimeteem

imeteem

mitches

mitches

itches

meither

meither

eitherr

spent

spent

pent

neighbor

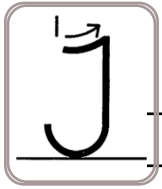
neighbor

ighbor

Name: _____

Copy each letter to the right of the letter.

t t t t t t t t



J J J J J J J

Toott is NOT a word. Who cares! Write Toott in cursive!

Think of a word that starts with the letter t. Write the word in cursive two times.

Word clues: Search through the words to help with the missing letters in the next section!

dent gate rent anything

wait mist might last they

Now fill in the missing letters.

las

ga e

de

wa

any im

m s

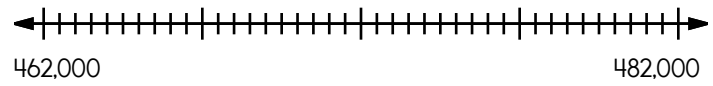
he

Name: _____



this his

Locate where to put the number 471,000 and label the point J.



$$\begin{array}{r} 31 \\ + 60 \\ \hline \end{array}$$

$$\begin{array}{r} 20 \\ + 14 \\ \hline \end{array}$$

$$\begin{array}{r} 75 \\ + 24 \\ \hline \end{array}$$

Cross out all of the prepositional phrases in the sentence.

Can you come to my house this weekend after the speech competition?

If you add 5 to me, the sum is 48. What number am I?



Jacob counted his Dr. Seuss books. He put them in 3 groups of five and has 2 books left over. How many books does he have?

$$9 \overline{)54}$$

What are the first three multiples of 9?

In the number 567,819, what digit is in the hundreds place?

What number is ten thousand more than 6,110?

Fill in the blanks with these numbers:
0, 1, 9

$$\begin{array}{r} \boxed{} 5 \\ 4 \boxed{} \\ + 3 \boxed{} \\ \hline 9 4 \end{array}$$

Fill in the blanks with these numbers:
5, 9, 1

$$\begin{array}{r} \boxed{} 6 \\ 2 2 \\ + \boxed{} 9 \\ \hline \boxed{} 7 \end{array}$$

Name: _____

mimeteem

mimeteem

imeteem

mitches

mitches

otches

meither

meither

eitherr

spent

spent

pent

neighbor

neighbor

eighbor




It's NO PREP
at edHelper.




edHelper.com!

More
history!



**only \$19.99
per year**



Things for the
classroom!



More
science!



New
ideas!



More
puzzles!

