

Name: _____

Copy each letter to the right of the letter.

c c c c c c c

Think of a word that starts with the letter c. Write the word in cursive two times.

Word clues: Search through the words to help with the missing letters in the next section!

picklebaconeachrichsuch

brickumclechartgrocery

cube face calf cool casual

Now fill in the missing letters.

gro _ _ _ _ _ ery

pi _ _ _ _ _ kle

ri _ _ _ _ _

_ _ _ _ _ ol

b _ _ _ _ m

b _ _ _ _ i

_ _ _ _ _ af

_ _ _ _ _ ae

_ _ _ _ _ ah

_ _ _ _ _ ua

_ _ _ _ _ ue

Name: _____



$$\begin{array}{r} 397 \\ + 341 \\ \hline \end{array}$$

$$8 \times 12 =$$

$$\begin{array}{r} 31 \\ - 21 \\ \hline \end{array}$$

$$\begin{array}{r} 44 \\ + 45 \\ \hline \end{array}$$

Write an equivalent fraction with a denominator of 100.

$$\frac{3}{10} =$$

$$\frac{9}{10} =$$

$$\frac{4}{10} =$$

$$\frac{5}{10} =$$

Amanda made chocolate chip pancakes for International Pancake Day. She used an octagonal grill with 9-inch sides. What is the perimeter of Amanda's grill?

$$15 \div 3 =$$

Write > or <.

$$3,171 \bigcirc 3,211$$

$$529 \bigcirc 129$$

$$6,589 \bigcirc 8,833$$

$$1,947 \bigcirc 1,749$$

$$7,769 \bigcirc 7,769$$

$$517 \bigcirc 417$$

$$9,243 \bigcirc 7,315$$

$$566 \bigcirc 556$$

$$6,783 \bigcirc 8,302$$

Choose the word that best completes the sentence.

I would love to go to the Acme Chemistry Fair, (to/too).

Correctly insert quotation marks into the sentence.

I know, I know! Chris yelled.



Name: _____

careers

careers

careers

cluster

cluster

cluster

cacti

cacti

cacti

tackle

tackle

tackle

record

record

record

Name: _____

Copy each letter to the right of the letter.

a a a a a a a

Think of a word that starts with the letter a. Write the word in cursive two times.

Word clues: Search through the words to help with the missing letters in the next section!

bare aum thatch satch croak

animal blank etblast gain

because arm mammal like

Now fill in the missing letters.

h tch

a m i m m l

cr k

s t

b r

be se

l e

m


l m e t

au

r m

g m

Name: _____

Compare the fractions. Write $>$, $<$, or $=$.

$$\frac{4}{10} \bigcirc \frac{4}{8}$$

$$\frac{5}{10} \bigcirc \frac{50}{100}$$

$$\frac{8}{14} \bigcirc \frac{8}{13}$$

$$\frac{4}{6} \bigcirc \frac{2}{6}$$

Form the past, present, and future progressive form of the verb.
to survive

$$\begin{array}{r} 679 \\ - 632 \\ \hline \end{array}$$

Circle the addition property
for $22 + 94 = 94 + 22$.

associative property
commutative property

Jessica will win if a random number pulled out of a box is an even number. 24 pieces of paper, numbered 1 to 24, are put inside a box. What is the chance that Jessica will win?

$$13 \text{ km} = \text{_____ m}$$



How many grams are in 7 kilograms?

_____ grams

$$1 \text{ lb} = 16 \text{ oz}$$

$$12 \text{ lb} = \text{_____ oz}$$

Write a letter that has two or more lines of symmetry.

Choose the word that best completes the sentence.

Mrs. Thompson has (two/to) sets of twins!

Name: _____

careers

careers

careers

cluster

cluster

cluster

cacti

cacti

cacti

tackle

tackle

tackle

record

record

record

Name: _____

Copy each letter to the right of the letter.

d d d d d d d

Think of a word that starts with the letter d. Write the word in cursive two times.

Word clues: Search through the words to help with the missing letters in the next section!

doll wim dlam dhid ladder

lady dove brand find did

disappear aloud bread dash

Now fill in the missing letters.

wim

la y

d er

a u

sh

d d

fi


b a

l m

i a p e n

h e

Name: _____



On Friday, Saturday, and Sunday the Reynolds Register sold a total of 9,539 newspapers. It sold 4,564 newspapers on Friday and 3,403 newspapers on Saturday. How many newspapers did the Reynolds Register sell on Sunday?

Write a letter that has a line of symmetry.

For 937,517,663,946, write the digit that is in the hundred thousands place.

Can 209 be evenly divided by 9? Circle:

209 is divisible by 9

209 is NOT divisible by 9

How many digits are in ten times ten?

Emily was given four numbers: 9, 2, 1, and 5. She needs to use two of these numbers to make a fraction. Can she make a fraction that is greater than three-fourths?



Name: _____

careers

careers

careers

cluster

cluster

cluster

cacti

cacti

cacti

tackle

tackle

tackle

record

record

record

Name: _____

Copy each letter to the right of the letter.

g g g g g g g

Think of a word that starts with the letter g. Write the word in cursive two times.

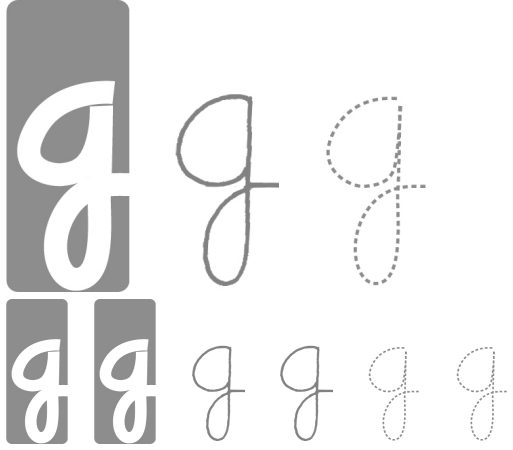
Word clues: Search through the words to help with the missing letters in the next section!

geese froggetsamggoo sego
 gasgateboughtgoimglbadge
 gradesoggygrapesgloves

Now fill in the missing letters.

o	sam	at	o s	et
so	a e	ga	o m	
no	a e	es	el	

Name: _____



game ame

Which sentence contains a metaphor?

- (A) The cat is queen of our house.
- (B) I told Trevor that our cat is not a queen.
- (C) Trevor rolled his eyes at me and began to walk away.
- (D) Trevor says that I am not very good at understanding metaphors yet.

$$24 \div 4 =$$

How far do you think it is from the ground to your chin? Write an estimate of the distance you think it could be.

$$4 \times 10 =$$

The principal of your school wants to buy twenty-three books. Each book costs \$14.40. She wants to estimate how much it will cost. Show her how you would estimate the cost:

What is the homophone of this word?
flower

Cross out all of the prepositional phrases in the sentence.

Over the river, through the woods, under the bridge, and into the tunnel to Grandmother's house we go.



Name: _____

careers

careers

careers

cluster

cluster

cluster

cacti

cacti

cacti

tackle

tackle

tackle

record

record

record

Name: _____

Copy each letter to the right of the letter.

h h h h h h h

Think of a word that starts with the letter h. Write the word in cursive two times.

Word clues: Search through the words to help with the missing letters in the next section!

change him who naughty

man chokelunch think

laugh highman holesearch

Now fill in the missing letters.

tim

choke

man l

mk

em

age

au

mc

mc

wo

Name: _____

h h h

h h h h h

hug ug

$$\begin{array}{r} 251 \\ \times 2 \\ \hline \end{array}$$

$$\begin{array}{r} 883 \\ \times 3 \\ \hline \end{array}$$

What time is 16 hours after
1:00 p.m.?

Mary is making up her own calendar. The first month of her weird calendar is called Maffy. To make matters worse, she is giving Maffy a total of sixteen days. What is the least number of Mondays that can occur during Maffy? Show the month of Maffy.



Mary has two favorite numbers. If you add her favorite numbers, you get 23. If you multiply her favorite numbers, you get 76. What are her mystery numbers?

Circle the digit in the tenths place.

831.943

Name: _____

careers

careers

careers

cluster

cluster

cluster

cacti

cacti

cacti

tackle

tackle

tackle

record

record

record

Name: _____

Copy each letter to the right of the letter.

t t t t t t t t

Think of a word that starts with the letter t. Write the word in cursive two times.

Word clues: Search through the words to help with the missing letters in the next section!

climate stem gift respect

twice stain stretch pitch to

mistwitch cutemarket yet

Now fill in the missing letters.

cu _ e

clima _ e

m _ rke

_ o

_ ai _

ye _

res _ p

_ _ _ ce

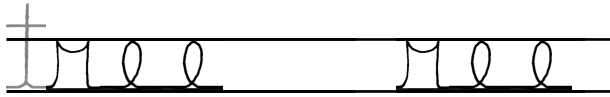
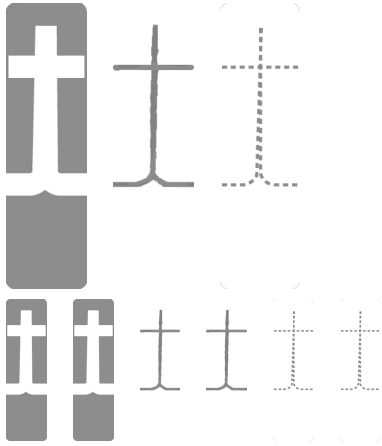
p _ c _

_ i _ c _

s _ _ m _

_ _ _ is _

Name: _____



$$\begin{array}{r} 79 \\ \times 4 \\ \hline \end{array}$$

$$\begin{array}{r} 42 \\ \times 8 \\ \hline \end{array}$$

**What Words? Your Words!**

Fill in the boxes with letters to make words. Each box is worth points. Earn points by filling in as many boxes as you can. Sum up the points you earn for each word.

Make a Word**Sum**

1	2	4	6	10	16		
F	U	N	E	R	A	L	

23

1	2	4	6		
S	O				

1	2	4	6	8	12	18
	A					

1	2	4	8	14	
B	R				

Make a Word**Sum**

1	2	4	6	10	14
P	E				

1	2	4	6	10	16	22
		I				

1	2	4	10	16	
S	T		E		

1	2	4	6	10	16
H	O				

Circle the greatest number:

89,383,410,265 648,320,957,135

25,704 6,829,104,716

Add the correct end punctuation for this sentence.

How many cartwheels can you do

Name: _____

careers

careers

careers

cluster

cluster

cluster

cacti

cacti

cacti

tackle

tackle

tackle

record

record

record

Name: _____

Copy each letter to the right of the letter.

p p p p p p p

Think of a word that starts with the letter p. Write the word in cursive two times.

Word clues: Search through the words to help with the missing letters in the next section!

whisper group drip helper

part crept zipper spent stop

preach plenty employ pack

Now fill in the missing letters.

ack

em loy

nt

to

w s e

e h

am

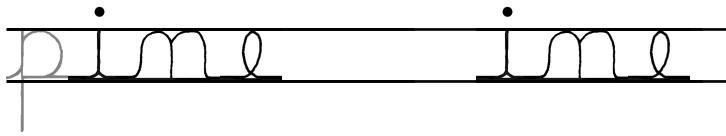

re

zi

ri

go

Name: _____



Hannah wants Sara to guess a two digit number. She tells Sara that her number has two different digits. The digits are 3 and 1. Sara thinks. She then guesses the number 13. What are the chances that Sara has guessed correctly?

Write the missing family fact.

$$83 + 93 = 176$$

$$176 - 83 = 93$$

$$93 + 83 = 176$$

Which is the largest?

$$73.8 \div 2.6 \quad 73.8 \div 2.5 \quad 73.8 \div 2.4$$

Write an equation to represent this:

The difference between fourteen and five is nine.

Circle the word that best completes the sentence.

(There/their) goes a happy man.

$$8 \times 4 =$$

$$54 \div 9 =$$

Nine kids and two adults are going to the circus. Kid's tickets are on sale for only half the price of adult tickets. The total cost is \$90. How much is one kids ticket? How much is one adult ticket?



word root **inter** can mean **between** **interstate, international**

Name: _____

careers

careers

careers

cluster

cluster

cluster

cacti

cacti

cacti

tackle

tackle

tackle

record

record

record

Name: _____

Copy each letter to the right of the letter.

e e e e e e e

Think of a word that starts with the letter e. Write the word in cursive two times.

Word clues: Search through the words to help with the missing letters in the next section!

every splat wrench
tumble blaze glove chore after
seam grape deep meal blew

Now fill in the missing letters.

very

y t

a t

b az

am

ch

l w

tu

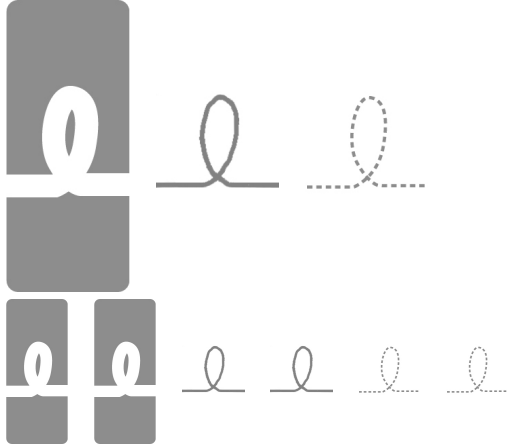
es

g p

pl

d p

Name: _____




Write a fraction to represent the situation.

Situation: 3 computers are shared by 7 students.

Write a fraction:

This fraction is between what two whole numbers?

between _____ and _____



Insert a comma in the appropriate place in this sentence.

My brother applied to four colleges but he knows which one he wants to attend.

Write this as a number in standard form.
Use a comma in your number.five hundred fifty-seven thousand five hundred eighty

Circle the smallest number:

294,367,801

25,460,059

3,728,461,597

78,931

If you multiply 528×644 , you will have a number that is how much bigger than 176×322 ?

It will be six times as big.

It will be seven times as big.

It will be nine times as big.

It will be twice as big.

It will be five times as big.

It will be eight times as big.

$$(3 + 8) + 2 =$$

Write 81,225 in words.

Circle the word that best completes the sentence.

I love to go (to/too) the library.

Name: _____

careers

careers

careers

cluster

cluster

cluster

cacti

cacti

cacti

tackle

tackle

tackle

record

record

record

Name: _____

Copy each letter to the right of the letter.

l l l l l l l l

Think of a word that starts with the letter l. Write the word in cursive two times.

Word clues: Search through the words to help with the missing letters in the next section!

bulldollarsledclimball

hardlylandclosewhilehill

whalefillalongcleanclay

Now fill in the missing letters.

whi _ e

_ and

b _ l

s _ d

_ _ _ m _ l

_ i _ l

wh _ _

h _ l

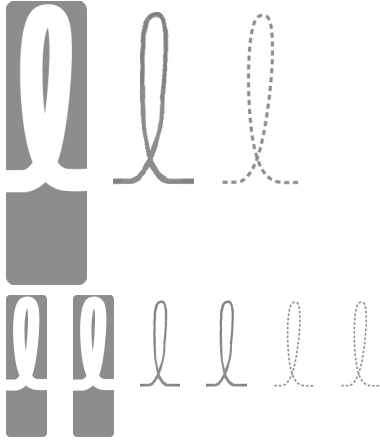
d _ _ a _

h _ _ _

_ _ a _

a _ _ m _

Name: _____



light ight

Write down the two synonyms in this sentence.

My mother told me that it was important for us to communicate, so I needed to talk to her more.

Circle the answer that best completes the sentence.

I have neither brothers (or/nor) sisters.

Draw a shape that has between four and five lines. The shape should have at least one line of symmetry. Show the line of symmetry using a dotted line.

April wants to call Amanda. Amanda is on vacation in Asia. It is a time difference of thirteen hours. Amanda's time is always later than April's time. If it is 8:22 A.M. where April lives, then what time is it where Amanda is?



In the number 409,073, the digit 7 is in what place?

Circle the relative adverb.

James is not sure where he left his glasses.

Insert a comma in the appropriate place in this sentence.

We might have hot dogs for dinner or we might have hamburgers.

Name: _____

careers

careers

careers

cluster

cluster

cluster

cacti

cacti

cacti

tackle

tackle

tackle

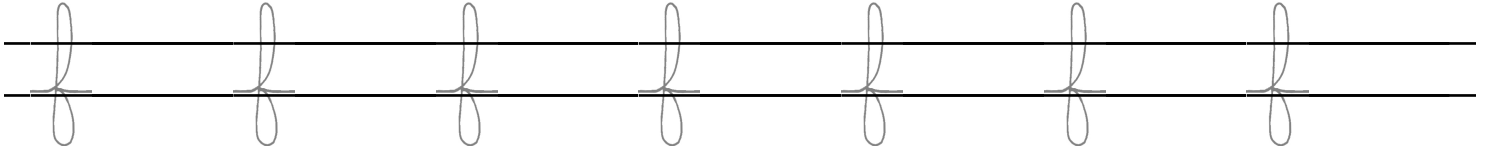
record

record

record


Name: _____

Copy each letter to the right of the letter.



Think of a word that starts with the letter f. Write the word in cursive two times.

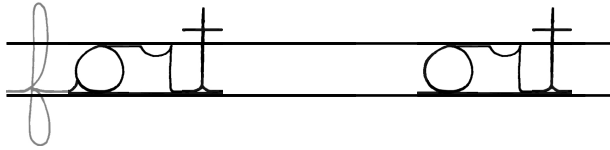
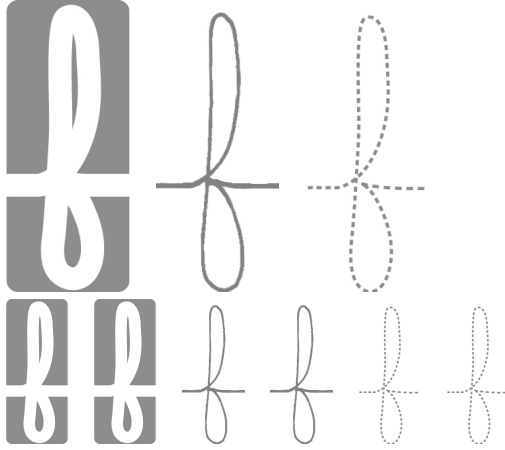
Word clues: Search through the words to help with the missing letters in the next section!



Now fill in the missing letters.

ool	orget	ie	o	at
hee ul	im	f m	el	
th r	o ot	ag	cl	

Name: _____



In the number 2,385:

5 is _____ times as much as the value of the 8.

3 is _____ times as much as the value of the 2.

Circle the correctly spelled word.

I didn't want to (offend/ofend) my
sister, but I had to tell her that
stripes and polka dots did not
make a very good outfit.

Circle the answer that best completes
the sentence.

(May/Can) you eat a jalapeno
whole?

The circus is in town! Tickets are only \$7 for kids.
Adults need to pay double the price of kids
tickets. Emily is bringing four of her friends in
her class. Her mom is also coming. Emily wants
to pay for everyone. How much will she need to
pay?

Hannah wrote down a fraction on
a piece of paper. If you take her
fraction and multiply it by five you
get thirteen. Can you guess what
her fraction is?

Can 764 be evenly divided by 3? Circle:

764 is divisible by 3

764 is NOT divisible by 3

Can 517 be evenly divided by 11? Circle:

517 is divisible by 11

517 is NOT divisible by 11



Name: _____

careers

careers

careers

cluster

cluster

cluster

cacti

cacti

cacti

tackle


tackle

tackle

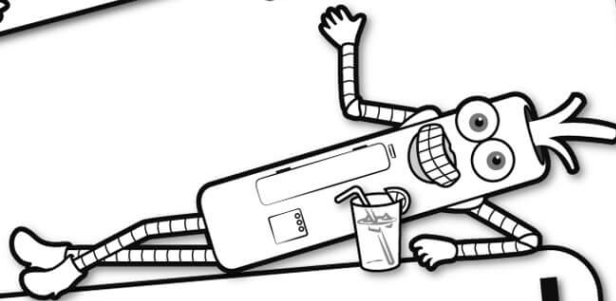
record

record

record



It's NO PREP
at edHelper.



edHelper.com!

**only \$19.99
per year**

