

Name: _____

Copy each letter to the right of the letter.

x x x x x

Think of a word that starts with the letter x. Write the word in cursive two times.

Word clues: Search through the words to help with the missing letters in the next section!

flexible exercise exit

example excellent next

collar corn seed quiet walk

Now fill in the missing letters.

s _ _ ed

m _ _ t

_ _ olla

_ _ _ it

_ _ _ a _ pl

_ _ _ rm

_ _ _ u _ t

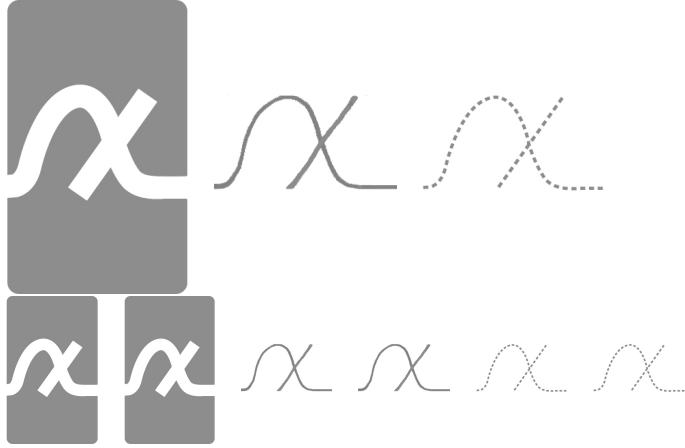
fl _ _ _ _ _ e

_ _ _ _ _ rci

_ _ _ _ _ ak

Name: _____

The Village Voice Club is having a dinner in honor of Joseph Pulitzer's birthday. There are 36 members in the club. Each table will seat 6 people. How many tables will be needed to seat everyone?



x may *may*

Look at the chart.
The number 24 is in the
3rd column of the 1st row.

8	16	24	32	40
48	56	64	72	80
88	96	104	112	120
128	136	144	152	160

What number is in the
1st column of the 2nd row?

If the pattern continues,
what number would go in the
2nd column of the 5th row?

Fill in the blank with a preposition in
order to complete the sentence.
I laughed when the baby wiped
his hands _____ me.

In each group, circle the word that is
spelled correctly.
achieve, acheive
construckt, construct
curtan, curtain

Insert a comma in the correct place in
this sentence.
No I have never seen chicks
hatch from their eggs.

$$\begin{array}{r} 304 \\ + 252 \\ \hline \end{array}$$

$$\begin{array}{r} 47 \\ - 19 \\ \hline \end{array}$$



Write true or false.

2 is a factor of 16 true

9 is a factor of 81 _____

8 is a factor of 18 _____

9 is a factor of 40 _____

4 is a factor of 8 _____

7 is a factor of 21 _____

word root **bene** can mean **good**

benefactor, benevolent

Name: _____

exiles

exiles

xiles

exist

exist

xist

exhibit

exhibit

xhibit

paradox

paradox

aradox

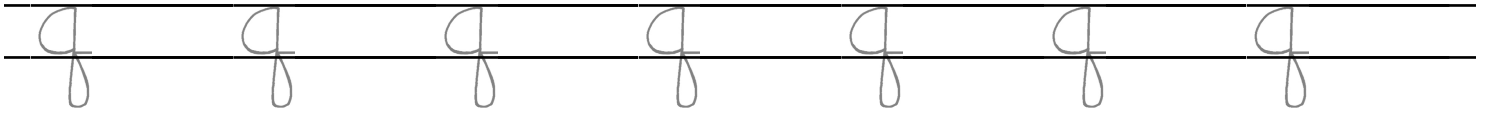
texture

texture

exture


Name: _____

Copy each letter to the right of the letter.



Think of a word that starts with the letter q. Write the word in cursive two times.

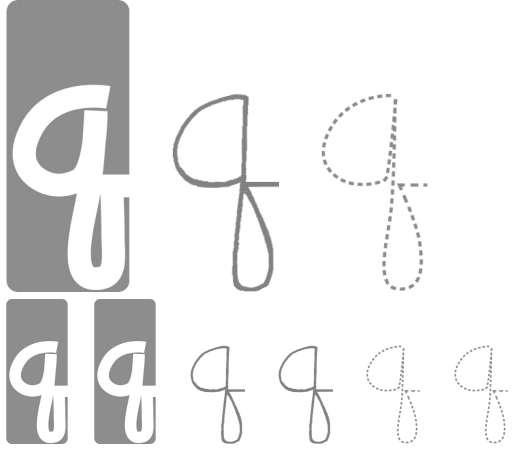
Word clues: Search through the words to help with the missing letters in the next section!



Now fill in the missing letters.

le _ _ m	s _ u _ i _ r _ t	_ _ c _ m	_ _ m _ m
_ _ o _ t	_ _ u _ s _ _ o _ n	_ _ l _ p _ f _ l	
_ _ o _ g	_ _ u _ _ k	_ _ f _ _ g	_ _ b _ e _ _ s _ e

Name: _____



quick wick

What is the meaning of the underlined word?

When my sled hit a rock, I began to plunge down the hill sideways!

Circle the addition property for $54 + 109 = 109 + 54$.

associative property
commutative property

How many yards are in 24 feet?

_____ yards

23 km = _____ m

Write 5,373,764 in words.

1 cm = 10 mm

26 cm = _____ mm

$60 \div 12 =$

Circle the greatest number:

265,307
9,126
8,042,619
834,507,149

Sara has two favorite numbers. If you add her favorite numbers, you get 16. If you multiply her favorite numbers, you get 55. What are her mystery numbers?

$$\begin{array}{r} 38 \\ + 42 \\ \hline \end{array}$$

What time is 15 hours after 3:00 p.m.?

$$\begin{array}{r} 570 \\ - 448 \\ \hline \end{array}$$



What is the meaning of the underlined phrase?

The dog shot out of his kennel like an arrow when the boy unlocked the door.

Name: _____

exiles

exiles

xiles

exist

exist

xist

exhibit

exhibit

xhibit

paradox

paradox

aradox

texture

texture

exture

Name: _____

Copy each letter to the right of the letter.

z z z z z z z

Think of a word that starts with the letter z. Write the word in cursive two times.

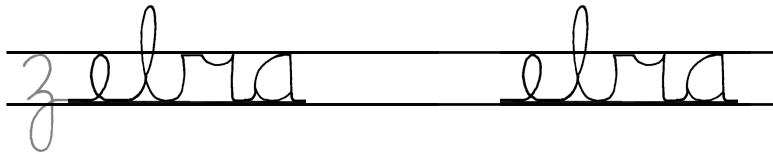
Word clues: Search through the words to help with the missing letters in the next section!

blaze prize zigzag frozen
frozen size zipped size
close sprain lady croak fix

Now fill in the missing letters.

cro k	cl se	si	s s
m e	a e	dy	pp
f x	mi	s m m	oo

Name: _____



Circle the word that best completes the sentence.

The tortoise beat the (hair/hare) in the race.

Circle the verb in the sentence.
Write the correct form of the verb on the line.

There was several posters hanging on the walls.

Can 446 be evenly divided by 11? Circle:

446 is divisible by 11

446 is NOT divisible by 11

$$(8 + 6) + 9 =$$

The American flag has 7 red stripes, 6 white stripes, and 50 stars. Which number is odd?

The principal of your school wants to buy twenty-two books. Each book costs \$10.40. She wants to estimate how much it will cost. Show her how you would estimate the cost:

Write a letter that has a line of symmetry.



Name: _____

exiles

exiles

xiles

exist

exist

xist

exhibit

exhibit

xhibit

paradox



paradox

aradox

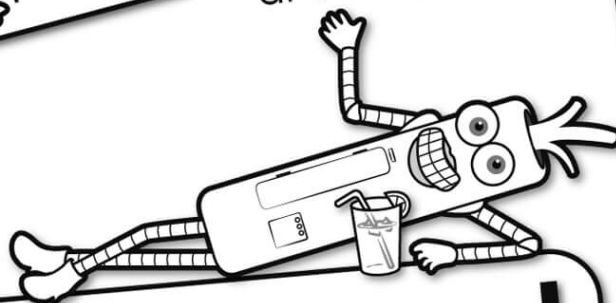
texture

texture

exture




It's NO PREP
at edHelper.




edHelper.com!


More
history!



**only \$19.99
per year**



Things for the
classroom!



More
science!



New
ideas!



More
puzzles!

