


Name: _____

Copy each letter to the right of the letter.

g g g g g g g



G

G

G

G

Write "G ran after g." in cursive.

Geegg is NOT a word. Who cares! Write Geegg in cursive!

Word clues: Search through the words to help with the missing letters in the next section!

string forgothigh caught

taught grocery gring going

Now fill in the missing letters.

grocery

rim

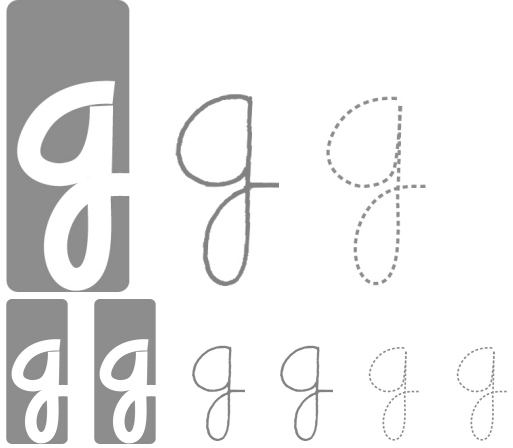
for o

trim

tht

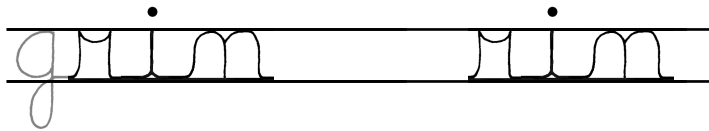
au h

Name: _____

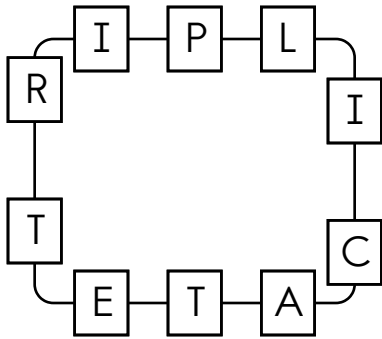


Ms. White had \$106 to spend on children's books for the library. If books cost \$7.50 each, how many books could she buy and still have \$8 left over?

13 cm = _____ mm



Write the hidden word. Start at one letter and then move either left or right.



In the number 48,263:

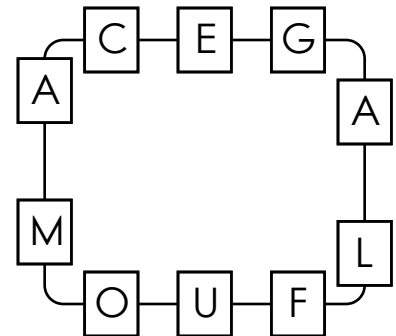
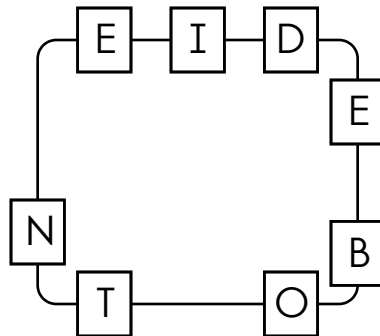
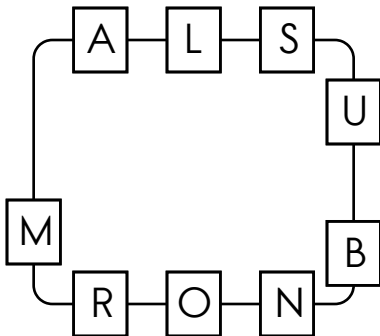
6 is _____ times as much as the value of the 8.

2 is _____ times as much as the value of the 3.

Choose the correct form of the pronoun and write it on the line.

(Who/Whom) did you say would be picking you up after school?

Write the hidden word. Start at one letter and then move either left or right. Continue in same direction.



word root **act** can mean **to drive or to do**

counteract, interact, interaction

Name: _____

grieve

grieve

rieve

rieve

gates

gates

ates

ates

barge

barge

arge

arge

graze

graze

raze

raze

stung

stung

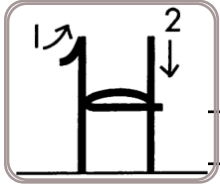
tung

tung

Name: _____

Copy each letter to the right of the letter.

h h h h h h h



H H H H

Write "H ran after h." in cursive.

Think of a word that starts with the letter h. Write the word in cursive two times.

Word clues: Search through the words to help with the missing letters in the next section!

branch chipmunch hay she

shime clash hiker worth he

Now fill in the missing letters.

s _ e

s _ i _ m _ e

m _ u _ _ c _

c _ i _

h _ _

_ _ a _ m _

_ _ i _ e _

c _ a _

Name: _____

h h h

h h h h h h

hush ush

$$\begin{array}{r} 163 \\ \times 6 \\ \hline \end{array}$$

$$\begin{array}{r} 412 \\ \times 3 \\ \hline \end{array}$$

$$\begin{array}{r} 42 \\ - 26 \\ \hline \end{array}$$

$$\begin{array}{r} 29 \\ + 33 \\ \hline \end{array}$$

Write a letter that has two or more lines of symmetry.

$$\begin{array}{r} 946 \\ - 272 \\ \hline \end{array}$$

1 km = 1,000 m

8 km = _____ m

$$8 \times 6 =$$

Jessica is making up her own calendar. The first month of her weird calendar is called Raffy. To make matters worse, she is giving Raffy a total of twenty-two days. What is the greatest number of Saturdays that can occur during Raffy? Show the month of Raffy.



Name: _____

grieve

grieve

rieve

rieve

gates

gates

ates

ates

barge

barge

arge

arge

graze

graze

raze

raze

stung

stung

tung

tung

Name: _____

Copy each letter to the right of the letter.

i i i i i i i



l l l l l

Think of a word that starts with the letter i. Write the word in cursive two times.

Write "I ran after i." in cursive.

Word clues: Search through the words to help with the missing letters in the next section!

sail quit alike is finger

friend stick tied kick bait

Now fill in the missing letters.

st ck

qu t

t e

s

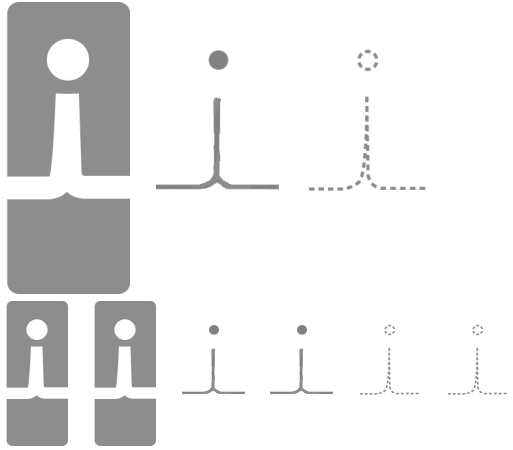
ck

m n

n em

b t

Name: _____



inside mside



If you multiply 312×660 , you will have a number that is how much bigger than 104×330 ?

It will be six times as big.

It will be twice as big.

It will be nine times as big.

It will be four times as big.

It will be five times as big.

$$\begin{array}{r} 384 \\ + 498 \\ \hline \end{array}$$

Ava was given five numbers: 9, 3, 7, 2, and 4. She needs to use two of these numbers to make a fraction. Can she make a fraction that is greater than four-fifths?

How many centimeters are in 20 millimeters?

_____ centimeters

$$55 \div 5 =$$

Name: _____

grieve

grieve

rieve

rieve

gates

gates

ates

ates

barge

barge

arge

arge

graze

graze

raze

raze

stung

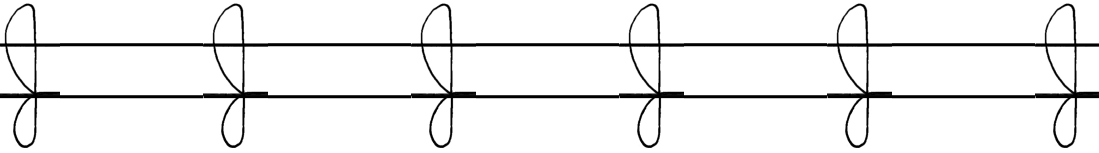
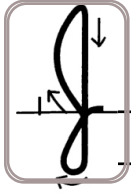
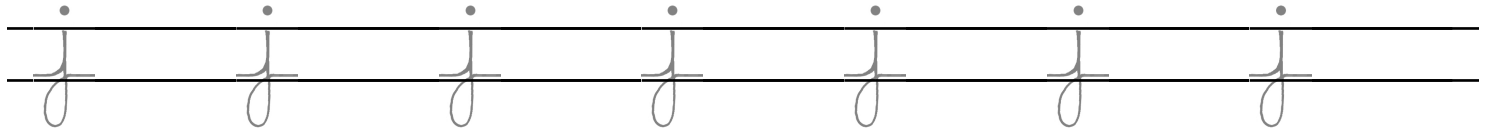
stung

tung


tung

Name: _____


Copy each letter to the right of the letter.



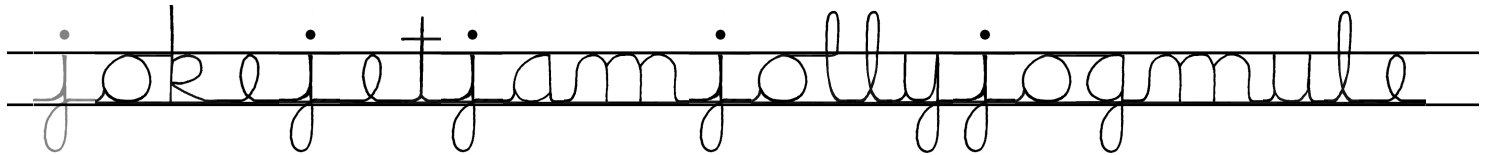
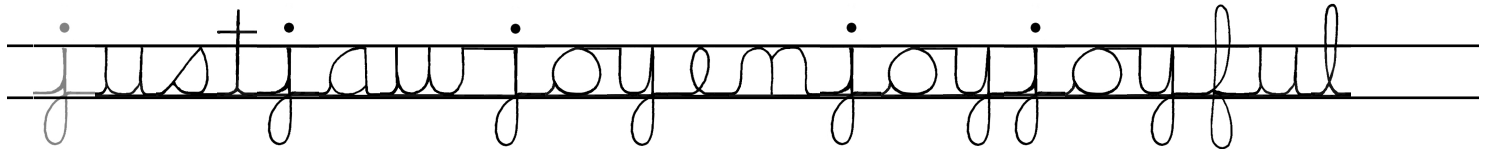
Write "J ran after j." in cursive.



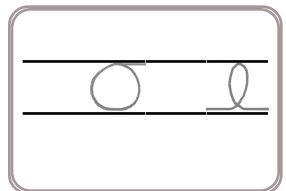
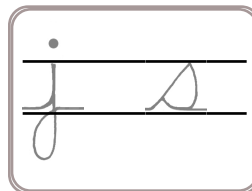
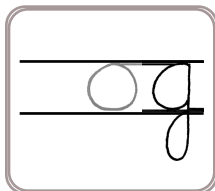
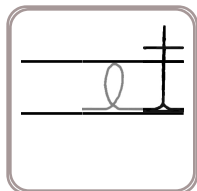
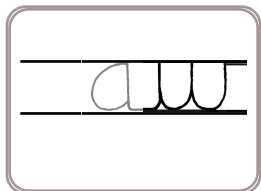
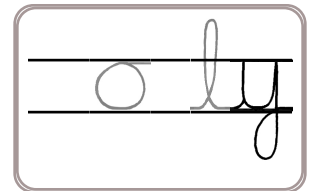
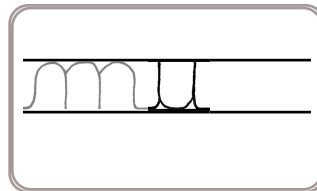
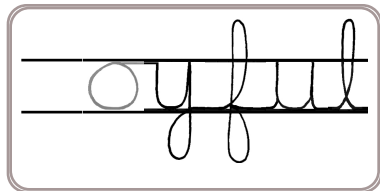
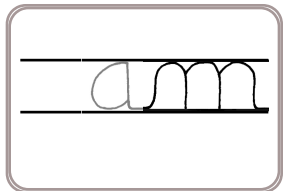
Jeejj is NOT a word. Who cares! Write Jeejj in cursive!



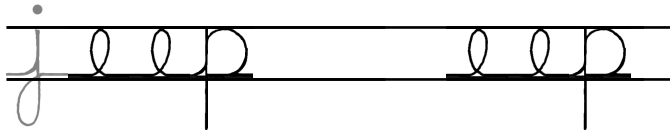
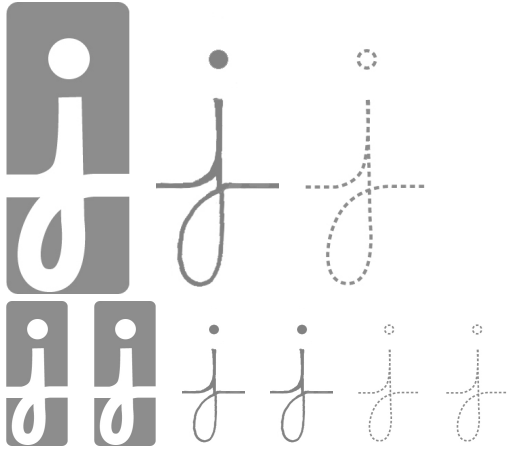
Word clues: Search through the words to help with the missing letters in the next section!



Now fill in the missing letters.



Name: _____



Solve.

$$(5 \times 9) - (16 \div 8)$$

$$6 + (18 \div 2) + 9$$

$$72 \div 8 =$$

Can 278 be evenly divided by 8? Circle:

278 is NOT divisible by 8

278 is divisible by 8

Anna wants to call Sara. Sara is on vacation in Asia. It is a time difference of ten hours. Sara's time is always later than Anna's time. If it is 6:14 P.M. where Anna lives, then what time is it where Sara is?

Write a letter that has a line of symmetry.

$$5 \times 7 =$$

Emily has two favorite numbers. If you add her favorite numbers, you get 19. If you multiply her favorite numbers, you get 70. What are her mystery numbers?

Write this as a number in standard form. Use a comma in your number.

four hundred forty-four thousand sixty-four



Name: _____

grieve

grieve

rieve

rieve

gates

gates

ates

ates

barge

barge

arge

arge

graze

graze

raze

raze

stung

stung


tung

tung

Name: _____

Copy each letter to the right of the letter.

k k k k k k k



K K K K K

Think of a word that starts with the letter k. Write the word in cursive two times.

Write "K ran after k." in cursive.

Word clues: Search through the words to help with the missing letters in the next section!

block blank week make joke

lock keep stocking market

Now fill in the missing letters.

blam

wee

stoc ing

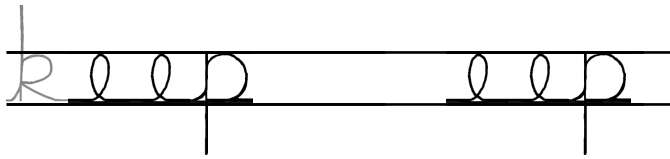
l c

ee

bo

ae

Name: _____



Complete the pattern.

$$9,000 \times 5 = \underline{\hspace{2cm}}$$

$$900 \times 5 = \underline{\hspace{2cm}}$$

$$90 \times 5 = \underline{\hspace{2cm}}$$

$$9 \times 5 = \underline{\hspace{2cm}}$$

Write the missing family fact.

$$176 \div 8 = 22$$

$$8 \times 22 = 176$$

$$22 \times 8 = 176$$

Can 980 be evenly divided by 5? Circle:

980 is divisible by 5

980 is NOT divisible by 5

The principal of your school wants to buy thirty-one books. Each book costs \$12.80. She wants to estimate how much it will cost. Show her how you would estimate the cost:

How far do you think it is from the ground to your chin? Write an estimate of the distance you think it could be.

Circle the digit in the hundredths place.

6,981.82



Name: _____

grieve

grieve

rieve

rieve

gates

gates

ates

ates

barge

barge

arge

arge

graze

graze

raze

raze

stung

stung

tung

tung

Name: _____

Copy each letter to the right of the letter.

l l l l l l l l



L L L L L L

Write "L ran after I." in cursive.

Think of a word that starts with the letter l. Write the word in cursive two times.

Word clues: Search through the words to help with the missing letters in the next section!

lie blow early shall log clue

felt listenings sail fault

Now fill in the missing letters.

f e t

o g

b w

a l


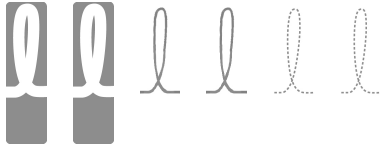
l e

i s t m m

i e

a i

Name: _____

Compare the fractions. Write $>$, $<$, or $=$.

$$\frac{4}{10} \bigcirc \frac{4}{5}$$

$$\frac{3}{10} \bigcirc \frac{30}{100}$$

$$\frac{8}{13} \bigcirc \frac{8}{9}$$

$$\frac{2}{5} \bigcirc \frac{3}{5}$$

Cross out all of the prepositional phrases in the sentence.

When I turned on my computer,
my music started playing in the
background.

Can 315 be evenly divided by 7? Circle:

315 is divisible by 7

315 is NOT divisible by 7

How many digits are in the number of days in the current month?

$$8 \times 12 =$$

Circle the smallest number:

8,520

6,790,413

219,378,456,170

6,243,985,734

In the number 2,699,845,432, the digit 6 is in what place?

Circle the addition property for $27 + 131 = 131 + 27$.

associative property

commutative property

Insert a comma in the appropriate place in this sentence.

I asked my sister to leave my
brother alone but she kept
bothering him.

$$60 \div 12 =$$



Name: _____

grieve

grieve

rieve

rieve

gates

gates

ates

ates

barge

barge

arge

arge

graze

graze

raze

raze

stung

stung

tung

tung

Name: _____

Copy each letter to the right of the letter.

m m m m



m m m

Think of a word that starts with the letter m. Write the word in cursive two times.

Write "M ran after m." in cursive.

Word clues: Search through the words to help with the missing letters in the next section!

masklumchroo mmmam

streamsomehow mud

Now fill in the missing letters.

ud

am

as

Name: _____

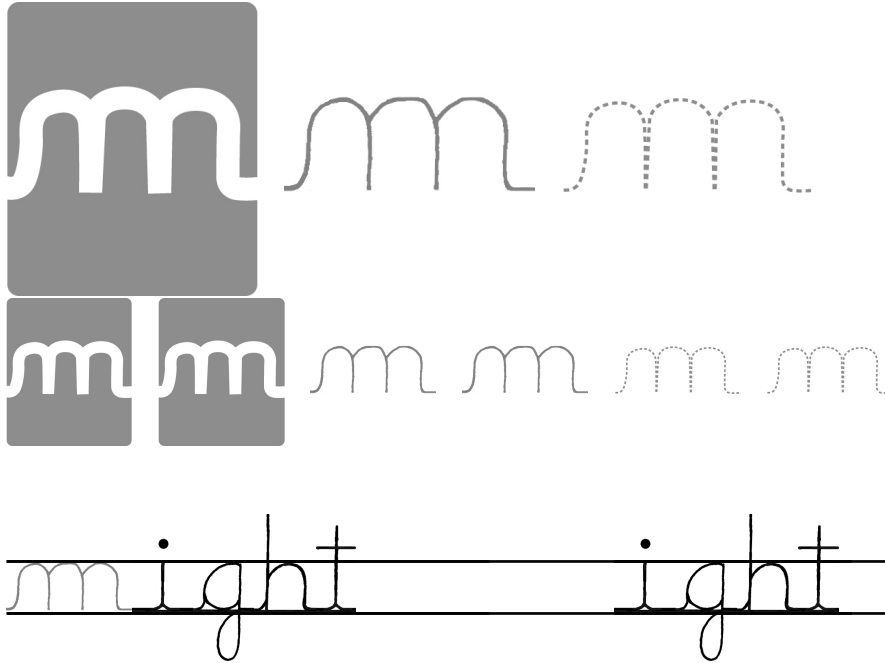
Circle the greatest number:

746,293,501

52,149,836,070

87,314,956

4,056

**What Words? Your Words!**

Fill in the boxes with letters to make words. Each box is worth points. Earn points by filling in as many boxes as you can. Sum up the points you earn for each word.

Make a Word**Sum**

1	2	4	6	10	16
C	R	O	O	K	

13

1	2	6	12	18
F	L	O		

1	2	4	6	10	16
	O	T			

1	2	4	6	10	16
B	U				

Make a Word**Sum**

1	2	4	6	10	14
S	L				

1	2
P	I

1	2	4	6	12
F	E			

1	2	4	6	12	18
R	E				

For 2,577,318,017,848,385, write the digit that is in the hundred thousands place.

What is the homophone of this word?
great

word root **cyt** can mean **cell****cytoplasm, cytology**

Name: _____

grieve

grieve

rieve

rieve

gates

gates

ates

ates

barge

barge

arge

arge

graze

graze

raze

raze

stung

stung

tung

tung




It's NO PREP
at edHelper.



edHelper.com!


**only \$19.99
per year**




Things for the
classroom!



More
science!



More
puzzles!



More
history!

