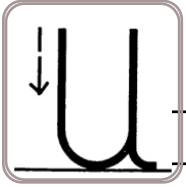


Name: \_\_\_\_\_

Copy each letter to the right of the letter.

u u u u u u u



u u u u

Uaauu is NOT a word. Who cares! Write Uaauu in cursive!

\_\_\_\_\_

Think of a word that starts with the letter u. Write the word in cursive two times.

\_\_\_\_\_

Word clues: Search through the words to help with the missing letters in the next section!

butter ruler erminushug

bughush put duty mouth bull

Now fill in the missing letters.

mo th

r le

p t

sh

b g


ug

b l

d y

r r

Name: \_\_\_\_\_



$$\begin{array}{r} 452 \\ + 205 \\ \hline \end{array}$$

$1 \text{ kg} = 1,000 \text{ g}$

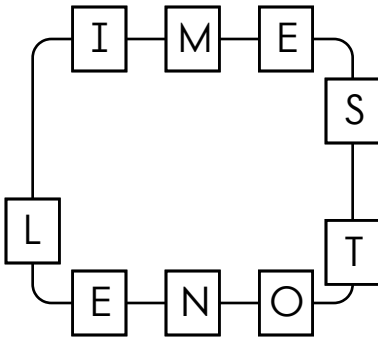
$19 \text{ kg} = \underline{\hspace{2cm}} \text{ g}$

$27 \text{ lb} = \underline{\hspace{2cm}} \text{ oz}$

$36 \div 3 =$

$$\begin{array}{r} 36 \\ + 40 \\ \hline \end{array}$$

Write the hidden word. Start at one letter and then move either left or right.



\_\_\_\_\_

Look at the chart.  
The number 32 is in the  
3rd column of the 1st row.

28	30	32	34	36
38	40	42	44	46
48	50	52	54	56
58	60	62	64	66

What number is in the  
3rd column of the 4th row?

If the pattern continues,  
what number would go in the  
2nd column of the 6th row?

$$\begin{array}{r} 38 \\ - 19 \\ \hline \end{array}$$



$$\begin{array}{r} 323 \\ \times 8 \\ \hline \end{array}$$

$$\begin{array}{r} 947 \\ \times 3 \\ \hline \end{array}$$

Circle the correctly spelled words.  
I love your (lase/lace)  
(blouse/blowse)!

$(5 + 8) + 8 =$

Name: \_\_\_\_\_

uneasy

uneasy

neasy

neasy

unfair

unfair

nfair

nfair

quest

quest

uest

uest

ugly

ugly

gly

gly

clues


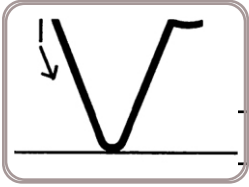
clues

lues


lues

Name: \_\_\_\_\_


Copy each letter to the right of the letter.



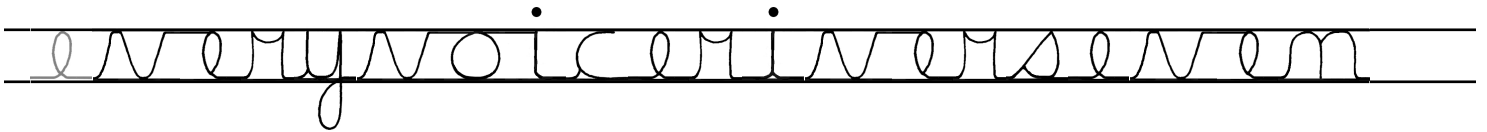
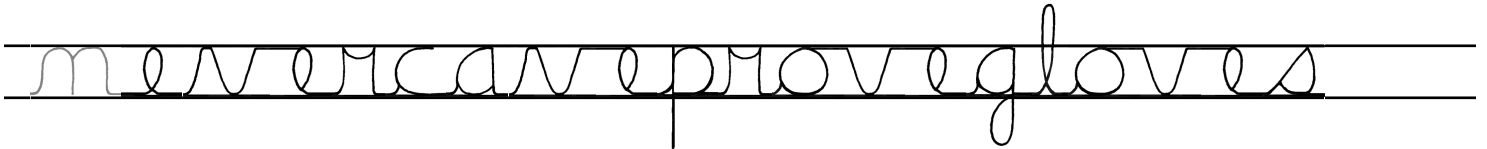
Write "V ran after v." in cursive.



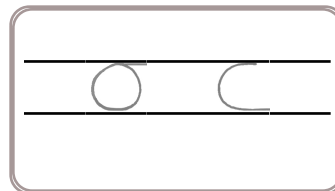
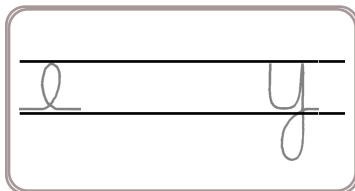
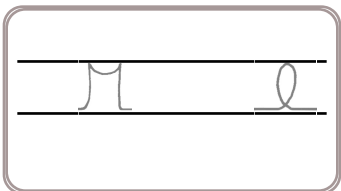
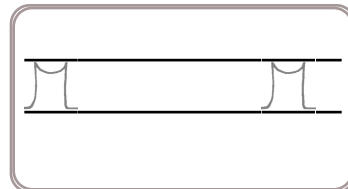
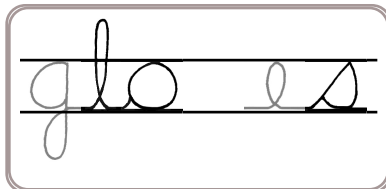
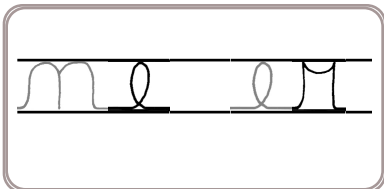
Think of a word that starts with the letter v. Write the word in cursive two times.



Word clues: Search through the words to help with the missing letters in the next section!

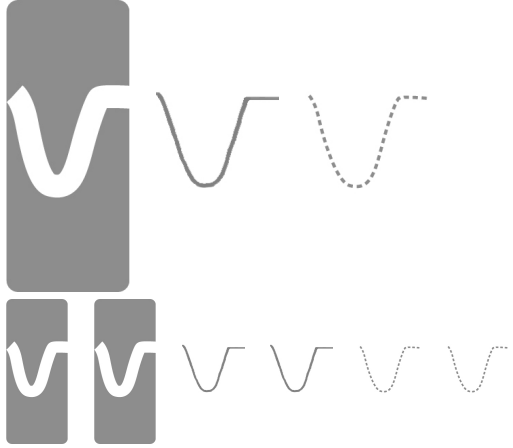


Now fill in the missing letters.





Name: \_\_\_\_\_



v o t e      o t e

$$\begin{array}{r} 86 \\ \times 2 \\ \hline \end{array}$$

$$\begin{array}{r} 61 \\ \times 6 \\ \hline \end{array}$$

Circle the helping verb in the sentence.

I have finished my list of chores.

How many grams are in 6 kilograms?

\_\_\_\_\_ grams

How many digits are in ten times ten?

\_\_\_\_\_

$$\begin{array}{r} 843 \\ - 106 \\ \hline \end{array}$$

Write the missing family fact.

$$73 + 65 = 138$$

$$65 + 73 = 138$$

$$138 - 65 = 73$$

\_\_\_\_\_

Write this as a number in standard form.  
Use a comma in your number.

seven hundred ninety-seven thousand  
three hundred twenty-nine

\_\_\_\_\_

Can 273 be evenly divided by 8? Circle:

273 is divisible by 8

273 is NOT divisible by 8



Name: \_\_\_\_\_

uneasy

uneasy

neasy

neasy

unfair

unfair

nfair

nfair

quest

quest

uest

uest

ugly

ugly

gly

gly

clues

clues

lues

lues

Name: \_\_\_\_\_

Copy each letter to the right of the letter.

w w w w



W W W

Write "W ran after w." in cursive.

\_\_\_\_\_

Weeww is NOT a word. Who cares! Write Weeww in cursive!

\_\_\_\_\_

Word clues: Search through the words to help with the missing letters in the next section!

crow sweep snow towel

grow flow why dew water

Now fill in the missing letters.

cro

de

t e

sm


s e

gr

w y

f o

Name: \_\_\_\_\_



Write one synonym for each of these words.

expose, implore, fragile

---



---



---

$5 \times 12 =$



water ater

Write a letter that has two or more lines of symmetry.

\_\_\_\_\_

Circle the smallest number:

643,807,295      59,382,670

41,065,893,714      8,607,193,245

Which is the smallest?

29.5 ÷ 8.5      29.5 ÷ 8.6      29.5 ÷ 8.7

Circle the digit in the tenths place.

64.97

Insert punctuation marks into this sentence.

My little sister yelled I can't wait for Christmas!

The circus is in town! Tickets are only \$5 for kids. Adults need to pay double the price of kids tickets. Emily is bringing two of her friends in her class. Her mom is also coming. Emily wants to pay for everyone. How much will she need to pay?

Circle the addition property for  $26 + 13 = 13 + 26$ .

associative property  
commutative property

$66 \div 11 =$

word root **tang** can mean **touch****tangible, tangle**

Name: \_\_\_\_\_

uneasy

uneasy

neasy

neasy

unfair

unfair

nfair

nfair

quest

quest

uest

uest

ugly

ugly

gly

gly

clues



clues

lues


lues

Name: \_\_\_\_\_


Copy each letter to the right of the letter.



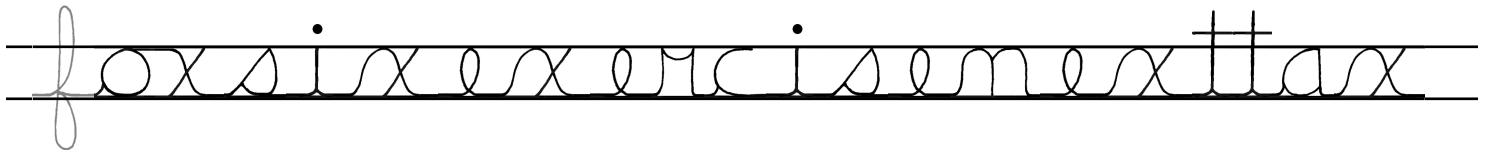
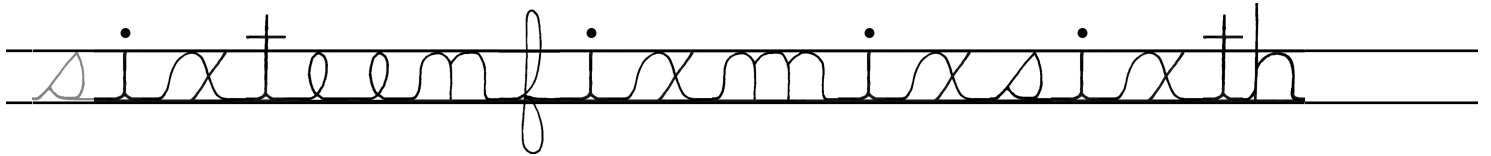
Think of a word that starts with the letter x. Write the word in cursive two times.



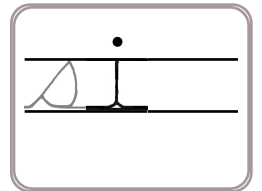
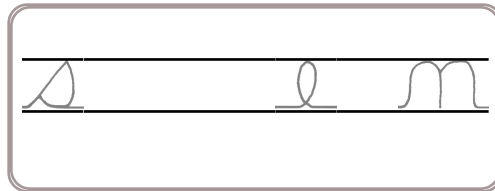
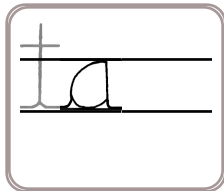
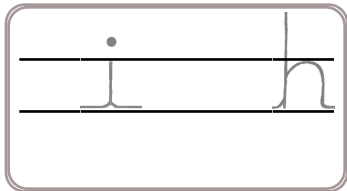
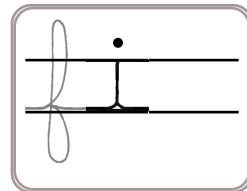
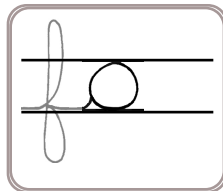
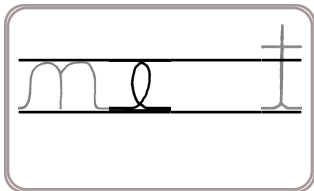
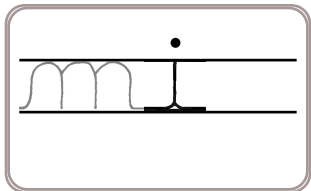
Xooxx is NOT a word. Who cares! Write Xooxx in cursive!



Word clues: Search through the words to help with the missing letters in the next section!


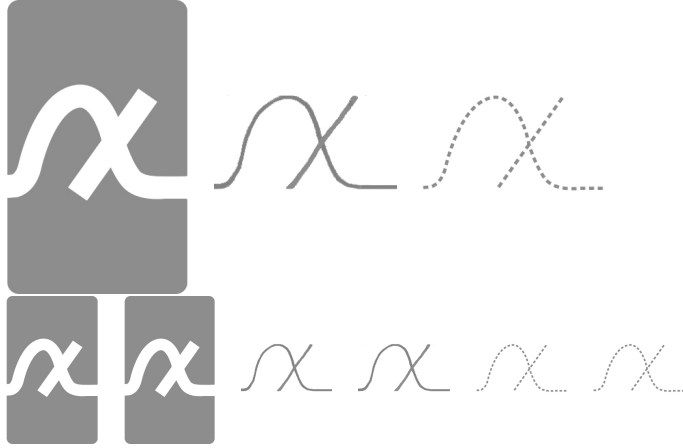


Now fill in the missing letters.



Name: \_\_\_\_\_

Kevin estimated that there are about 86 leaves left on each tree in his yard. There are 7 trees in his yard. About how many leaves are left on the trees?



Ten kids and two adults are going to the circus. Kid's tickets are on sale for only half the price of adult tickets. The total cost is \$80. How much is one kids ticket? How much is one adult ticket?

$$80 \div 10 =$$



Circle the greatest number:

809,624  
13,924,567,087  
7,153  
5,918,432,069

What time is 17 hours after 5:00 a.m.?

\_\_\_\_\_

Rose has two favorite numbers. If you add her favorite numbers, you get 18. If you multiply her favorite numbers, you get 45. What are her mystery numbers?

\_\_\_\_\_

In the number 988,864,807, the digit 9 is in what place?

\_\_\_\_\_

word root **luc** can mean **light**      **translucent, lucidity**

Name: \_\_\_\_\_

uneasy

uneasy

neasy

neasy

unfair

unfair

nfair

nfair

quest

quest

uest

uest

ugly

ugly

gly

gly

clues

clues

lues

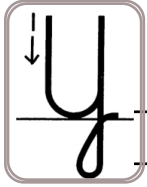
lues



Name: \_\_\_\_\_

Copy each letter to the right of the letter.

y y y y y y y



y y y y y y

Write "Y ran after y." in cursive.

\_\_\_\_\_

Think of a word that starts with the letter y. Write the word in cursive two times.

\_\_\_\_\_

Word clues: Search through the words to help with the missing letters in the next section!

spy family they happy pretty

clay jelly jolly mighty way

Now fill in the missing letters.

wa \_

mi \_ ght

la \_

sp \_


\_ ll \_

\_ ll \_

h y \_

\_ a \_ l \_

Name: \_\_\_\_\_



you \_\_\_\_\_ ou

Write a fraction to represent the situation.

Situation: 9 people want to share 2 soccer balls.

Write a fraction:

This fraction is between what two whole numbers?

between \_\_\_\_\_ and \_\_\_\_\_

$$3 \times 7 =$$

Write an equation to represent this:

The sum of nine and six is fifteen.

\_\_\_\_\_

Wendy wants to call Ava. Ava is on vacation in Asia. It is a time difference of nine hours. Ava's time is always later than Wendy's time. If it is 10:16 A.M. where Wendy lives, then what time is it where Ava is?

\_\_\_\_\_



Write 1,240 in words.

\_\_\_\_\_

$$10 \times 7 =$$

For 2,842,629,711,428, write the digit that is in the ten thousands place.

\_\_\_\_\_

How far do you think it is from your desk to your teacher's desk? Write an estimate of the distance you think it could be.

Name: \_\_\_\_\_

uneasy

uneasy

neasy

neasy

unfair

unfair

nfair

nfair

quest

quest

uest

uest

ugly

ugly

gly

gly

clues

clues

lues

lues

Name: \_\_\_\_\_

Copy each letter to the right of the letter.

z z z z z z z



z z z z z z z

Write "Z ran after z." in cursive.

\_\_\_\_\_

Zuuzz is NOT a word. Who cares! Write Zuuzz in cursive!

\_\_\_\_\_

Word clues: Search through the words to help with the missing letters in the next section!

prize zebra crazy frozen

dozen lizard zigzag zoo fly

Now fill in the missing letters.

li \_ ard

do \_ \_ en

fr \_ \_ \_ en

fl \_ \_


\_ i \_ \_ a \_

\_ \_ \_ a \_ y

\_ \_ \_ oo \_

\_ \_ \_ e \_ \_

Name: \_\_\_\_\_



Write an equivalent fraction with a denominator of 100.

$\frac{5}{10} =$

$\frac{1}{10} =$

$\frac{4}{10} =$

$\frac{7}{10} =$

Which reference material would you consult to find the answer to this question?

How do you pronounce the word frappe?

\_\_\_\_\_

**What Words? Your Words!**

Fill in the boxes with letters to make words. Each box is worth points. Earn points by filling in as many boxes as you can. Sum up the points you earn for each word.

**Make a Word****Sum**

1	2	4	6	8	12	18
Q	U	A	L	I	T	Y

**33**

1	2	4	8	12	18	24
	U					

1	2	4	6	12
R	E			

1	2	4	6	10	14
C	E				

**Make a Word****Sum**

1	2
F	I

1	2	4	8	14
S	C			

1	2
S	U

1	2	4	6	8	12	18
	I					

Write a letter that has a line of symmetry.

\_\_\_\_\_



Name: \_\_\_\_\_

uneasy

uneasy

neasy

neasy

unfair

unfair

nfair

nfair

quest

quest

uest

uest

ugly

ugly

gly


gly

clues

clues

lues

lues





It's NO PREP  
at edHelper.




**edHelper.com!**

**only \$19.99  
per year**

More  
history!



More  
science!



New  
ideas!



More  
puzzles!

