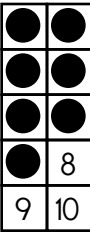
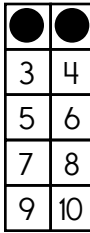
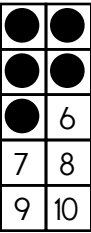
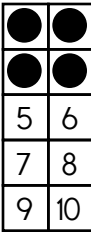

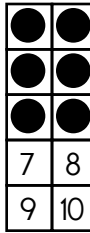



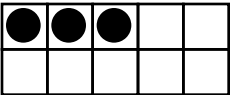
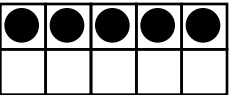
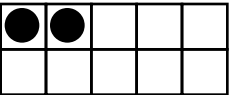
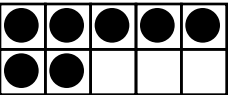










Name: _____

 <u>7</u>	<table border="1"> <tr><td>●</td><td>2</td></tr> <tr><td>3</td><td>4</td></tr> <tr><td>5</td><td>6</td></tr> <tr><td>7</td><td>8</td></tr> <tr><td>9</td><td>10</td></tr> </table> _____	●	2	3	4	5	6	7	8	9	10	 _____	 _____	 _____	 _____	 _____	 _____	 _____
●	2																	
3	4																	
5	6																	
7	8																	
9	10																	

 <u>10</u>	 _____	 _____	 _____	 _____
--	--	--	---	--

 <u>1</u>	 _____	 _____	 _____
---	---	--	---

 <u>6</u>	 _____	 _____	 _____
---	--	---	--











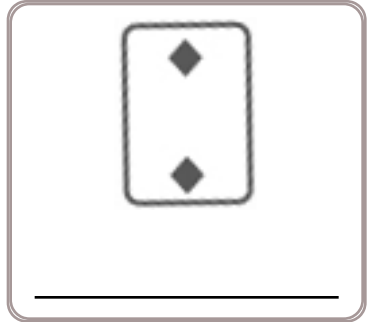
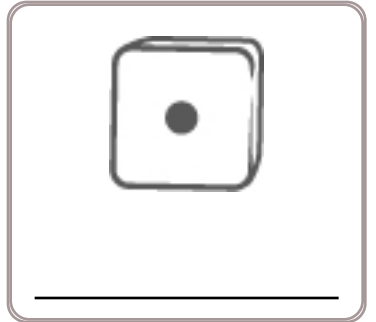


 <u>4</u>	 _____	 _____	 _____
---	--	---	--



Name: _____

Get a fidget spinner! Spin it.

I needed to spin _____ time(s) to finish.





Name: _____

Get a fidget spinner! Spin it.

I needed to spin _____ time(s) to finish.

How much is this?



How many?

12, 14, 16, 18, 20, _____, 24,
26

17, _____, _____, 20, _____, 22

Which number should
replace the first blank?

Circle the third letter.

8, R, 9, A, D, 6, B, 6, X,
7, Z, 1, 9, F, 4, D, 5, Z19, _____, _____, 22, _____, 24,
_____Which number should
replace the first blank?

Circle the odd numbers.

4 92 43

6 39 11

95 427 188

Write these numbers in
order from smallest to
largest.

7, 14, 11

_____, _____, _____

Adam needs thirteen cents.
How much more money
does he need?

How many dots on the bug?



How many?

Circle all the ways to make
5.

1 + 4	4 + 3	3 + 2
2 + 4	2 + 2	1 + 5
3 + 1	2 + 1	3 + 3

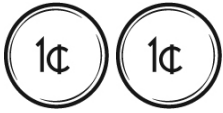


Name: _____

Spin again.

I needed to spin _____ time(s) to finish.

How much is this?



How many?



Circle the fifth number.

R, X, 5, B, 4, 4, D, A, 4,
9, 3, Z, F, F, 1, 8, X, 9, ZE, G, _____, K, M, O, Q,
S, U, W, Y

What is ten more than 56?

C, H, M, _____, W

5, _____, 1, 5, 5, 1, 5, 5, 1,
5, 5, 14, 5, 3, 4, 5, 3, _____, 5,
3, 4, 5, 3, 4Anne is reading book 3 of
the My Club series. There
are 8 books in the series.
After she finishes book 3,
how many more books will
she read to finish the
series?

What is ten less than 65?

15, 17, 19, 21, 23, _____, 27,
29, 31

$$6 + 2 = \underline{\quad}$$

$$7 + 2 = \underline{\quad}$$

Name: _____

Use the code to fill in the spelling of each week day.

S U N DAY

* ? DAY

. ✕ ✓ ★ DAY

♠ ✓ ! ◆ ✓ ★ DAY

. ▲ ✕ ✱ ★ DAY

♠ ✱ X DAY

★ ☾ . ✕ ✱ DAY



☾ = A

! = D

✓ = E

♠ = F

▲ = H X = I

✱ = M ◆ = N

? = O ✱ = R


★ = S

. = T

✕ = U

♠ = W

Name: _____




Circle only the
whole cookies.

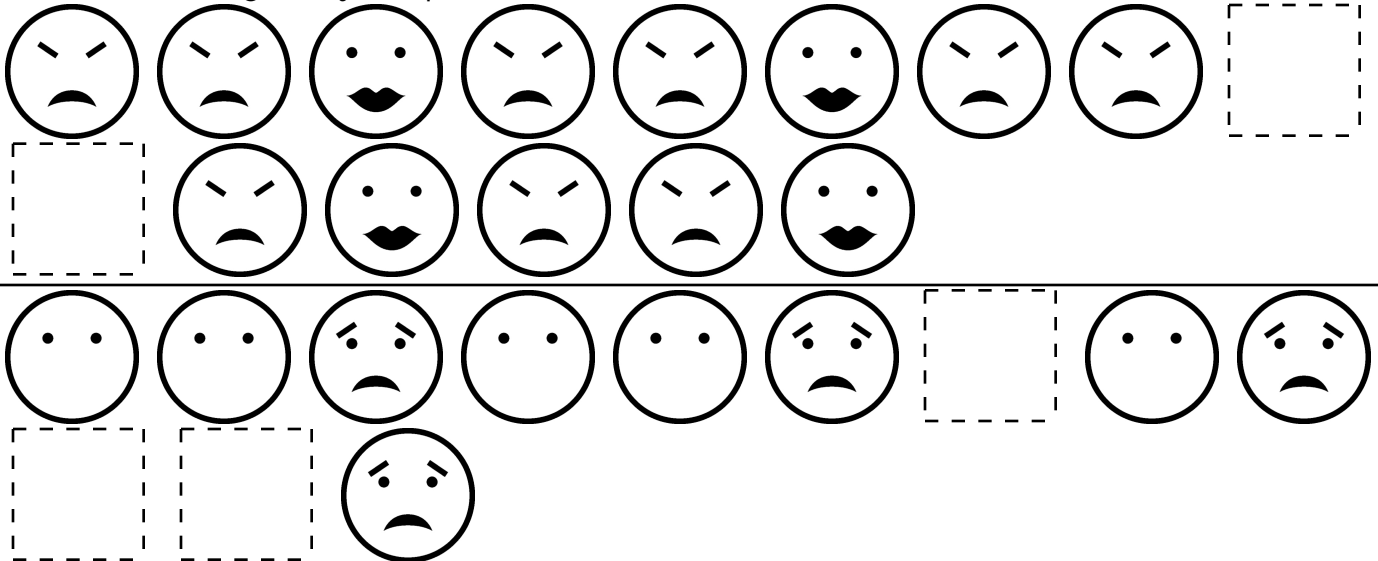


Name: _____

Draw the missing emojis. Explain the rule.



Draw the missing emojis. Explain the rule.



Name: _____



edHelper

Look at the monster pattern. Draw the missing monster.



1



2



1



2



1



2



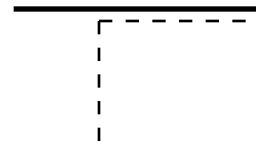
1



2



1



Complete the pattern.

S

G

S

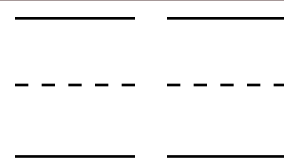
G

S

G

S

G



Start from 1. Count by 1.



1



1 + 1



1 + 2



1 + 3



1 + 4



1 + 5



1 + 6

$1 + 4 = \underline{\quad}$

$1 + 1 = \underline{\quad}$

$1 + 2 = \underline{\quad}$

7 is more than

☐ 8

☐ 6

☐ 7

Write the missing sign.

$7 \underline{\quad} 3 = 10$

Name: _____



edHelper

Color in the month that comes before March.

January	February	March	April
May	June	July	August
September	October	November	December

Write the beginning letter.

h



q

s

___leep

r



s

v

___quirrel

s



r

g

___how


t t s j h u r t
f u u u t t a n
i g o t z h m i
n d u d r i n k
w o u l d p u t
g q n e a t u u

i z c v a g
h a v e e z
e a e f g h
e e x t a n



7 + 5

have

8 - 1



___ : __ 00



Name: _____



edHelper

Complete the pattern.

1	2	3	4	5	6	7	<u> </u>
---	---	---	---	---	---	---	-------------------

4	8	12	16	20	24	28	<u> </u>
---	---	----	----	----	----	----	-------------------

5	10	15	20	25	30	35	<u> </u>
---	----	----	----	----	----	----	-------------------

3	6	9	12	15	18	21	<u> </u>
---	---	---	----	----	----	----	-------------------

Complete the pattern.

2	4	6	8	10	12	<u> </u>	<u> </u>
---	---	---	---	----	----	-------------------	-------------------

15	18	21	24	27	30	<u> </u>	<u> </u>
----	----	----	----	----	----	-------------------	-------------------

8	12	16	20	24	28	<u> </u>	<u> </u>
---	----	----	----	----	----	-------------------	-------------------

Name: _____



edHelper

Complete the pattern.

20	25	30	35	40			
----	----	----	----	----	--	--	--

6	8	10	12	14			
---	---	----	----	----	--	--	--

4	5	6	7	8			
---	---	---	---	---	--	--	--

10	15	20	25	30			
----	----	----	----	----	--	--	--

Complete the pattern.

6	8	10	12	14			
---	---	----	----	----	--	--	--

5	6	7	8	9			
---	---	---	---	---	--	--	--

15	18	21	24	27			
----	----	----	----	----	--	--	--

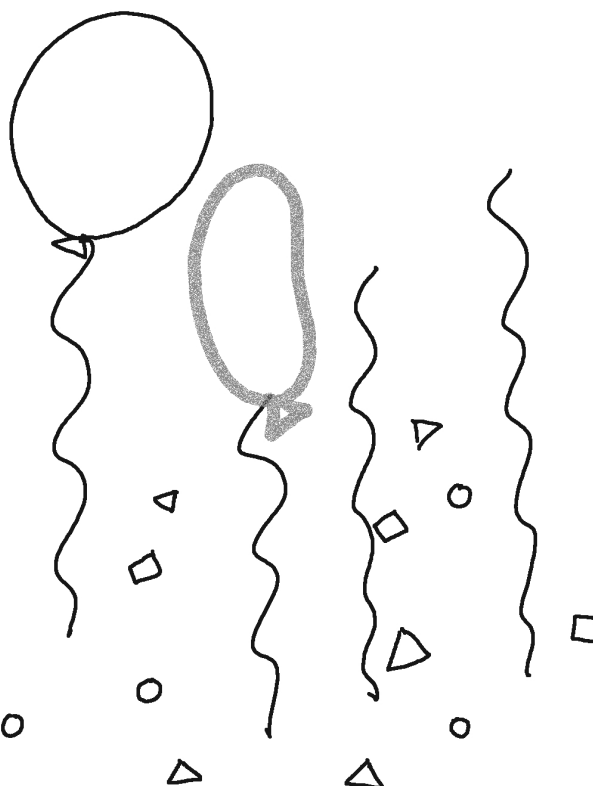



Name: _____



edHelper

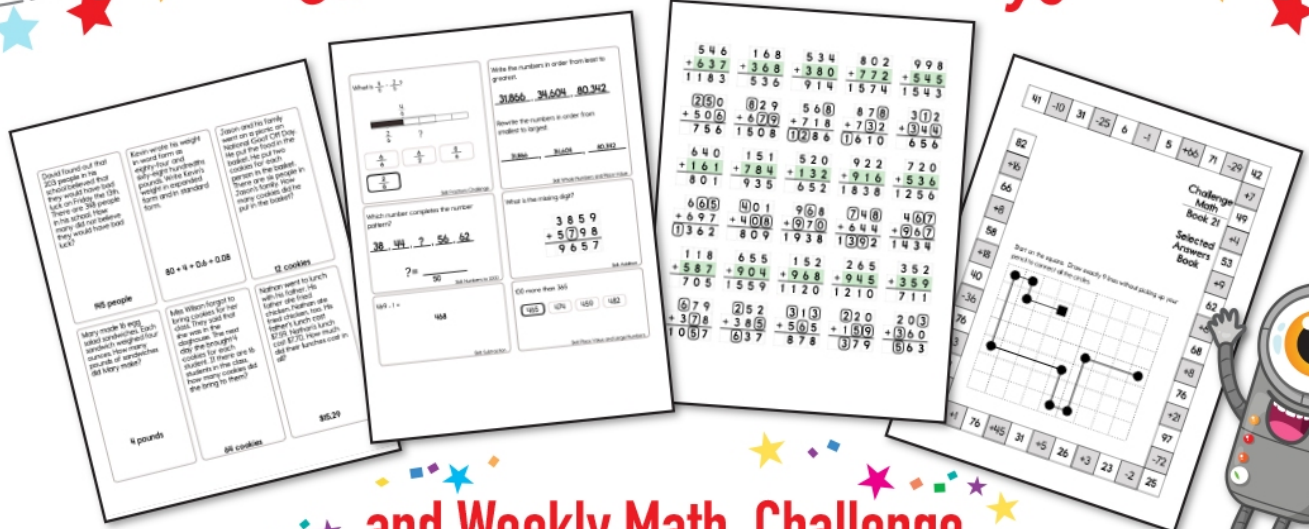


Clock




©edHelper


Subscribe to Get Answer Keys



and Weekly Math, Challenge Workbooks, Posters, Daily Reading, and so much more!



SUBSCRIBE TO RECEIVE EVEN MORE
Answer Keys • Effective Activities • Access
to as many printables as you need!





It's NO PREP at edHelper.

More history!



edHelper.com!



New online math games!



New ideas!



More science!



More puzzles!



