



My Name: _____

Pick 8 to do:

- ☐ page 1
- ☐ page 2
- ☐ page 3
- ☐ page 4
- ☐ page 5
- ☐ page 6
- ☐ page 7
- ☐ page 8
- ☐ page 9

Skip 1 Page!



Name: _____

☐ I did page 1

edHelper

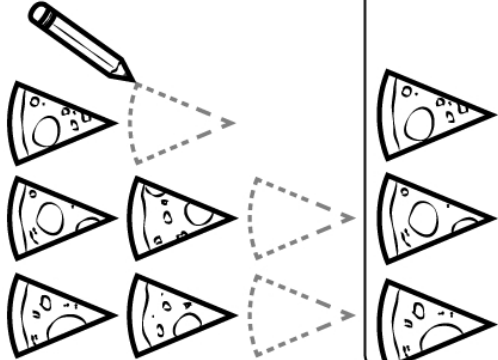
Put the pepperoni in order to unjumble the sentence.



1 2 3 4 5 6 7 8 9 10
i l z z e v p a i o

Do you love pizza?
☐ Yes ☐ No

Draw slices to equal a whole pizza:

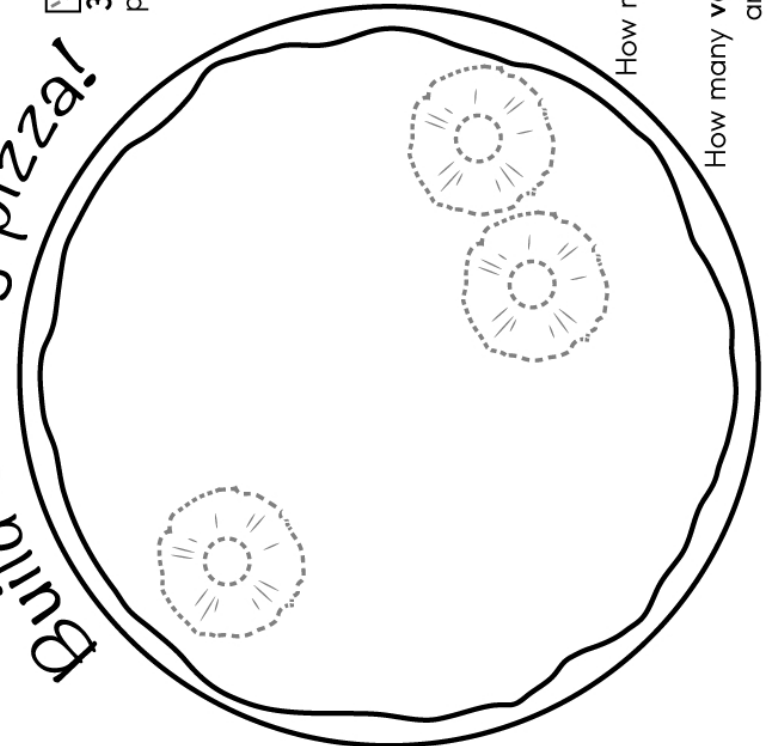


Draw the ingredients on the pizza:



- ☐ 3 pieces of pineapple
- ☐ 5 pieces of pepperoni
- ☐ 8 pieces of sausage
- ☐ 4 pieces of onion
- ☐ 2 pieces of mushroom
- ☐ 6 pieces of green pepper

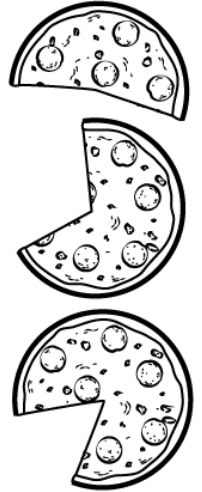

Build a tasty pizza!



How many pieces of **meat** are on the pizza? _____

How many **vegetable** pieces are on the pizza? _____

Match:



Name: _____

☐ I did page 2

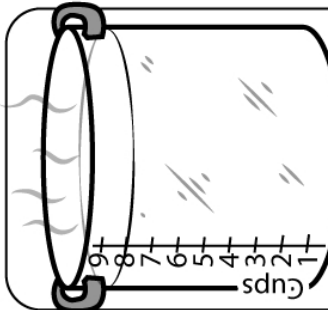
edHelper



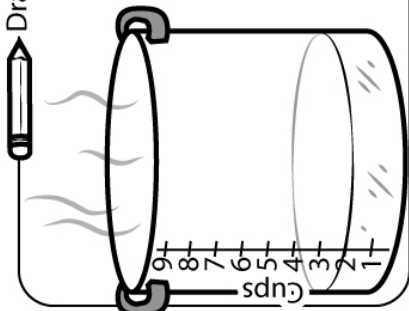
How many bowls of soup can you fill with Mother Teresa's pots?



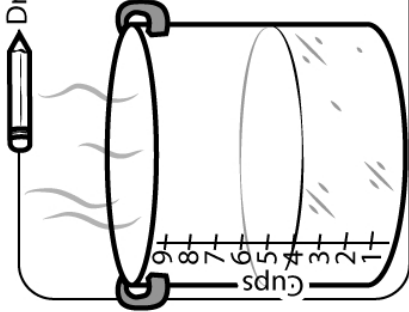
= 2 Cups



Draw the soup bowls:



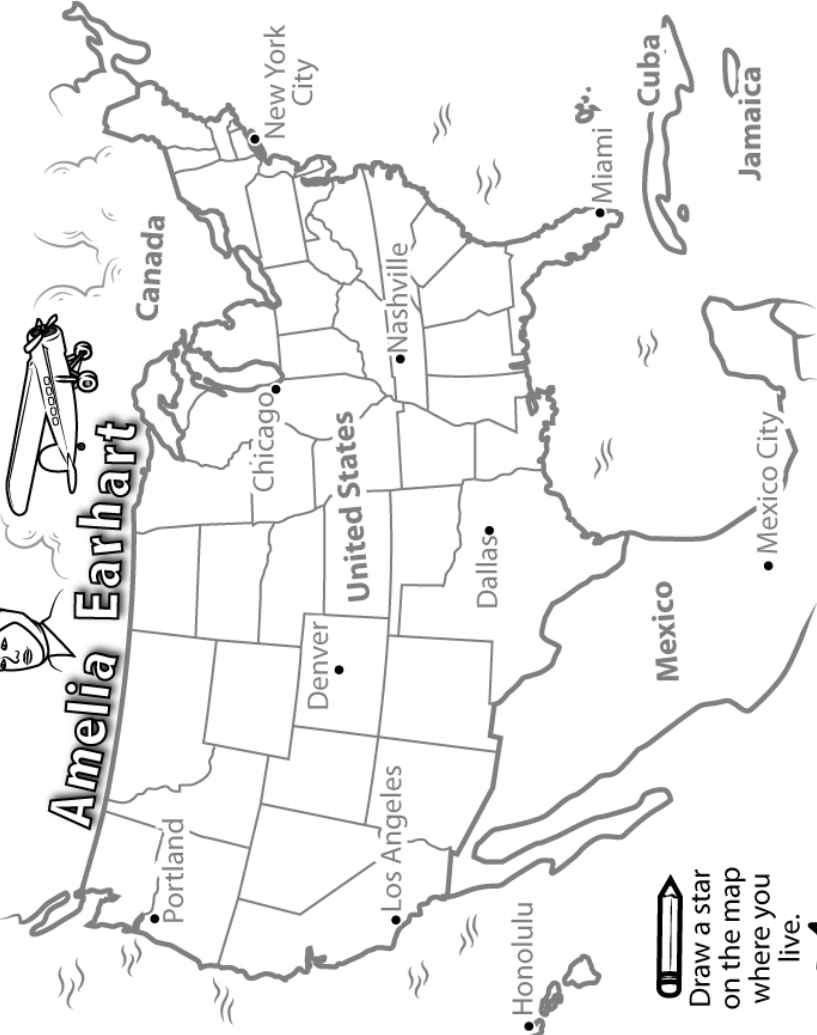

Draw the soup bowls:



Draw the soup bowls:

Make sure each school girl has all of her school supplies: Draw the missing supplies.

Malala Yousafzai



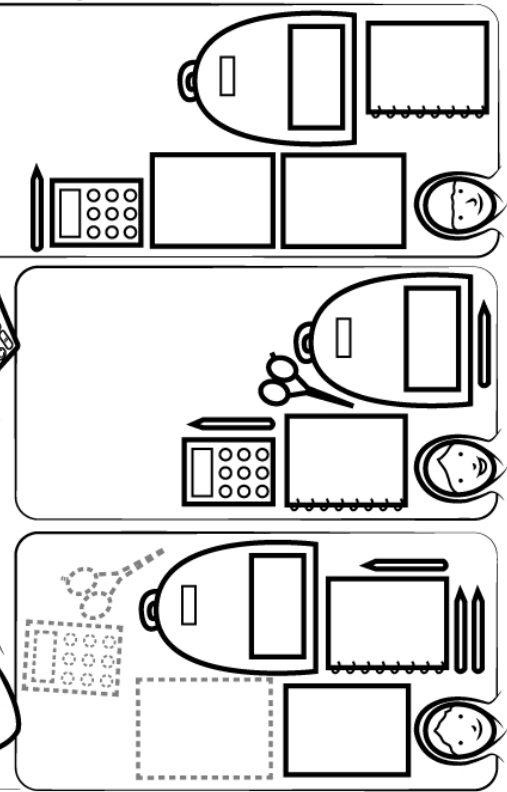
Amelia Earhart

Draw a star on the map where you live.



Draw the route on the map:

Honolulu → Los Angeles → Mexico City → New York City



Name: _____

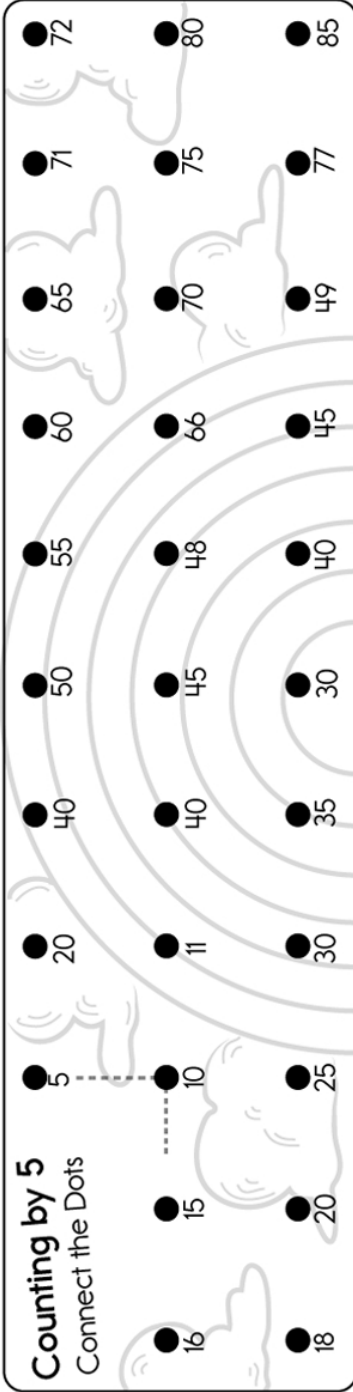
☐ I did page 3

edHelper



★ Use crayons or colored pencils.

Counting by 5
Connect the Dots



START

The color of the sun:

Example: grey

Color white and black:

Color white: + Color black: =

Color red and blue:

Color red: + Color blue: =

Color yellow and blue:

Color yellow: + Color blue: =

Color red and yellow:

Color red: + Color yellow: =

The color of the sky:

The color of the grass:

The color of a tomato:

The color of a carrot:

The color of an eggplant:

END

Name: _____

☐ I did page 4

edHelper

Ben had twenty cookies.
He gave eighteen away.
How many are left?



Show your
work.

Describe what a
leprechaun looks like.



Sort these words
into categories.

dog banana
juice hamster
sandwich milk

Foods

Drinks

Pets

Fill in the
missing numbers.



134 136

 138

140

Josh picked five clovers. Soon he
picked eight more. How many
clovers in all?

Show your
work.



Name: _____

☐ I did page 5

edHelper

Circle the correct word.


I am _____ it now. watched watching

I _____ that before. watches watched

She _____ that
show every day.
watching watches








Fill in the season.



In _____ the
sun sets earliest.

In _____ the
sun sets latest.

Connect each critter
to its home.



Match each form of matter
to its picture.



gas



solid



liquid

Name: _____

☐ I did page 6

edHelper

across →



___e___

down ↓



sk___

1.		3.		
2.				



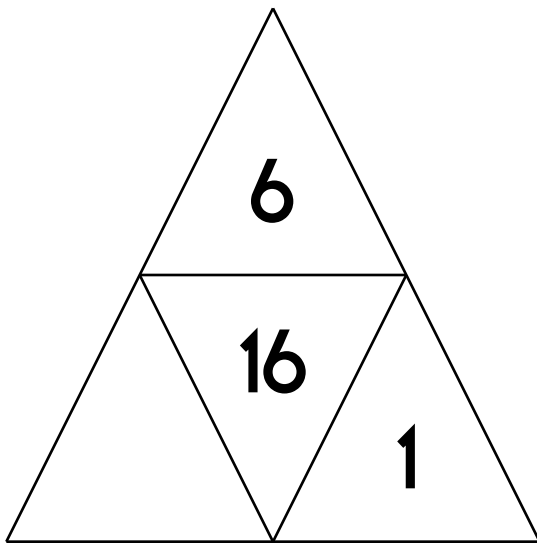
___im



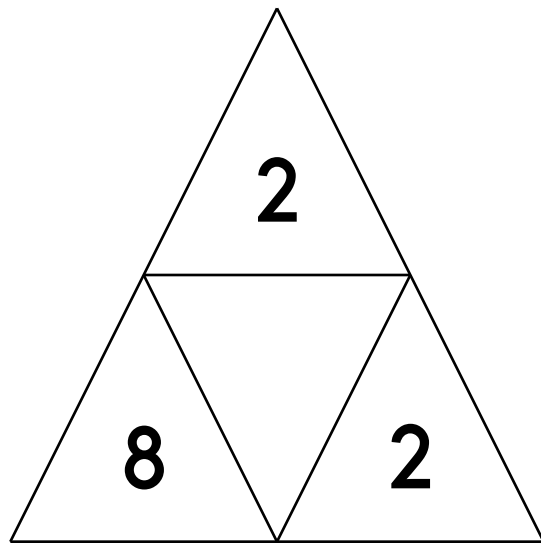
___i___

The number in the middle is the sum of the other three numbers.
Fill in the missing numbers.

Triangle Sums




$$6 + \underline{\quad} + 1 = 16$$



$$2 + 8 + 2 = \underline{\quad}$$

across →



___w___

down ↓



d___g

1.		3.		
2.				



___ff



___d

5 is more than

○ 4 ○ 6 ○ 5

5 tens and 9 ones

○ 95 ○ 59 ○ 950

1 + 9 = _____

○ 10 ○ 7 ○ 6

$$7 + 7 = \boxed{\quad}$$

$$3 + 8 = \boxed{\quad}$$

$$7 + 2 = \boxed{\quad}$$

$$2 + 8 = \boxed{\quad}$$

$$8 + 9 = \boxed{\quad}$$

$$9 + 7 = \boxed{\quad}$$

Name: _____

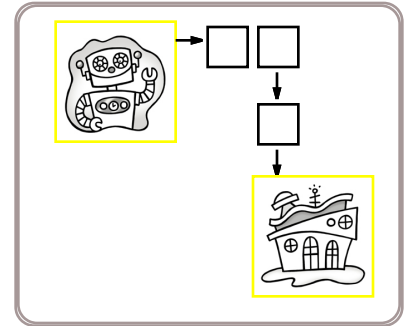
☐ I did page 7

edHelper

Secret map:

```
print robot()  
go right ( 2 )  
go down ( 1 )  
print robot home()
```

Draw the map:




Robot moved 3 squares.

Secret map:

```
print robot()  
go right ( 2 )  
go down ( 1 )  
print robot home()
```

Draw the map:




Robot moved ____ squares.

Secret map:

```
print robot()  
go right ( 3 )  
go down ( 2 )  
print robot home()
```

Draw the map:



Robot moved ____ squares.

Name: _____


☐ I did page 8

edHelper

Secret map:

```
print robot()
go right ( 2 )
go down ( 2 )
print robot home()
```

Draw the map:



Robot moved ____ squares.

Secret map:

```
print robot()
go right ( 3 )
go right ( 1 )
go down ( 2 )
go down ( 1 )
go down ( 1 )
print robot home()
```

Draw the map:



Robot moved ____ squares.

fourteen

twenty-one

$$14 + 1 = \underline{\hspace{2cm}}$$



Name: _____


☐ I did page 9

edHelper

Secret map:

```
print robot()  
go down ( 1 )  
go down ( 1 )  
go down ( 2 )  
print robot home()
```

Draw the map:




Robot moved ____ squares.

Secret map:


```
print robot()  
go right ( 3 )  
go down ( 1 )  
go down ( 2 )  
print robot home()
```

Draw the map:

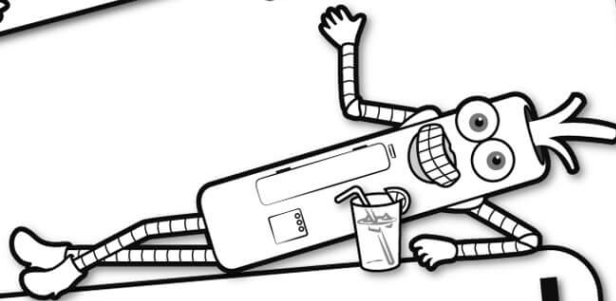


Robot moved ____ squares.






It's NO PREP
at edHelper.




edHelper.com!

**only \$19.99
per year**


More
history!



More
puzzles!



More
science!



New
ideas!



Things for the
classroom!

