


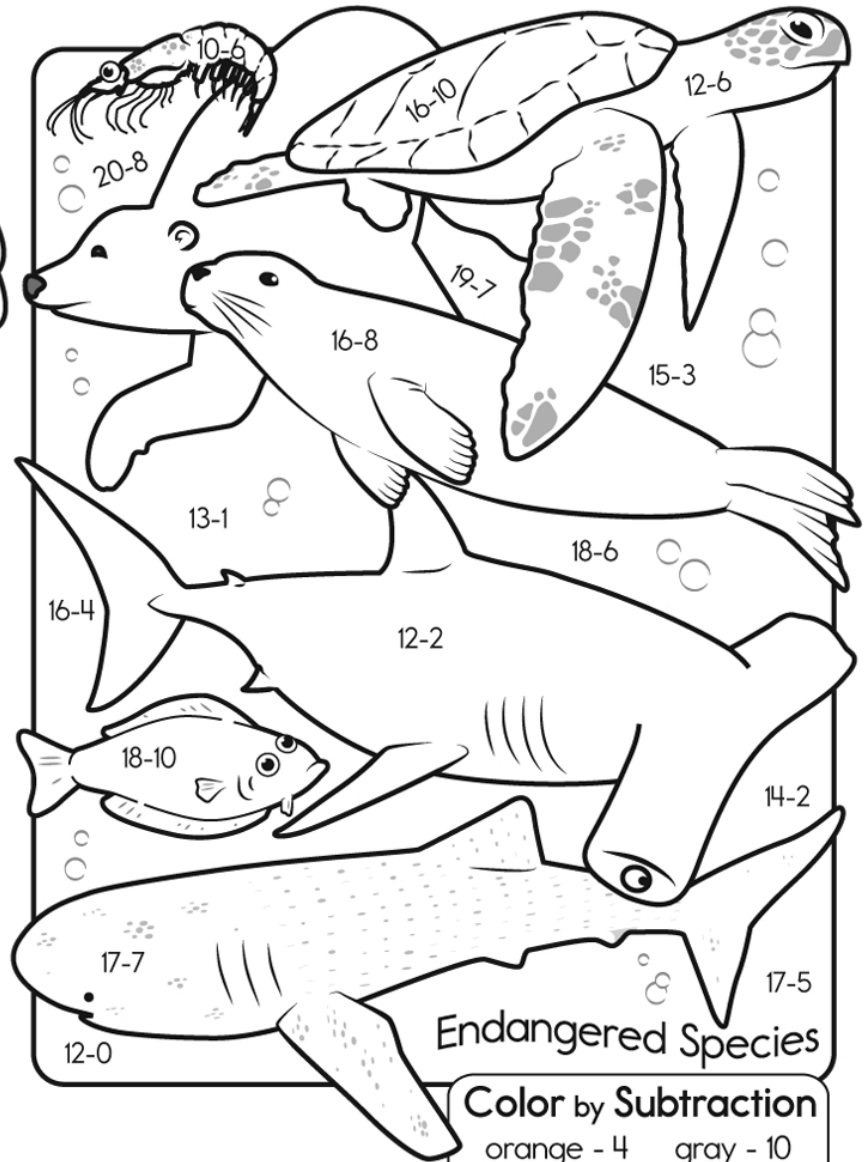



Name: _____

Add the Manatees



Counting by Hundreds



Endangered Species

Color by Subtraction

orange - 4	gray - 10
green - 6	blue - 12
brown - 8	

Draw this Equation

The penguin has 12 fish.

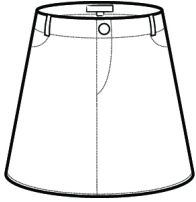
She eats 9.

How many does she have now?



Name: _____

The first letter is ...



kirt



air



ak



ook

10

en



ult




et



eep



ar



amp



ound



ice

Name: _____

Color by Code

(Addition)

$10 =$ (Blue)

$5 =$ (Purple)

$9 =$ (Pink)

$6 =$ (Red)

$11 =$ (Orange)

$4 =$ (Gray)

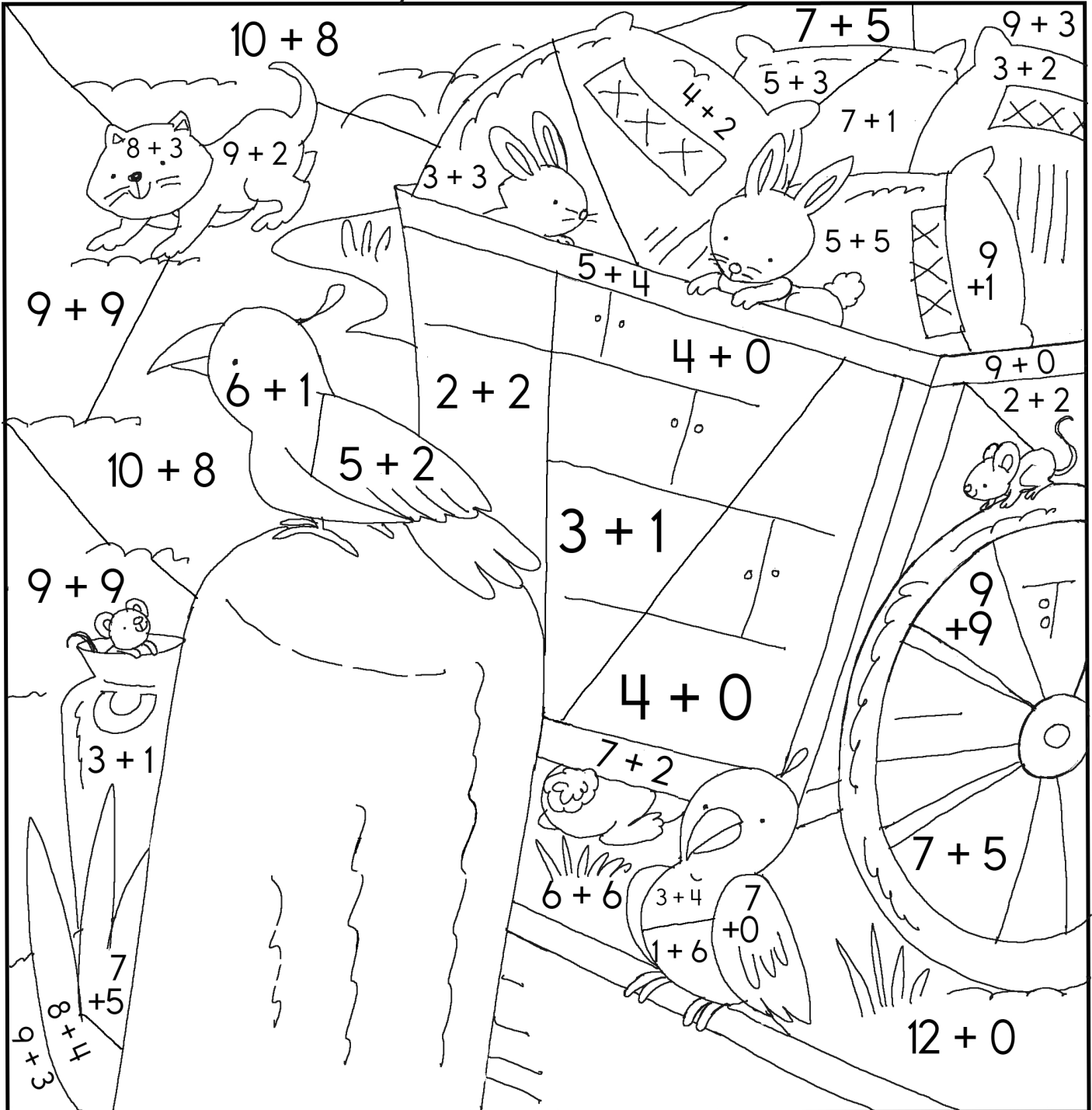
$8 =$ (Yellow)

$12 =$ (Green)

$18 =$ (Brown)

$7 =$ (Black)





All blank areas are your choice.



©edHelper

Name: _____

Thanksgiving dinner is at noon. Draw a box around the clock that shows that time.



Write the first part of
this sentence.

so I couldn't
possibly eat
another
bite.



Fill in the blanks using each
"blend" set once.

th dr st sp

___ hankful

___ poon

___ umstick

___ uffed

Name: _____

Amy has 2 younger sisters. Amy decides to give 2 stuffed animals to each of her 2 younger sisters. After she does this, Amy still has 9 stuffed animals left. How many stuffed animals did Amy start out with?

Ten minus three is _____.

_____ is four less than eight.


Amy bought 13 treats for her dog at the pet store. After 13 days she only has 5 treats left. Assuming her dog ate the ones missing, how many treats has her dog eaten?

Max is playing MudVille, a fun new game. He has 8 coins. He wants to buy as many Power Bursts as he can. Each Power Burst costs 4 coins. What is the largest number of Power Bursts that Max can buy?


Sara is playing MudVille, a fun new game. She has 7 coins. After she went to the MudVille shop to buy stuff, she had 5 coins left. Can you figure out how many coins she spent at the store?

Name: _____

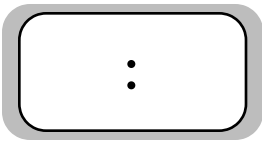
The time is eleven five.
Write the time on the clock.



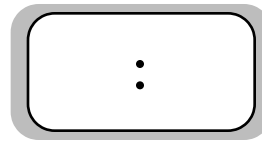
The time is one fifty-five.
Write the time on the clock.



The time is ten o'clock.
Write the time on the clock.



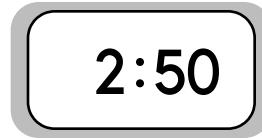
The time is twelve minutes after eight.
Write the time on the clock.



Write the time in words.



Write the time in words.



Write a.m. or p.m.

Fifty-five minutes after seven in the morning. _____

Twenty minutes before midnight. _____

Write something you might be doing between five a.m. and seven a.m.

Write a.m. or p.m.

Nine twenty in the evening. _____

Ten minutes after noon. _____

Write something you might be doing between seven p.m. and nine p.m.


Subscribe to Get Answer Keys



and Weekly Math, Challenge Workbooks, Posters, Daily Reading, and so much more!



SUBSCRIBE TO RECEIVE EVEN MORE
Answer Keys • Effective Activities • Access
to as many printables as you need!



edHelper.com



It's NO PREP at edHelper.

More history!



edHelper.com!



New online math games!



New ideas!



More science!



More puzzles!

