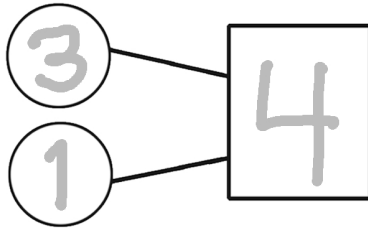



Name: _____

Fill in the blanks, addition fact, and number bond.


Example:

3 cupcakes are on a tray.1 cupcake is on a plate.

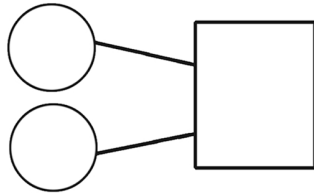
$$3 + 1 = 4$$

There are 4 cupcakes here.


This garden has _____ tulips.



This garden has _____ daisies.

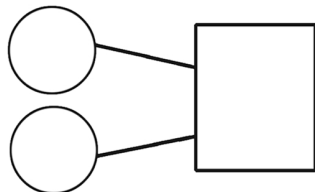


There are _____ flowers altogether.



I found _____ lizards.

I found _____ turtles.





I found _____ reptiles in the pond.


Name: _____

Use the counting chains to help you.


Example:




_____ is 2 more than 8.



_____ is 5 more than 1.




_____ is 3 more than 6.



_____ is 2 more than 1.

Name: _____

Fill the number inside the 

Example:

3 more
than 1

$1 + 3$

4

2 more
than 8

$8 + 2$

3 more
than 6

$6 + 3$

5 more
than 4

$4 + 5$

3 more
than 4

$4 + 3$

1 more
than 9

$9 + 1$

©edHelper

Name: _____

2 more than 7 is _____.

5 more than _____ is 8.

_____ more than 6 is 9.

Hannah has some squishies. She decided to give one of them to Mary. She also gave two squishies to Anna. She still has five squishies left.

How many squishies did Hannah have before giving any away?

If you add 6 to a secret number, the answer is 10.

What is the secret number?

PREVIEW

Join [edHelper.com](https://www.edHelper.com) for full access.

game and can't stop playing each other. It is so much fun! So far today they have played five games against each other. Most of the games were close, but Anna has won more games than Hunter.

How many games do you think Hunter and Anna each won?

Hint: There is more than one correct answer.

World where she takes care of pets. Rose has too many pets! So she decided to give 7 of them away. She gave some to Jenna and some to Pam. Jenna got 3 more pets from Rose than Pam did.

How many pets did Rose give Jenna?

How many pets did Rose give Pam?

Name: _____

Read the sentences. Count the ✓✓. Fill in the blanks.

Jayne has 2 big dolls. She has 1 small doll.

✓	✓	✓							
---	---	---	--	--	--	--	--	--	--

$2 + 1 = \underline{\quad}$

Jayne has _____ dolls.

Liam caught 4 northern. He caught 5 bass.

--	--	--	--	--	--	--	--	--	--

PREVIEW

Join edHelper.com for full access.

Troy has 1 tennis ball. He has 7 softballs.

✓	✓	✓	✓	✓	✓	✓	✓		
---	---	---	---	---	---	---	---	--	--

$1 + 7 = \underline{\quad}$

Troy has _____ balls altogether.

Mia has 3 caramels. She bought 4 taffies from the store.

✓	✓	✓	✓	✓	✓	✓			
---	---	---	---	---	---	---	--	--	--

$3 + 4 = \underline{\quad}$


Mia has _____ pieces of candy total.

©edHelper

Name: _____

Use the picture groups to finish the number bonds.


Example:



2

4

6



4

2

6

$$2 + 4 = 6$$

$$4 + 2 = 6$$

$$2 + 4 = 4 + 2$$


PREVIEW

Join edHelper.com for full access.

$$8 + 1 = 9$$

$$1 + 8 = 9$$

$$8 + 1 = 1 + 8$$



$$5 + 4 = 9$$

$$4 + 5 = 9$$

$$5 + 4 = 4 + 5$$

Name: _____

Follow the directions to find Billy's special ball.

- * Scribble out two numbers that total 6.
- * Scribble out two numbers that are the same.
- * Scribble out two numbers that total 7.
- * Scribble out the number that is the sum of $9 + 1$.







PREVIEW

Join edHelper.com for full access.

Billy's special ball has the number _____ on it.


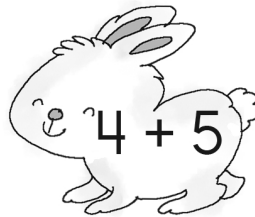






Name: _____

Help Big Rabbit find and color his bunnies.
They will have addition facts that match the
number sum on him.

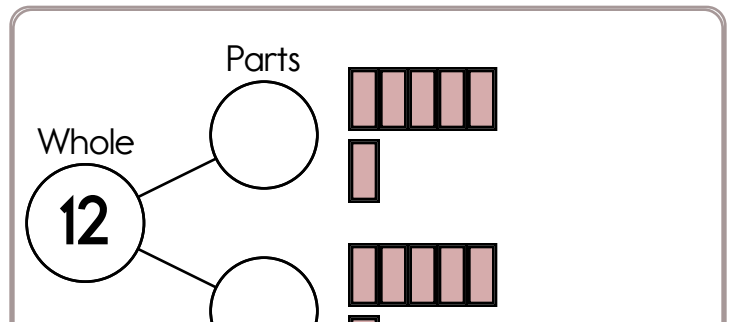
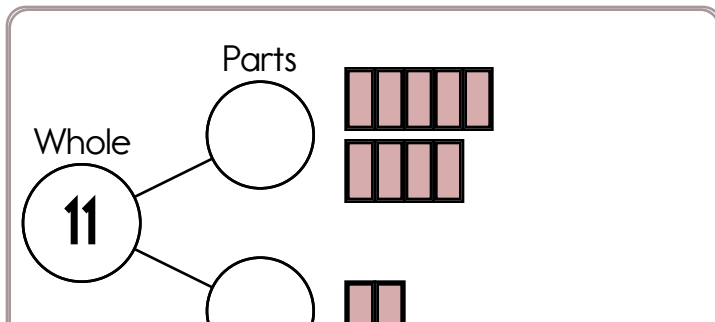
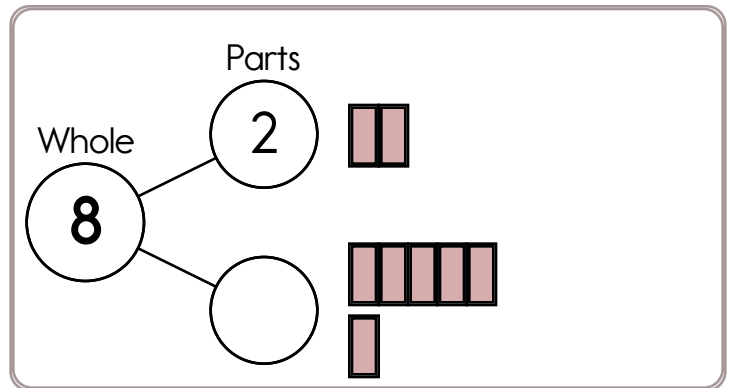
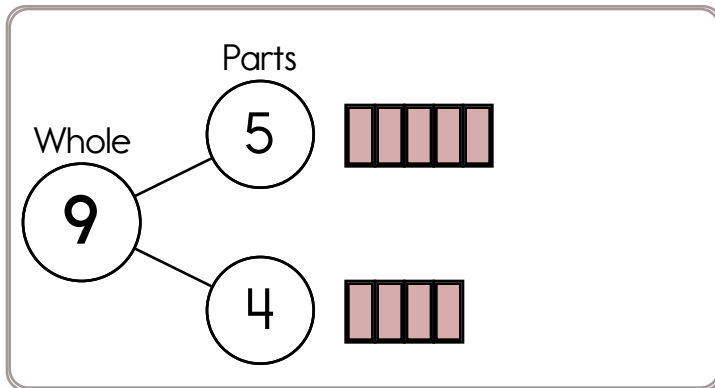


PREVIEW

Join edHelper.com for full access.

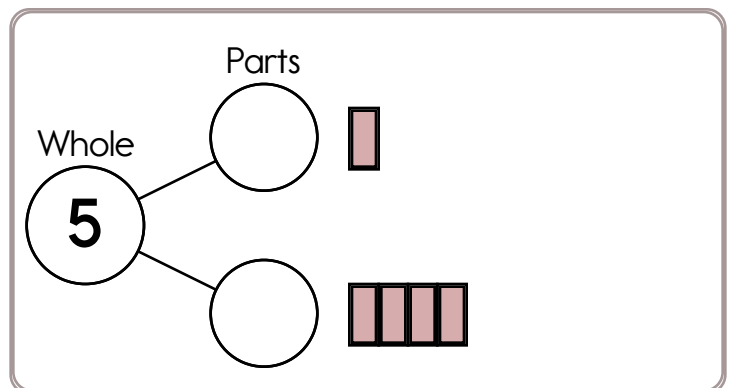
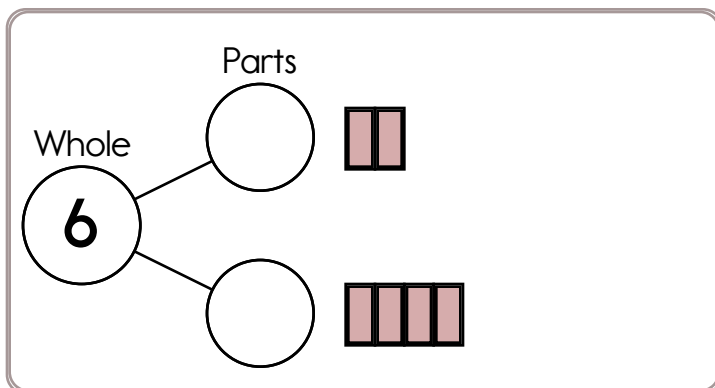
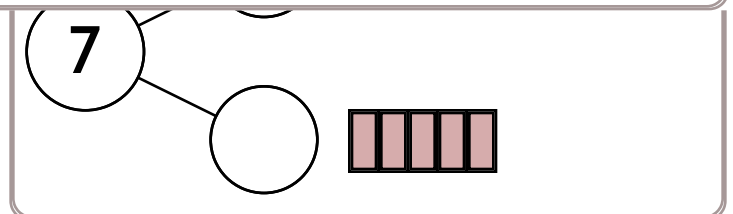
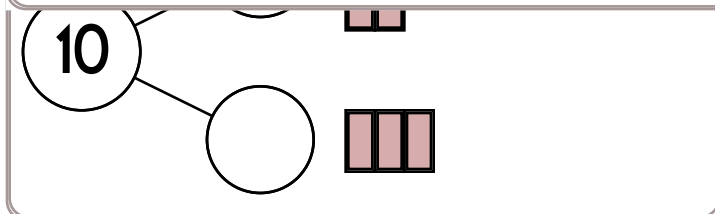


Name: _____



PREVIEW

Join edHelper.com for full access.



Name: _____

☒ $8 + 5 = 13$

☐ $6 + 4 = 10$

☐ $1 + 3 =$

☐ $5 + 7 =$

☐ $3 + 3 = 6$

☐ $3 + 2 = 5$

☐ $4 + 5 = 9$

☐ $1 + 8 = 9$

☐ $7 + 9 = 16$

3	5	1	9	9	5	25	5	11	10	3	4	2	7	14	5
8	6	7	3	16	4	7	$3 + 3 = 6$	4	7	6	4	4	3		
13	3	6	12	4	13	2	2	3	12	13	4	1	13	2	13
8	5	6	11	8	12	4	11	5	8	24	12	2	10	8	1
2	$7 + 9 = 16$	19	8	11	1	4	11	3	13	10	7	2	1		
2	4	$1 + 8 = 9$	17	17	6	5	12	5	6	7	7	11	12		
2	12	7	8	3	3	1	1	5	6	3	3	3	7	7	18
6	28	3	2	10	7	12	1	13	11	14	26	2	11	9	6
10	4	6	4	12	6	12	5	2	11	9	16	10	4	1	3
16	6	$4 + 5 = 9$	9	5	17	3	$3 + 2 = 5$	8	26	6	10				
9	12	1	$8 + 5 = 13$	1	6	2	7	2	2	8	10	2	9		
5	2	12	15	5	2	4	21	19	12	6	1	2	6	5	3

Write
operation.

PREVIEW

Join edHelper.com for full access.

☐ $6 + 9 =$

☐ $3 + 7 = 10$

☐ $7 + 1 =$

☐ $2 + 2 =$

☐ $5 + 8 =$

☐ $2 + 1 = 3$

☐ $9 + 7 =$

☐ $6 + 4 = 10$

☐ $1 + 8 = 9$

☐ $2 + 3 = 5$

8	3	8	28	$2 + 7 = 9$	9	6	3	15	9	8	7	10	1		
4	6	3	11	18	7	3	1	15	8	5	4	2	1	2	14
3	14	2	3	7	13	5	7	13	7	8	9	4	2	9	6
7	3	9	$2 + 3 = 5$	1	3	9	8	7	13	23	5	16	2		
7	2	9	7	3	1	5	$3 + 7 = 10$	17	27	2	$6 + 4 = 10$				
21	5	2	8	7	1	6	7	2	9	5	8	7	23	4	4
16	10	4	9	9	22	8	27	1	1	9	5	14	4	7	9
4	$2 + 1 = 3$	17	2	5	6	3	8	7	11	3	1	7	9		
9	5	1	15	8	9	10	8	9	18	1	22	2	2	0	1
2	7	14	2	13	1	20	2	13	15	2	10	13	2	6	2
2	2	16	$1 + 8 = 9$	8	9	6	1	4	17	2	3	4	1		
8	5	7	1	1	10	6	9	7	17	7	8	8	6	5	9

Name: _____

**FUN
BREAK!**

Play a game online!

edHelper.com/math-games.htm**I PLAYED
ONE
GAME****MY SCORE**

PREVIEW

Join edHelper.com for full access.


$$\begin{array}{r} 7 \\ + 6 \\ \hline \end{array}$$

Circle the fifth letter.

5, A, B, R, 6, 4, D, 4, 6,
X, F, 7, Z, 5, B, 3, 9

$$19 - \underline{\quad} = 15$$

What time is it?




____:____

Maria is playing HouseBuilder on her phone. She needs 14 HouseBucks to improve her kitchen. She only has 8 HouseBucks. How much more does she need to earn?

Estimate. Jenna took a large cup and filled it with ice cubes. How many could she fit into the cup?

Name: _____

Mary is the school bus driver and has three stops. She picks up 3 kids at her first stop and 2 kids at her second stop. If everyone is going to school and she picks up 15 kids every school day, how many kids will she pick up at her last stop?



Five more than three is _____.

Two more than _____ is nine.

_____ more than seven is ten.

Hint: Finish the sentences by spelling the number.

If you add 1 to a secret number, the answer is 3.

What is the secret number?

PREVIEW

Join edHelper.com for full access.

50, 55, 60, 65, 70, 75,
_____, 85, 90

_____, _____, 104

Which number should
replace the third blank?

4 + 2 3 + 3 6 + 1
5 + 1 2 + 2 6 + 2

5 tens + 0 ones

Write the number that is 1
more.

15 ____

50 ____

35 ____


How much is this?



Name: _____

Use the picture groups to fill in the blanks.

Example:



I count _____. I count _____.
 _____ + _____ = _____


I count _____   total.

PREVIEW

Join [edHelper.com](https://www.edHelper.com) for full access.

_____ + _____ = _____

I count _____   total.



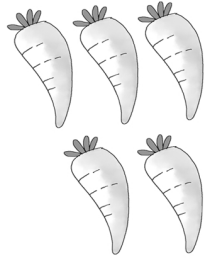
I count _____. I count _____.
 _____ + _____ = _____

I count _____   total.

Name: _____

Use the picture groups to add.

Example:



$$3 + \underline{5} = \underline{8}$$



$$5 + \underline{\quad} = \underline{\quad}$$



PREVIEW

Join [edHelper.com](https://www.edHelper.com) for full access.

$$\underline{\quad} + \underline{\quad} = 10$$



$$\underline{\quad} + \underline{\quad} = 5$$

Start at the greater number and keep
counting to add.


$$2 + 4 = \underline{\quad}$$

$$3 + 1 = \underline{\quad}$$

$$5 + 3 = \underline{\quad}$$



Name: _____

A grape bunch gets washed and then goes in a bowl. Write the missing numbers on them.



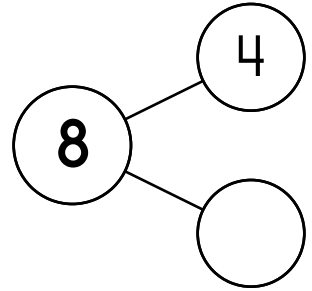
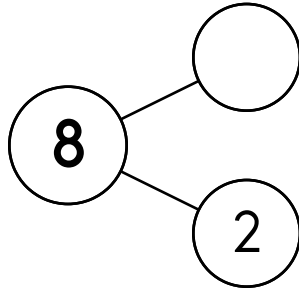
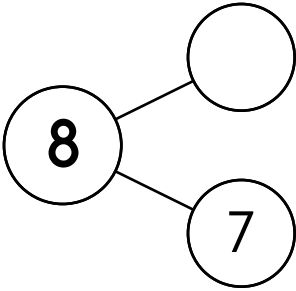
PREVIEW

Join edHelper.com for full access.

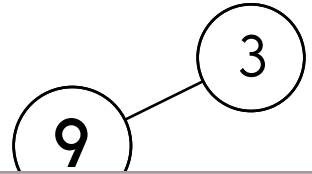
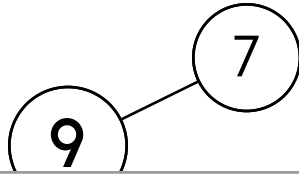
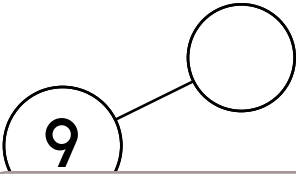
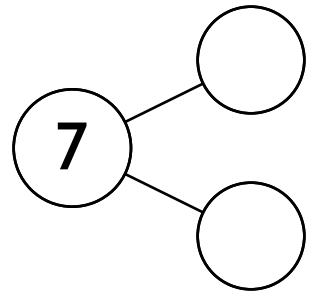
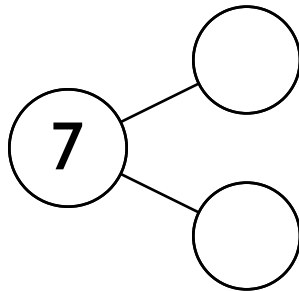
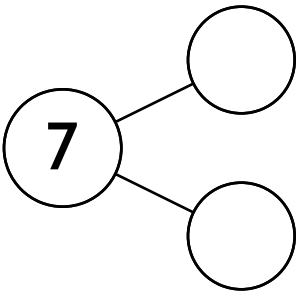


Name: _____

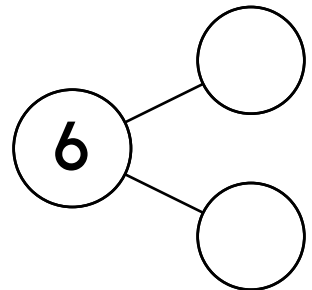
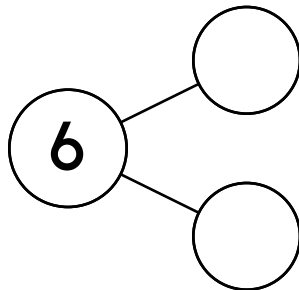
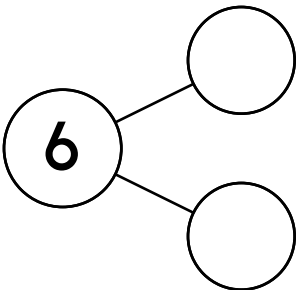
What numbers make 8?




What numbers make 9?

**PREVIEW**Join [edHelper.com](https://www.edHelper.com) for full access.

What numbers make 6?



Name: _____



7 is _____ 3

less than

more than

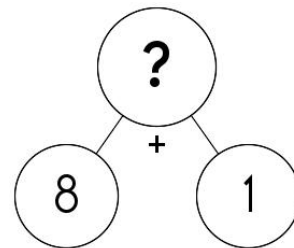
equal to

PREVIEW

Join [edHelper.com](https://www.edHelper.com) for full access.

1 more than 5

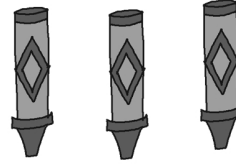
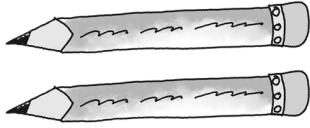
9 5 6 4



What is the missing number?

9 8 7 10

Name: _____

Draw in . Fill in the blanks.

--	--	--	--	--	--	--	--	--	--

$$2 + \underline{\quad} = \underline{\quad}$$

There are writing tools.

PREVIEW

Join edHelper.com for full access.

$$4 + \underline{\quad} = \underline{\quad}$$

There are candles altogether.

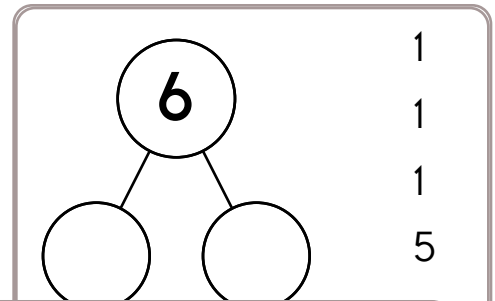
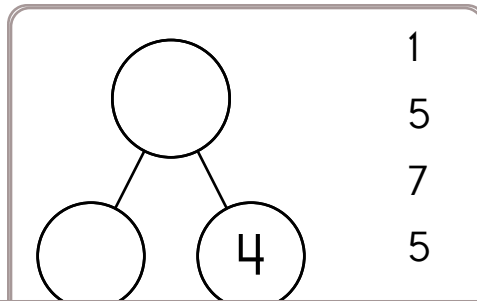
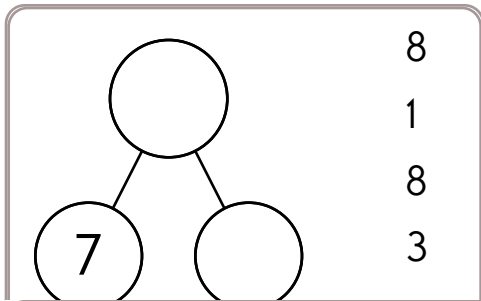
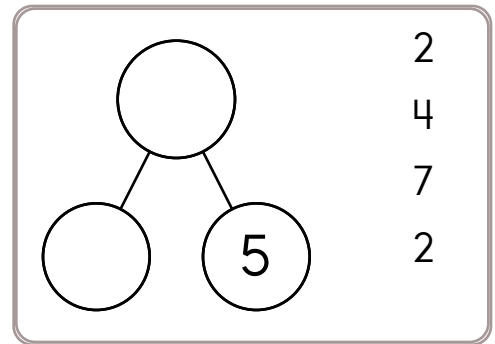
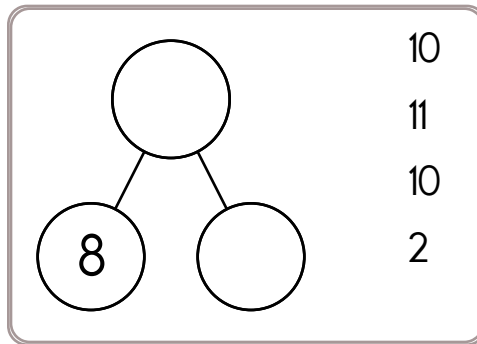
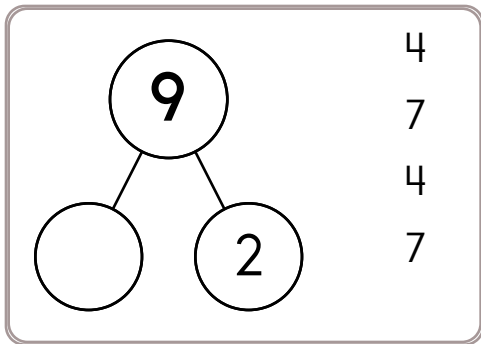
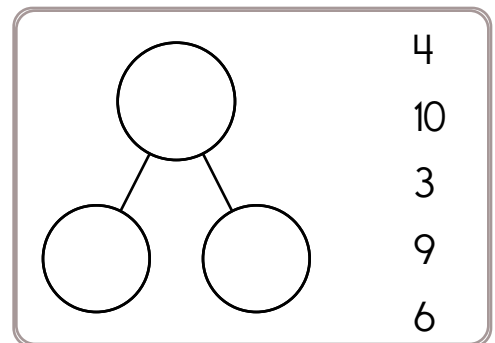
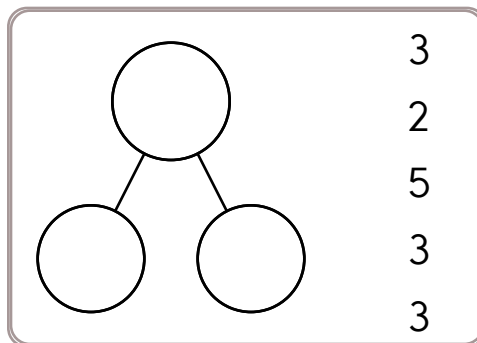
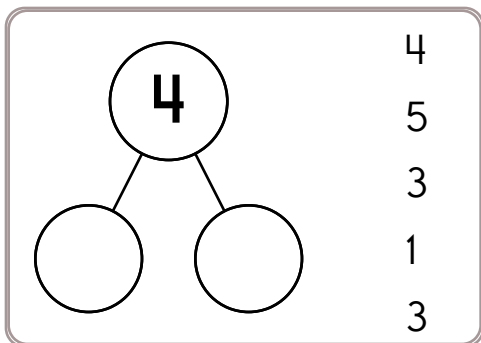
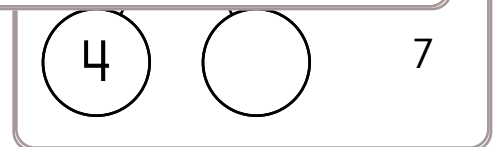
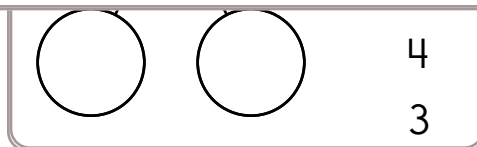
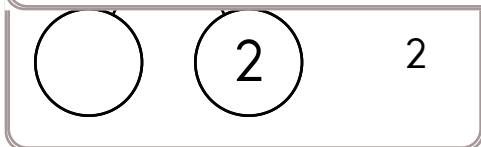
--	--	--	--	--	--	--	--	--	--

Underline the picture of what there is more of.



Name: _____

Pick from the numbers to complete each number bond.

**PREVIEW****Join edHelper.com for full access.**

Name: _____



$5 + 5 =$

$2 + 1 =$

$3 + 6 =$

$6 + 0 =$

$1 + 0 =$

$2 + 7 =$

$4 + 4 =$

$1 + 8 =$

$8 + 2 =$

$0 + 1 =$

$7 + 2 =$

6	5	5	8	4	6	7	1	8
+ 3	+ 2	+ 0	+ 2	+ 3	+ 1	+ 1	+ 5	+ 0
1	2	5	2	7	7	8	6	8

PREVIEW

Join edHelper.com for full access.

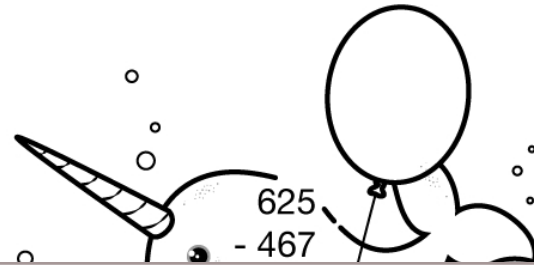
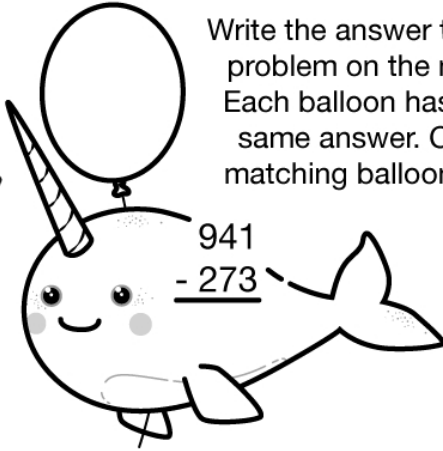
<div>10</div> <div>+</div> <div>5</div> <div>5</div>	<div></div> <div>+</div> <div>3</div> <div>6</div>	<div></div> <div>+</div> <div>7</div> <div>3</div>	<div></div> <div>+</div> <div>2</div> <div>1</div>
<div></div> <div>+</div> <div>5</div> <div>5</div>	<div></div> <div>+</div> <div>3</div> <div>4</div>	<div></div> <div>+</div> <div>3</div> <div>6</div>	<div></div> <div>+</div> <div>5</div> <div>5</div>

Name: _____

Subtraction
Up To 1000
With Regrouping
★ Tens and Ones ★

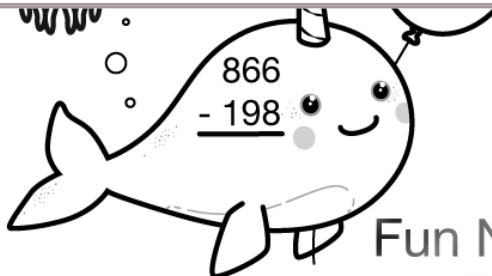
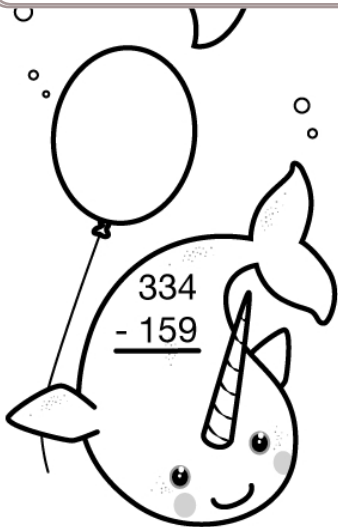
Narwhal Party!

Write the answer to each subtraction problem on the narwhal's balloon. Each balloon has a match with the same answer. Color each pair of matching balloons the same color.



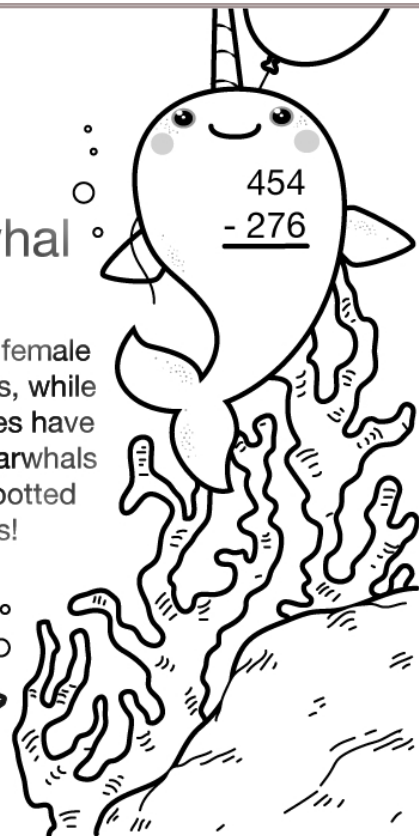

PREVIEW

Join edHelper.com for full access.



Fun Narwhal Fact:

Only about 15% of female narwhals have horns, while pretty much all males have them. Some male narwhals have even been spotted with two horns!



Name: _____

$$\begin{array}{r} 2 \\ + 6 \\ \hline \end{array}$$

$$\begin{array}{r} 1 \\ + 5 \\ \hline \end{array}$$

$$\begin{array}{r} 6 \\ + 10 \\ \hline \end{array}$$

$$\begin{array}{r} 1 \\ + 4 \\ \hline \end{array}$$

$$\begin{array}{r} 2 \\ + 2 \\ \hline \end{array}$$

$$\begin{array}{r} 3 \\ + 2 \\ \hline \end{array}$$

$$\begin{array}{r} 4 \\ + 4 \\ \hline \end{array}$$

$$\begin{array}{r} 3 \\ + 5 \\ \hline \end{array}$$

$$\begin{array}{r} 7 \\ + 10 \\ \hline \end{array}$$

$$\begin{array}{r} 1 \\ + 10 \\ \hline \end{array}$$

$$\begin{array}{r} 1 \\ + 1 \\ \hline \end{array}$$




$$\begin{array}{r} 4 \\ + 1 \\ \hline \end{array}$$



Draw it.
What can you add to your picture?

PREVIEW

Join edHelper.com for full access.



I added _____

$$\begin{array}{r} 5 \\ + 4 \\ \hline \end{array}$$

$$\begin{array}{r} 10 \\ + 5 \\ \hline \end{array}$$

$$\begin{array}{r} 1 \\ + 7 \\ \hline \end{array}$$

$$\begin{array}{r} 4 \\ + 10 \\ \hline \end{array}$$

$$\begin{array}{r} 10 \\ + 8 \\ \hline \end{array}$$

$$\begin{array}{r} 10 \\ + 1 \\ \hline \end{array}$$

Name: _____

$$\begin{array}{r} 10 \\ + 9 \\ \hline \end{array}$$

$$\begin{array}{r} 7 \\ + 1 \\ \hline \end{array}$$

$$\begin{array}{r} 10 \\ + 7 \\ \hline \end{array}$$

$$\begin{array}{r} 1 \\ + 5 \\ \hline \end{array}$$

$$\begin{array}{r} 8 \\ + 10 \\ \hline \end{array}$$

$$\begin{array}{r} 7 \\ + 2 \\ \hline \end{array}$$

$$\begin{array}{r} 5 \\ + 10 \\ \hline \end{array}$$

$$\begin{array}{r} 3 \\ + 6 \\ \hline \end{array}$$

$$\begin{array}{r} 2 \\ + 6 \\ \hline \end{array}$$

$$\begin{array}{r} 5 \\ + 2 \\ \hline \end{array}$$

$$\begin{array}{r} 1 \\ + 1 \\ \hline \end{array}$$

$$\begin{array}{r} 1 \\ + 8 \\ \hline \end{array}$$

$2 + 1 =$

$3 + 3 =$

$10 + 1 =$

$2 + 6 =$

PREVIEW

Join [edHelper.com](https://www.edHelper.com) for full access.

$__ + 2 = 6$

$3 + __ = 9$

$__ + 10 = 19$

$8 + __ = 18$

$2 + __ = 9$

$__ + 1 = 9$

$__ + 4 = 5$

$3 + __ = 4$

$__ + 10 = 12$

$3 + __ = 5$

$__ + 2 = 7$

$5 + __ = 6$

$__ + 5 = 9$

$10 + __ = 17$

$10 + __ = 14$

$__ + 3 = 13$

$$\begin{array}{r} 1 \\ + 6 \\ \hline \end{array}$$

$$\begin{array}{r} 10 \\ + 9 \\ \hline \end{array}$$

$$\begin{array}{r} 10 \\ + 10 \\ \hline \end{array}$$

$$\begin{array}{r} 1 \\ + 1 \\ \hline \end{array}$$

$$\begin{array}{r} 2 \\ + 2 \\ \hline \end{array}$$

$$\begin{array}{r} 10 \\ + 1 \\ \hline \end{array}$$

Name: _____

Only use a pencil to write the numbers on the blank lines. You do not need any scrap paper! Solve it in your head. If you forget a number, then start over. Cool, huh?

Mental Math



edHelper

= Do it
in your
head!

imagine 4 in your
head

add 3

Write the number.

imagine 5 in your
head

add 3

add 6

Write the number.

imagine 7 in your
head

add 9

subtract 4

Write the number.

imagine 8 in your
head

add 1

subtract 4

Write the number.

PREVIEW

Join edHelper.com for full access.

Wow! Great job! That's the answer, but do you know how to SPELL the number?

_____n_____

7 before 14 _____

7 after 17 _____

1 after 16 _____

9 before 11 _____

8 after 19 _____

5 after 15 _____

3 before 18 _____

2 after 14 _____

3 after 12 _____

5 before 15 _____

4 after 13 _____

9 after 11 _____

Name: _____

☒ $9 + 3 = 12$

☐ $2 + 2 = 4$

☐ $1 + 2 =$

☐ $8 + 9 = 17$

☐ $5 + 4 = 9$

☐ $5 + 8 = 13$

☐ $9 + 9 = 18$

☐ $2 + 4 =$

☐ $4 + 3 = 7$

9	26	11	18	23	8	10	9	17	$8 + 9 = 17$	8	1	2	27
$5 + 4 = 9$	9	14	28	2	11	9	2	9	9	7	5	13	3
10	2	9	7	7	5	11	4	$2 + 2 = 4$	1	9	5	24	4
1	2	8	15	4	13	21	12	6	2	17	7	28	22
14	1	6	13	$5 + 8 = 13$	4	8	5	10	16	14	4	10	5
23	2	28	18	10	8	4	9	17	11	13	2	4	5
19	2	9	8	9	14	12	5	2	11	28	5	11	21
7	1	9	11	2	3	4	7	5	1	12	11	4	8
9	13	3	5	9	10	4	5	2	2	14	3	9	1
7	3	5	17	12	2	24	18	12	14	28	18	$4 + 3 = 7$	1
1	12	18	$9 + 3 = 12$	2	18	7	17	3	6	17	3	12	4
2	9	5	11	12	9	17	10	9	9	18	1	2	10

Write
operation.

PREVIEW

Join edHelper.com for full access.

☐ $5 + 2 = 7$

☐ $2 + 9 =$

☐ $3 + 8 = 11$

☐ $3 + 1 =$

☐ $5 + 5 =$

☐ $7 + 7 = 14$

☐ $9 + 3 =$

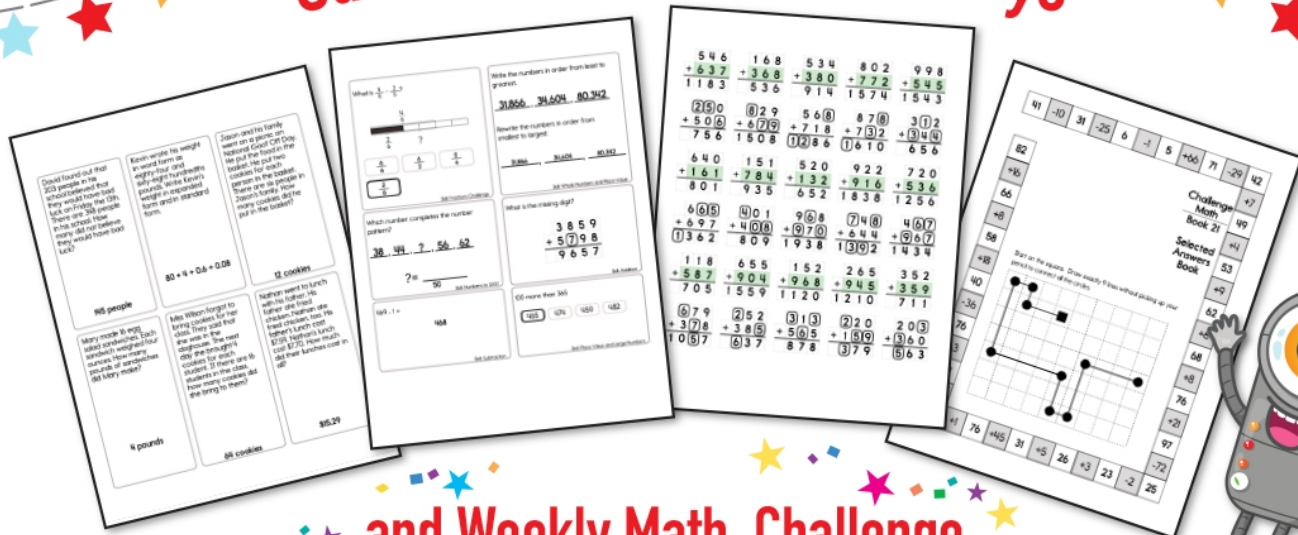
☐ $7 + 4 = 11$

☐ $3 + 6 = 9$


☐ $1 + 2 = 3$

$1 + 2 = 3$	2	$1 + 7 = 8$	7	5	12	4	21	2	23	3	1
2	15	1	17	24	1	13	9	12	9	12	5
14	9	6	6	7	17	5	$7 + 4 = 11$	2	14	12	$7 + 7 = 14$
10	1	11	3	6	2	16	1	4	8	10	3
9	6	2	9	6	3	11	13	17	12	6	5
5	6	5	1	10	12	7	1	7	7	10	4
4	$5 + 2 = 7$	12	13	8	17	2	7	13	14	25	3
4	10	2	4	8	6	16	2	3	1	6	2
3	2	11	1	1	13	2	6	18	1	13	3
9	7	3	5	7	9	12	$3 + 8 = 11$	4	8	13	20
$3 + 6 = 9$	12	28	9	3	11	9	14	9	11	6	11
2	7	19	9	14	9	9	8	10	1	14	3

Subscribe to Get Answer Keys



and Weekly Math, Challenge Workbooks, Posters, Daily Reading, and so much more!



SUBSCRIBE TO RECEIVE EVEN MORE
Answer Keys • Effective Activities • Access
to as many printables as you need!



edHelper.com




It's NO PREP at edHelper.

More history!



edHelper.com!



New online math games!



New ideas!



More science!



More puzzles!

