


Name: _____


EXTREME

Color by Subtraction


206 = red
 299 = orange
 305 = yellow
 388 = green
 404 = blue
 477 = purple
 503 = brown
 566 = tan/peach
 602 = black




Name: _____



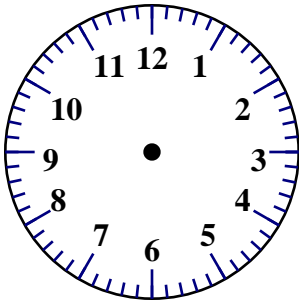
5:10



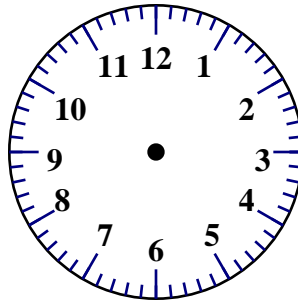
:



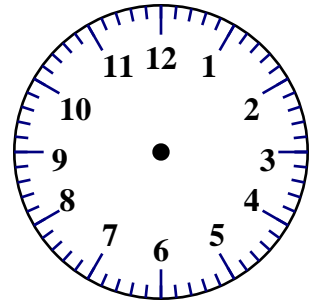
:



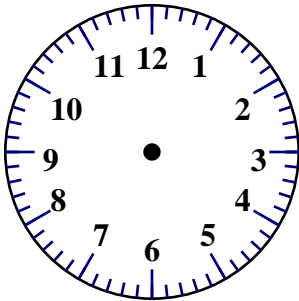
Draw 2:50.



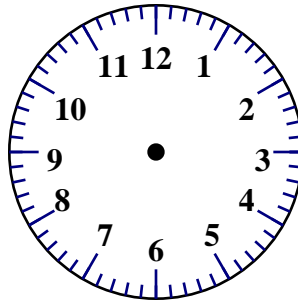
Draw 9:20.



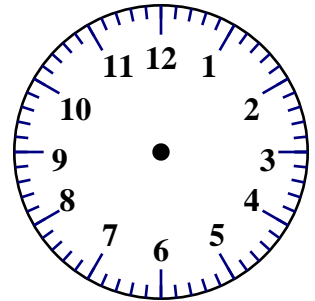
Draw 12:30.



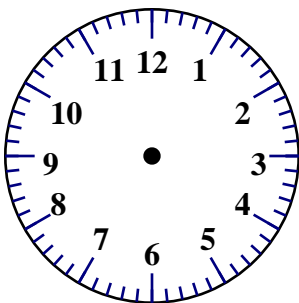
Draw 11:41.




Draw 1:26.



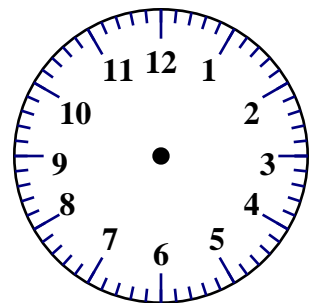
Draw 2:12.



Draw 12:10.



Draw 7:50.




Draw 6:55.

Name: _____

MATH COLORING PAGE

Directions: Solve the equations below. Color the areas based on the color key.



COLOR KEY:

Brown = 0 to 10
Blue = 41 to 50

Pink = 11 to 20
Red = 51 to 60

Yellow = 21 to 30
Orange = 61 to 70

Green = 31 to 40
Purple = 71 to 80

Name: _____

220 centimeters



The length of the first line is shown. Using that length, give an estimate of how long the second line might be. Explain.

23 meters and 480 centimeters



The length of the first line is shown. Using that length, give an estimate of how long the second line might be. Explain.

Erin needs to figure out the mass of two rocks. Adam gives her some clues and asks her to guess. Rock B is 1,438 grams heavier than rock A. Together, the two rocks weigh 2,268 grams. Help Erin figure out the weight of rock A and rock B.

Holly made 3 liters 900 milliliters of lemonade. She bought 12 cups into each of which she wants to pour 250 milliliters of lemonade. How many cups can she fill?


Name: _____

Mental Math

— #1 —

Start with the number 9.

9



Add 4 tens.

8 8 5 1 2 4 9 2 7 3 (Circle your answer to double check you are correct.)

Add the number of inches in 1 foot.

3 0 7 5 9 9 2 6 1 5

Subtract 5.

9 1 4 2 5 6 7 8 8 1

Add 2 tens.

9 3 4 5 2 3 7 6 5 6

Mental Math

— #2 —

Start with the number 527.

6 5 2 5 2 7 8 1 4 0 (Circle your answer to double check you are correct.)

Round that number to the nearest hundred.

5 0 0 0 9 6 3 9 4 5

Subtract 8.


5 4 9 2 4 2 2 0 3 6

Add 8 hundreds.

1 2 9 2 3 8 2 7 7 4

Subtract 7.

2 7 8 1 2 8 5 3 7 5



Name: _____

seventy-three 73

sixty-two _____

ninety _____

eighty-eight _____

twenty-seven _____

fifty-four _____

39 thirty-nine

40 _____

10 _____

81 _____

46 _____

75 _____

$20 + 6 = \underline{\quad}$

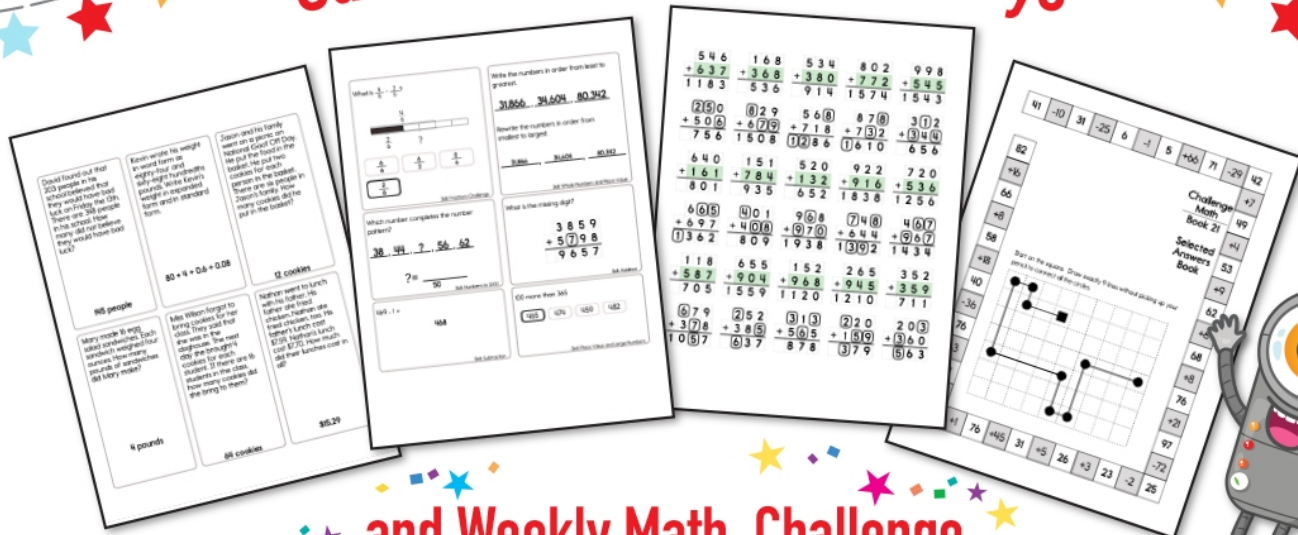
30 and 0 make .

$\underline{\quad} + 8 = 58$

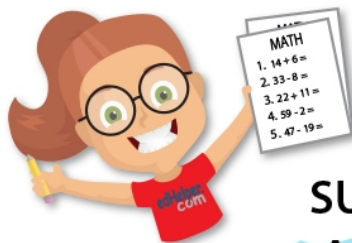
$60 + \underline{\quad} = 67$

10 and make 19. and 3 make 73.4 more than 44 is 5 more than 20 is 3 more than 81 is 6 more than 16 is 8 more than 65 is 7 more than 39 is 3 more than is 585 more than is 552 more than is 80 more than 12 is 198 more than is 916 more than is 27 is less than 54. is greater than 91.There are tens in 14.There are ones in 83. is 6 more than 39

Subscribe to Get Answer Keys



and Weekly Math, Challenge Workbooks, Posters, Daily Reading, and so much more!



SUBSCRIBE TO RECEIVE EVEN MORE
Answer Keys • Effective Activities • Access
to as many printables as you need!





It's NO PREP at edHelper.

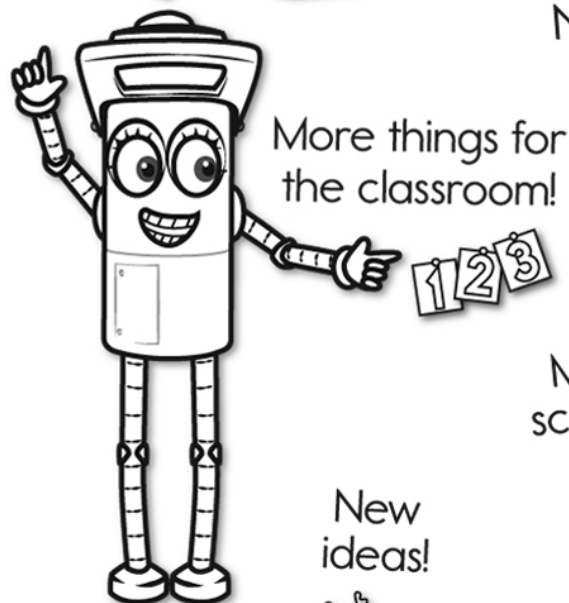
More history!



edHelper.com!



New online math games!



1 2 3



New ideas!



\times
 $\times =$
 $- \div$
 $< - >$

More puzzles!



