

7	$+4\frac{2}{5}$		$+\frac{2}{3}$		+28		$+\frac{3}{5}$		+11	
---	-----------------	--	----------------	--	-----	--	----------------	--	-----	--

Name: \_\_\_\_\_

Pick 26 to do: Skip 2 pages.

<input type="checkbox"/> page 1	<input type="checkbox"/> page 7	<input type="checkbox"/> page 13	<input type="checkbox"/> page 19	<input type="checkbox"/> page 25
<input type="checkbox"/> page 2	<input type="checkbox"/> page 8	<input type="checkbox"/> page 14	<input type="checkbox"/> page 20	<input type="checkbox"/> page 26
<input type="checkbox"/> page 3	<input type="checkbox"/> page 9	<input type="checkbox"/> page 15	<input type="checkbox"/> page 21	<input type="checkbox"/> page 27
<input type="checkbox"/> page 4	<input type="checkbox"/> page 10	<input type="checkbox"/> page 16	<input type="checkbox"/> page 22	<input type="checkbox"/> page 28
<input type="checkbox"/> page 5	<input type="checkbox"/> page 11	<input type="checkbox"/> page 17	<input type="checkbox"/> page 23	
<input type="checkbox"/> page 6	<input type="checkbox"/> page 12	<input type="checkbox"/> page 18	<input type="checkbox"/> page 24	

## Challenge Math

### Book 28

$63\frac{19}{60}$
-29
+14
+42
$+\frac{1}{12}$
$-\frac{2}{5}$
$-\frac{1}{3}$

Fill in the missing numbers. How? The sum of the four surrounding numbers is in the center of each square.

Exactly one of the four numbers has to be one of these numbers: 11.4, 27.6, or 18.4.

The other three numbers have to all be DIFFERENT and must be from these: 7.4, 9.4, 3.6, 5.7, 2.3, 6.5, or 0.3.

-5
$+9\frac{1}{3}$
+47
-3
+15
$+\frac{2}{12}$
$115\frac{1}{6}$
$+\frac{8}{12}$

+8	-21	$+\frac{4}{5}$	$-6\frac{8}{12}$	-60	
----	-----	----------------	------------------	-----	--

Name: \_\_\_\_\_

A crate of petrified wood recently sold at the local auction. There were about thirty-five pieces and the total weight of the pieces was 206.6 pounds. What was the average weight per piece? Round your answer to two decimal places. \_\_\_\_\_ pounds

Proteins are made from linear sequences of amino acids. How many different proteins could be made from the amino acids phenylalanine, glutamic acid, and lysine?

Captain Howard had his crew paint the smokestack on his ship which was called the Sea Snail. The smokestack is shaped like a cylinder and is 35 feet 8 inches tall. The radius of the smokestack's base is five feet. What is the surface area of the smokestack?

The Floop family went to a hockey game last weekend. They spent \$12 on food, \$47 on souvenirs, and \$18 on drinks. What fraction of their expenditures was spent on drinks?

Hannah's boss told her that if her department's income decreases more than eight percent from last year's income she will not receive a bonus. Hannah's department made \$147,418 for the company last year. At the end of this year, the company accountant told Hannah that her department's income was \$129,728. Will Hannah receive a bonus this year?

Moh's hardness scale ranges from 1 to 10 and describes different minerals in terms of their hardness. Gypsum is the softest mineral on the scale (hardness of 1) and diamond is the hardest mineral on the scale (hardness of 10). In a collection of 10 minerals, each with an integer hardness value different from any other mineral in the collection, what is the probability of randomly choosing a mineral from the collection that has a hardness greater than 8?

Name: \_\_\_\_\_

$$\begin{array}{r} 19.04 \\ \times 0.7 \\ \hline \end{array}$$

$$8.2 \times 100 =$$

$$\begin{array}{r} 16.93 \\ - 10.1 \\ \hline \end{array}$$

$$1.6 \overline{) 0.1648}$$

$$10 \overline{) 1.37}$$

$$3 \overline{) 1.11}$$

Write the decimal in words.  
5.00018

$$\begin{array}{r} 5,129,345.37 \\ 7,961,465.57 \\ + 132,641.48 \\ \hline \end{array}$$

Convert to a fraction or mixed number and simplify.

$$0.348 =$$

$$4.6 =$$

$$8.843 =$$

$$8.41 =$$

$$30.81 =$$

$$0.179 =$$

$$\begin{array}{r} 18.475 \\ + 9.52 \\ \hline \end{array}$$

$$\begin{array}{r} 9.4 \\ \times 2.74 \\ \hline \end{array}$$

$$\begin{array}{r} 7.8 \\ - 6.3 \\ \hline \end{array}$$

Name: \_\_\_\_\_

Complete each pattern. Write what the rule is.

45, 46, \_\_\_\_\_, \_\_\_\_\_, 67, 80, 96, 115, 137, 162

7, 8, 12, 19, 29, 42, 58, 77, \_\_\_\_\_, \_\_\_\_\_, 152, \_\_\_\_\_

Find the missing numbers.

If

$$1, 1 = 1$$

$$2, 2 = 4$$

$$3, 3 = 9$$

$$4, 4 = 16$$

Then

$$5, 5 = ?$$

If

$$7, 7 = 14$$

$$8, 8 = 16$$

$$9, 9 = 18$$

$$10, 10 = 20$$

Then

$$11, 11 = ?$$

☐

I did page 4

☐

I decided to skip this page  
edHelper

**Name:** \_\_\_\_\_

Goldie is counting his gold. He wants to buy one new hat and one new shirt.

Two hats and one shirt cost 50 gold pieces.

One hat and two shirts cost 73 gold pieces.

But Goldie only wants one of each. How many gold pieces will that be?

Show your work.

Show your gold. I mean, work.

Name: \_\_\_\_\_

Fill in the missing numbers. How? The sum of the four surrounding numbers is in the center of each square.

Exactly one of the four numbers has to be one of these numbers:  $6\frac{1}{3}$ ,  $1\frac{1}{4}$ , or  $9\frac{1}{2}$ .

The other three numbers have to all be DIFFERENT and must be from these:  $7\frac{2}{3}$ ,  $5\frac{2}{3}$ ,  $3\frac{1}{3}$ , or  $2\frac{2}{3}$ .

	$2\frac{2}{3}$				$1\frac{1}{4}$	
$7\frac{2}{3}$	$17\frac{1}{4}$	$5\frac{2}{3}$	23	$6\frac{1}{3}$	$22\frac{1}{3}$	
	$1\frac{1}{4}$					
	$12\frac{11}{12}$		$17\frac{11}{12}$	$1\frac{1}{4}$	$14\frac{11}{12}$	$17\frac{11}{12}$
	$26\frac{1}{6}$		$17\frac{11}{12}$	$5\frac{2}{3}$	$22\frac{1}{3}$	20
	$25\frac{1}{2}$		$17\frac{11}{12}$			$23\frac{1}{6}$
	$23\frac{1}{6}$		$21\frac{1}{6}$			

☐

I did page 6

☐I decided to skip this page  
edHelper

Name: \_\_\_\_\_

There is no ethnic majority in Hawaii. Everyone is in a minority. Caucasians (haoles) are about  $\frac{34}{100}$  of the population. Write the fraction in simplest form.

The deepest lake in the world is Lake Baikal in Russia. It is 5,371 feet deep - a little over a mile deep! The depth of Lake Barrine in Australia is only 4% of the depth of Lake Baikal. How deep is Lake Barrine?

Justin took a big bowl from the kitchen to see what kind of fun party mix he could create.

He added  $\frac{1}{8}$  cup of pretzels,  $\frac{4}{5}$  cup of Cheerios,  $\frac{1}{3}$  cup of Goldfish crackers, and  $1\frac{3}{4}$  cups of raisins. How much food is now in the bowl?

In each group, circle the number that has the greatest value, and put a square around the number that has the least value.

$8^1$

$8^3$

$8^5$

$8^4$

$7^5$

$7^6$

$7^3$

$7^4$

Name: \_\_\_\_\_

Only use a pencil to write the numbers on the blank lines. You do not need any scrap paper! Solve it in your head. If you forget a number, then start over. Cool, huh?

# Mental Math



= Do it  
in your  
head!

imagine 7 in your head

double it

add 5

Add the tens digit to the ones digit.  
Write the sum.

\_\_\_\_\_  
A      B

imagine 5 in your head

multiply 2

add 6

subtract 6

double it

add 5

Write the tens digit.

\_\_\_\_\_  
C

imagine 5 in your head

subtract 2

add 2

subtract 4

add 3

multiply 8

Write the even digit in your answer.

\_\_\_\_\_  
D

imagine 8 in your head

add 5

add 4

add 8

subtract 8

add 9

Write the tens digit.

\_\_\_\_\_  
D

What is the sum?

A + B + C + D

\_\_\_\_\_

Wow! Great job! That's the answer, but do you know how to SPELL the number?

\_\_\_\_\_e\_\_\_\_\_

2 before 15 \_\_\_\_\_

7 after 19 \_\_\_\_\_

9 before 14 \_\_\_\_\_

4 before 13 \_\_\_\_\_

8 after 13 \_\_\_\_\_

6 before 17 \_\_\_\_\_

7 before 11 \_\_\_\_\_

4 after 18 \_\_\_\_\_

1 before 16 \_\_\_\_\_

☐

I did page 8

☐I decided to skip this page  
edHelper

Name: \_\_\_\_\_

Megan is looking for a good outside game to play at her birthday party. She bought a book of backyard games from the bookstore near her house. The price of the book was \$7.74. If she paid for it with a \$10-dollar bill, how much change did she get?

The Iditarod has been called the "Last Great Race on Earth." It begins in Anchorage, Alaska, and ends 10 or 11 days later in Nome. The population of Anchorage was 260,283 according to the 2000 Census. What is the value of the digit "6" in that number?

113, 99, \_\_\_\_\_, 74, 63,  
53, 44, 36, 29, 23, 18

$$t - 11 + 15 = 26$$

What is the value of  $t$ ?

$$11.4377 \times 10^3 =$$

Fred the Fantastic does his magic act on a revolving stage. The stage has a diameter of 12 feet. What is the area of the stage? Round your answer to the nearest hundredth.

Sarah had some pieces of wood to make a picture frame with a perimeter of 90 inches. Two of the pieces of wood are 21 inches long each. The other two pieces are equal in length. How long are the other two pieces of wood?

The deepest lake in the world is Lake Baikal in Russia. Lake Baikal is 1637 meters deep. Approximately how many feet deep is Lake Baikal?

In what quadrant would you find the point  $(-4, 4)$ ?

Circle the least amount:

12%

0.47

$$\frac{1}{5}$$

Simplify.

$$\frac{14}{42} =$$

Name: \_\_\_\_\_

David rides his horse 30 minutes every morning and 90 minutes every afternoon. If he rides every day for 19 days, how many minutes will he ride?

Ms. Young used three dozen mudbugs in her soup. The recipe makes 16 cups of soup. Approximately how many mudbugs are in each cup of soup? (Round off the answer to the nearest whole number.)

Max received a gift certificate at the Book Barn, so he decided to give away the books he had read. He divided the books evenly among 3 friends. Each friend got 8 books. Write and solve an equation to find how many books Max gave away.

$$0.4 (0.9 (0.4 \times 4)) =$$

$$2 + (65 \div 5) - 72 \div 6 =$$

$$t - 10 + t = 22$$

What is the value of t?

A recent survey of adults in the Pine Rivers area found that only 7.2% of the people surveyed could name more than two kinds of saxophones. If there were 2,526 people surveyed, how many couldn't name more than two kinds of saxophones?

Anne was bored. She found her little sister and offered to read a book to her. She read to her sister for an hour and 50 minutes. If Anne started reading at 2:17 p.m., what time did she stop reading?

The temperature in Magadan, Russia, is 12 degrees Centigrade. Use the conversion formula  $F = (9/5) \text{ times (the degrees in Centigrade) plus } 32$  to calculate the temperature in Magadan in degrees Fahrenheit. Round your answer to the nearest degree.

Name: \_\_\_\_\_

Draw a line to match each problem with the same answer.

50% of 28 ●

● 80% of 135

54% of 200 ●

● 75% of 144

82% of 200 ●

● 30% of 110

47% of 100 ●

● 80% of 65

55% of 60 ●

● 75% of 144

94% of 50 ●

● 50% of 104

56% of 25 ●

● 100% of 164

60% of 165 ●

● 66% of 150

$0.14 + 5.4 =$

$$\begin{array}{r} 0.46 \\ - 0.276 \\ \hline \end{array}$$

$$\begin{array}{r} 1.3 \\ 15.3 \\ + 7.8 \\ \hline \end{array}$$

84 divided by 7 equals

$12 \div \frac{1}{2}$

What 6 coins add up to 57 cents?

8, \_\_\_\_\_, 12, 14, 16, 18,  
20, 22

It's 11:00 a.m. and Amanda is getting ready for soccer practice. If practice starts at 3:45 p.m., then how much longer until soccer starts?

What is the area of a rectangle with sides 4 cm and 10 cm?

Name: \_\_\_\_\_

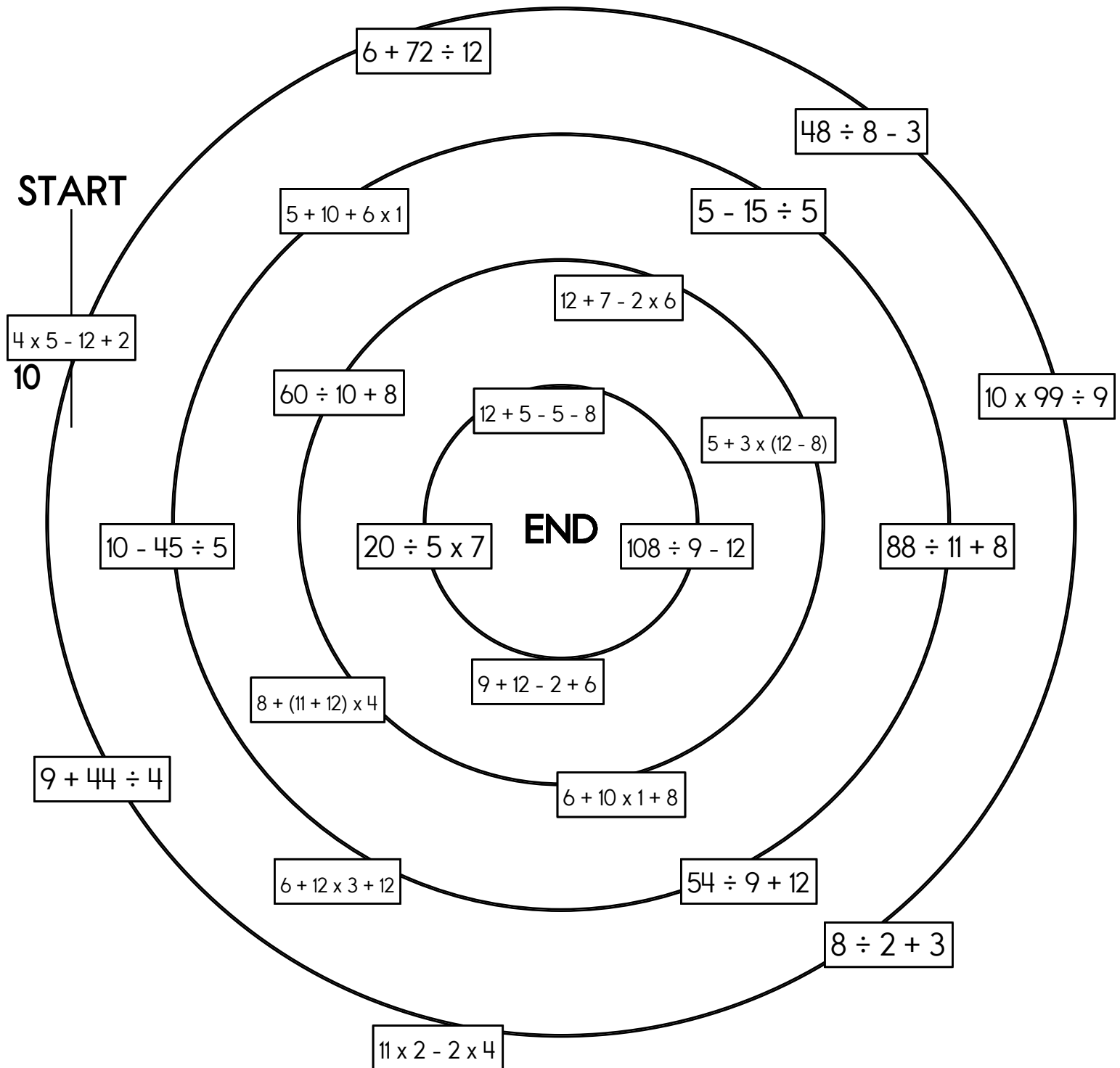
Draw a line from START to END.

~~10~~  
0

7

18

Cross out the number you use above and then write it below.



Name: \_\_\_\_\_

Circle all of the numbers that are greater than 3.9.

$$\frac{30}{8}$$

$$\frac{22}{5}$$

$$\frac{8}{3}$$

$$3\frac{2}{6}$$

$$\frac{7}{2}$$

$$3\frac{1}{7}$$

$$\frac{168}{48}$$

$$\frac{19}{4}$$

$$\frac{18}{5}$$

$$\frac{7}{3}$$

$$\frac{22}{6}$$

$$\frac{13}{3}$$

3.0100

3.170

3.10

3.014

There is 1 prime number greater than 19 but less than 29. Name them.

Name: \_\_\_\_\_

Write as a fraction in simplest form.

$$\frac{2}{3} + \frac{1}{5} + \frac{1}{6} =$$

$$\frac{1}{5} + \frac{3}{10} + \frac{14}{15} =$$

$$\frac{3}{4} + \frac{2}{3} + \frac{1}{12} =$$

How much money is 1 quarter, 1 dime, 1 nickel, and 4 pennies?

$$34 + n = 46$$

A toy car can go 4 mph. How long would it take to go 5 miles?

$$9\frac{2}{4} + 6\frac{2}{4}$$

Write the missing family fact.

$$133 \div 19 = 7$$

$$7 \times 19 = 133$$

$$19 \times 7 = 133$$

The radius of a circle is 304 cm. What is the diameter of this circle?

Circle the digit in the tenths place.

6,281.35

$$56 \div 8 = \underline{\hspace{2cm}}$$

$$8 \text{ kg} = \underline{\hspace{2cm}} \text{ g}$$

Name: \_\_\_\_\_

What is the least common multiple for each of the number sets?

The least common multiple of 12 and 18 is \_\_\_\_\_

The least common multiple of 10 and 17 is \_\_\_\_\_

The least common multiple of 3 and 12 is \_\_\_\_\_

The least common multiple of 6 and 9 is \_\_\_\_\_

The least common multiple of 10 and 16 is \_\_\_\_\_

$$\frac{7}{9} = \frac{?}{63}$$

Write as a percent.

$$\frac{18}{100}$$

20 is what % of 100?

What is 50% of 1,432?

How much time is it from  
8:00 a.m. to 11:45 a.m.?

$$12 \div \frac{1}{5}$$

How many yards are in 9 feet?

\_\_\_\_\_ yards

$$10 \times 4 =$$



☐

I did page 15

☐I decided to skip this page  
edHelper**Name:** \_\_\_\_\_

Leprechaun Patty McFeverish is decorating her room for St. Patrick's Day. She is putting down a green rug that is made of green gold.

"That will be \$125 for the rug," says Leprechaun Fortune.

"Wow!" yells Greenie. "I never knew they made green gold. This is beautiful. I must have it for my room!"

"No problem," says Fortune. "But your room is three times as long and twice as wide. It is going to cost you."























How much will it cost to do Greenie's room?

Show your work.

Try drawing a picture to see how much bigger Greenie's room is before you figure out the cost.

Name: \_\_\_\_\_



Puzzle:



					35
					29
13	13				54
				13	61
					41
39	46	49	37	49	+

Work Area:

					35
					29
13	13				54
				13	61
					41
39	46	49	37	49	+

















The sum for each column  
and row is given.

 = \_\_\_\_\_  
 = \_\_\_\_\_

 = \_\_\_\_\_  
 = \_\_\_\_\_

 = \_\_\_\_\_



Puzzle:



				23
				29
				21
				24
29	19	25	24	+



Work Area:

				23
				29
				21
				24
29	19	25	24	+

The sum for each column  
and row is given.

 = \_\_\_\_\_  
 = \_\_\_\_\_

 = \_\_\_\_\_  
 = \_\_\_\_\_

 = \_\_\_\_\_  
 = \_\_\_\_\_

☐ I did page 17☐ I decided to skip this page  
edHelper

Name: \_\_\_\_\_

$22\frac{8}{10}$	-7				+18		-11	
		$-\frac{2}{8}$			$-8\frac{3}{8}$			+21
					$23\frac{19}{20}$			
$-\frac{2}{10}$		+43			$+\frac{3}{5}$		+60	$+\frac{2}{10}$
$+3\frac{4}{8}$		-39			$+\frac{5}{10}$		-1	$+4\frac{2}{5}$ 107 $\frac{7}{40}$

45	$+\frac{3}{4}$		-13
	+8		$+7\frac{3}{4}$
-25			
	$-\frac{2}{4}$	23	$-\frac{11}{12}$

$+\frac{7}{9}$		-32
$-\frac{4}{12}$		+57
$63\frac{1}{12}$		
+41		+12 96 $\frac{7}{9}$


☐

I did page 18

☐I decided to skip this page  
edHelper

Name: \_\_\_\_\_

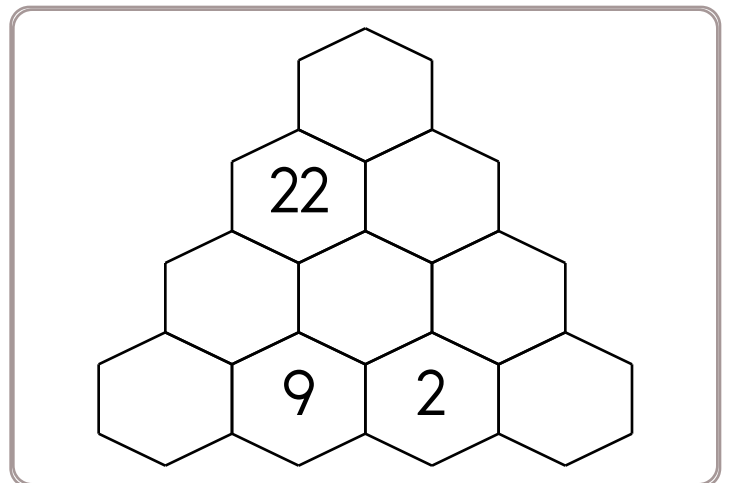
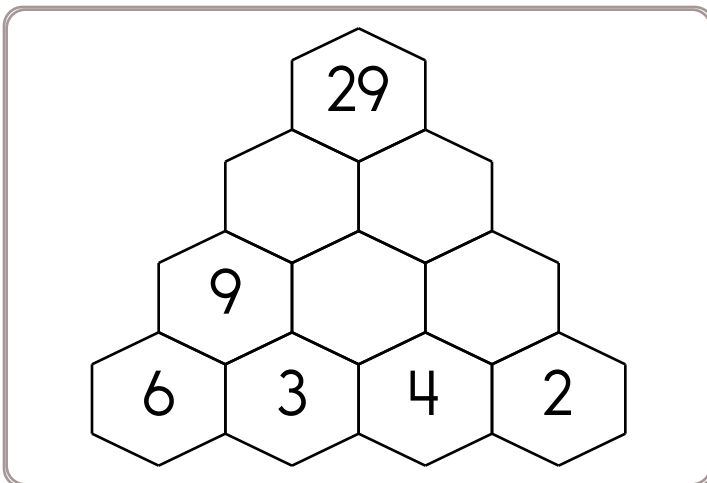
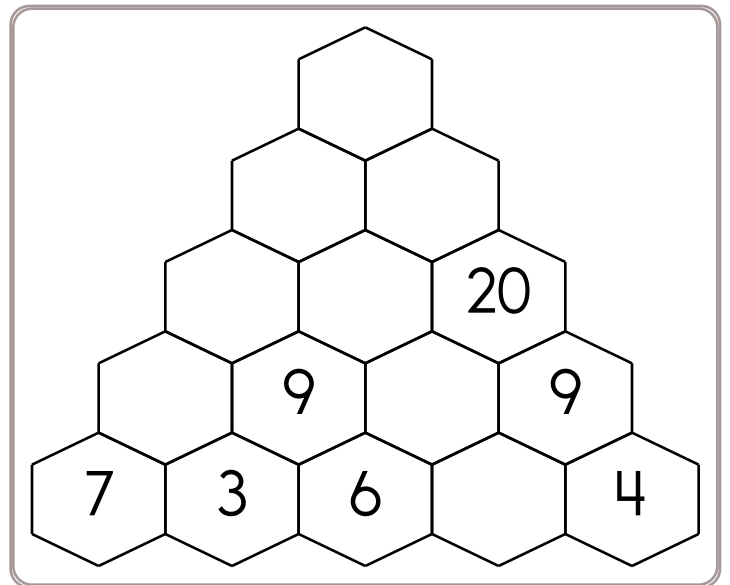
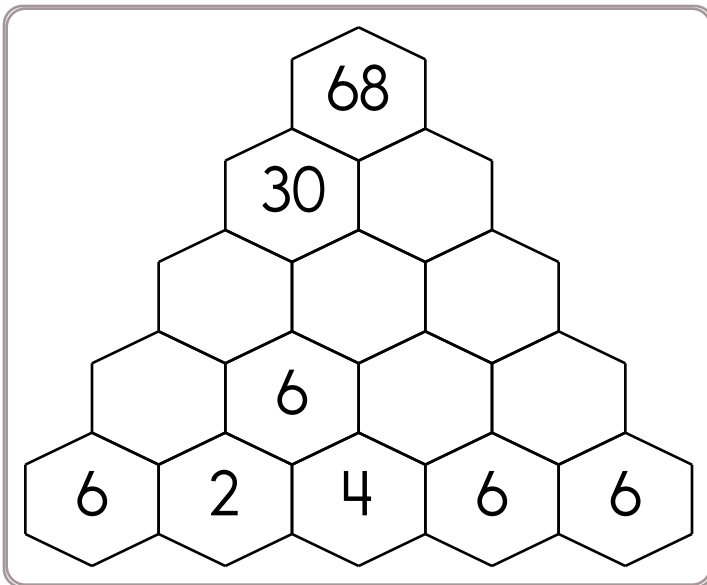
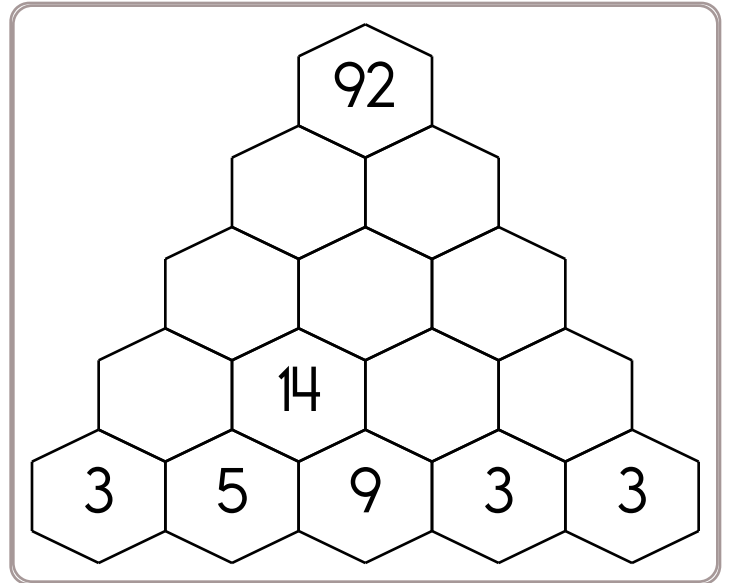
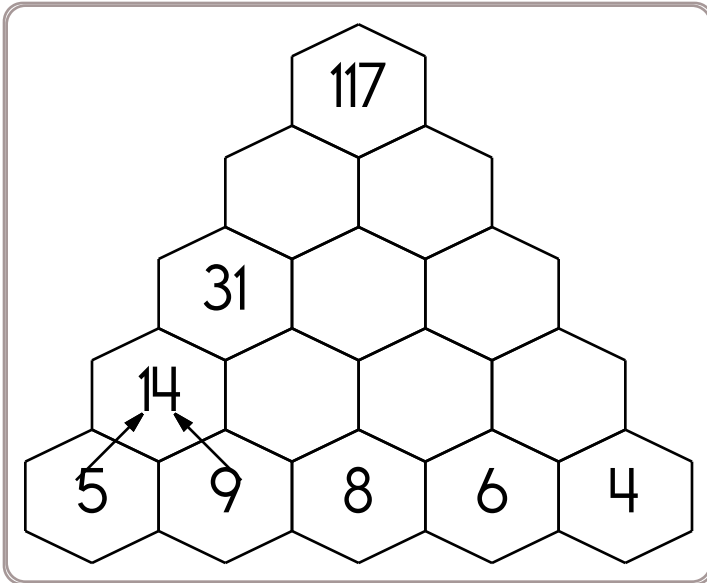
Pick up all of the robots from the game board. Start on the **B** circle. Do not pick up your pencil. Draw a line going left, right, up, or down. **Every line must end on a robot or the E circle. No stopping on an empty box.** Try to collect all the robots and end your last line on the **E** circle. You can go through a robot more than once.



Didn't get them all? That's ok. This was hard. I missed only \_\_\_\_\_ robot/robots.

Name: \_\_\_\_\_

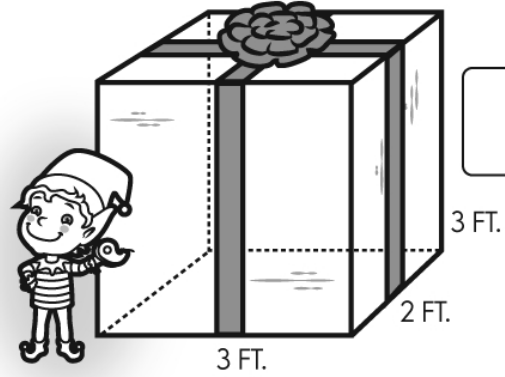
Fill in the blanks by adding the two numbers below each hexagon.



Name: \_\_\_\_\_



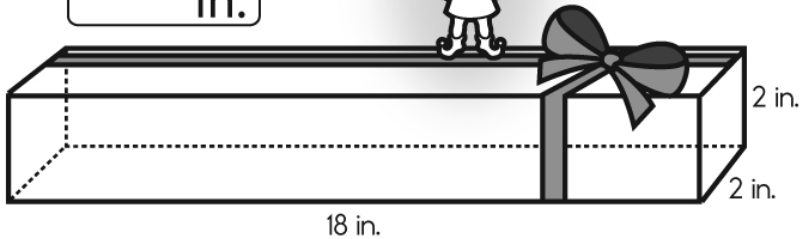
area of front  
area of back  
area of top  
area of bottom  
area of side  
+ area of side  
-----  
surface area

Surface  
Areaft.<sup>2</sup>

3 FT.

2 FT.

3 FT.

Surface  
Areain.<sup>2</sup>

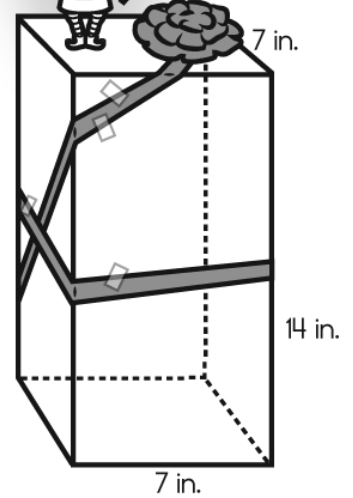
2 in.

2 in.

18 in.



Draw, label, and find the area  
of a 5 x 5 x 5 inch cube.

in.<sup>2</sup>

7 in.

14 in.

7 in.

Surface  
Areain.<sup>2</sup>

☐

I did page 21

☐I decided to skip this page  
edHelper

Name: \_\_\_\_\_

"I can quickly divide a three-digit number by a two-digit number," April tells Nathan.


"Yeah, sure," replies Nathan. "Then what is 561 divided by 33?"

April has a trick. She will distract Nathan while you figure it out. Show your work!

4 hearts =  $\frac{1}{12}$  of a balloon

\_\_\_\_\_ hearts =  $\frac{1}{6}$  of a balloon

Name: \_\_\_\_\_



Write your own math problem here.

Ask the person who helped you to try to solve your problem.

Name: \_\_\_\_\_

$$\frac{3}{5} \times \frac{7}{12}$$

Simplify.

$$\frac{30}{35} =$$

If  $a = 8$  and  $p = -33$  then  
what is  $6a - 10p - 2p = ?$

What is the greatest  
common factor of the  
numbers 60 and 105?

What is the remainder of  
77 divided by 17?

$$6 + (70 \div 7) - 54 \div 6 =$$

A circle graph has five  
sections. Only four  
sections are labeled. The  
labels are 17%, 13%, 7%, and  
11%. What should the  
missing section be?

What is the prime  
factorization of 27?

Simplify.

$$\frac{100}{300} =$$

Simplify.

$$\frac{14,400}{19,200} =$$

$$17c - 26.6 = 24.4$$

$$c =$$

Use  $>$ ,  $<$ , or  $=$  to complete.

$$62\% \text{ — } \frac{3}{12}$$

$$44\% \text{ — } \frac{2}{3}$$

$$\frac{2}{4} \text{ — } 59\%$$

Name: \_\_\_\_\_

Circle the percentage that is closest to 40 out of 56:

85%

17%

52%

If  $c = -9$  and  $m = 33$  then what is  $10c - 15m + 2m = ?$

$p - \$59 = \$25$   
What is the value of  $p$ ?

$$|-12| + m = 6$$

$$m =$$

Rewrite  $\frac{13}{100}$  as a decimal.

$$3.1538 \times 10^2 =$$

The letter  $p$  is used to represent power points in a game, which can range from 206 to 460 points. Express this as an inequality.

A circle graph has four sections. Only three sections are labeled. The labels are 21.85%, 35.66%, and 19.49%. What should the missing section be?

What is the mode of the following number set?

57, 61, 55, 65, 66, 75, 52, 60,  
70, 76, 56, 59, 71, 64, 73

$$0.7 (0.5 (0.7 \times 5)) =$$

$$4 + 11 \cdot 11 + 7$$

Circle the least amount:

44%

0.15

 $\frac{6}{25}$

Name: \_\_\_\_\_

<p>Emily wrote a fable called "Marcus and the Lemons." In the fable, Marcus bought 255 lemons because they were cheap! Then, after he got home, he didn't know what to do with so many lemons. If the lemons cost \$0.12 each, how much did the 255 lemons cost?</p>	<p>The top three finishers in the Freedom Week Run had times of 1.28 hours, 1.3 hours, and 1.43 hours. What was the time difference between 1st and 3rd places?</p>	<p>Emily used an entire 26-yard roll of masking tape to make a cardboard house for her little sister. How many inches of masking tape did she use?</p>
----------------------------------------------------------------------------------------------------------------------------------------------------------------------------------------------------------------------------------------------------------------------	---------------------------------------------------------------------------------------------------------------------------------------------------------------------	--------------------------------------------------------------------------------------------------------------------------------------------------------

<p>A maple tree grows about 12 inches per year. If the maple tree in Alex's yard is 27 inches tall now, how tall will it be in 2 years?</p>	<p>David added the number of edges on a triangular prism to the number of vertices on a cube. What was the sum?</p>	<p>At the Barbeque Day cookout at the Yellow Hill Community Center, <math>\frac{1}{3}</math> of the people had chicken, <math>\frac{1}{2}</math> had pork, and the rest had beef. What percent of the people had beef?</p>
---------------------------------------------------------------------------------------------------------------------------------------------	---------------------------------------------------------------------------------------------------------------------	----------------------------------------------------------------------------------------------------------------------------------------------------------------------------------------------------------------------------

<p>979 - 832 = _____</p>	<p>1 lb = 16 oz</p> <p>15 lb = _____ oz</p>
--------------------------	---------------------------------------------



<p> <math display="block">\begin{array}{r} 318 \\ + 482 \\ \hline \end{array}</math> </p>	<p>7 x 3 = _____</p>	<p>93,999 + 82,385 = _____</p>
-------------------------------------------------------------------------------------------	----------------------	--------------------------------

Name: \_\_\_\_\_

Janna picked 40 flowers — just because! Three-fifths of the flowers are red. One-tenth of the flowers are yellow. The rest of the flowers are white. What is the ratio of red flowers to white flowers? (Write your answer as a fraction in lowest terms.)

David wrote a 200-word essay for the Labor Day essay contest. He started writing at 4:33 p.m. and finished the essay at 9:18 p.m. How long did it take him to write his entry?

Max bought 2 books about mules. He received \$4.06 back in coins. He has 10 quarters, half as many dimes as quarters, 4 times as many nickels as dimes, and the rest are pennies. How many of each coin does he have?

Name: \_\_\_\_\_

$$18 \overline{) 324}$$

$$9 \overline{) 324}$$

$$12 \overline{) 183}$$

$$81 \overline{) 488}$$

$$20 \overline{) 360}$$

$$4 \overline{) 40}$$

$$30 \overline{) 1650}$$

$$55 \overline{) 1394}$$

$$28 \overline{) 168}$$

$$8 \overline{) 139}$$

$$35 \overline{) 1120}$$

$$36 \overline{) 1728}$$

$$|-14| - b = 18$$

$$b =$$

$$|-52| - [41] =$$


$$t - 8 + t = 38$$

What is the value of t?

$$\text{If } 5x = 95, \text{ then } x =$$

$$\frac{23}{28} \div \frac{2}{7} =$$

In what quadrant would you find the point (5, -13)?



Name: \_\_\_\_\_

Draw ONE continuous line that touches every box ONCE.  
Count by 3.4s. Find the box with the number 4. Move up, down, right, or left.  
Keep counting until you reach 214.8. Do not move into a spot with a ghost.

		75.4	68.6	65.2		
			78.8	ghost	ghost	
123						
				24.4		
106			ghost			74
			ghost			4
		ghost			214.8	211.4
		ghost		194.4		
174				ghost		



$$0.8 (0.6 (0.8 + 3)) =$$

$$754 \div 10$$

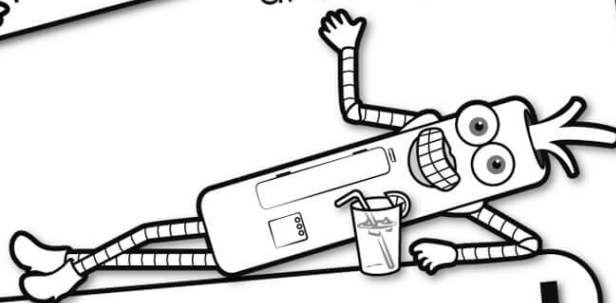
What is the remainder of  
58 divided by 7?

$$9 \times 5 = \underline{\hspace{2cm}}$$






It's NO PREP  
at edHelper.




**edHelper.com!**

**only \$19.99  
per year**

More  
history!



More  
puzzles!



More  
science!



New  
ideas!



Things for the  
classroom!

