

foot
name

clear

natural

disappear

earmuffs

enough

toast

by

nickel

knife

Spelling

Week of _____

hears

near

quadrilaterals

knock

year

noisy

road

bye

knee

books

said

knew

My Name: _____

Your Words

Pick 3 to do:

- ☐ page 1
- ☐ page 2
- ☐ pages 3-4
- ☐ page 5

Math Break

Pick 1 to do:

- ☐ page 6
- ☐ page 7
- ☐ page 8
- ☐ page 9
- ☐ page 10
- ☐ page 11
- ☐ page 12
- ☐ page 13

Spelling Workout

Pick 5 to do:

- ☐ page 14
- ☐ page 15
- ☐ page 16
- ☐ page 17
- ☐ page 18
- ☐ page 19
- ☐ page 20

Challenge Words

Do this:

- ☐ page 24

EAR Words

Do this:

- ☐ page 25

Spelling Break

Pick 1 to do:

- ☐ page 21
- ☐ page 22
- ☐ page 23

Name: _____



Read the Word.

Copy the Word.

Copy the Word.

1. road
2. foot
3. nickel
4. books
5. bye
6. by
7. said
8. toast
9. knock
10. knew
11. knee
12. knife
13. noisy
14. name
15. natural
16. disappear
17. clear
18. hears
19. near
20. year
21. earmuffs
22. quadrilaterals
23. enough

[illegible]

Name: _____

Finding Words Multiple Times

Look for words to the RIGHT, to the LEFT, UP, or DOWN.

E	I	H	H	A	E	M	A	N	E	F	I	N	K	N
I	N	G	G	N	O	I	S	Y	K	N	I	F	E	I
N	N	U	U	L	N	T	O	N	O	I	S	Y	Y	C
T	R	O	O	E	S	O	B	R	A	E	L	C	S	K
E	R	N	N	C	Y	A	Y	R	A	E	L	C	I	E
K	E	E	E	G	E	S	E	C	L	E	A	R	O	L
A	N	E	M	A	N	T	E	M	A	N	C	T	N	N
E	O	N	A	M	E	H	E	Y	S	R	L	S	R	I
T	U	A	C	M	Y	G	N	B	B	A	E	A	A	C
N	G	H	I	R	S	U	O	Y	Y	E	A	O	E	K
L	H	O	U	O	I	O	U	E	E	N	R	T	L	E
T	O	A	S	T	O	N	G	T	O	A	S	T	C	L
T	S	A	O	T	N	E	H	L	A	R	U	T	A	N

 Answers for blanks: 4 5 1 3 4 2 2 1 5 5

 I found NATURAL ____ time(s). ☐ ☐ ☐ ☐ ☐

 I found NICKEL ____ time(s). ☐ ☐ ☐ ☐ ☐

 I found CLEAR ____ time(s). ☐ ☐ ☐ ☐ ☐

 I found NOISY ____ time(s). ☐ ☐ ☐ ☐ ☐

 I found KNIFE ____ time(s). ☐ ☐ ☐ ☐ ☐

 I found TOAST ____ time(s). ☐ ☐ ☐ ☐ ☐

 I found ENOUGH ____ time(s). ☐ ☐ ☐ ☐ ☐

 I found NEAR ____ time(s). ☐ ☐ ☐ ☐ ☐

 I found BYE ____ time(s). ☐ ☐ ☐ ☐ ☐

 I found NAME ____ time(s). ☐ ☐ ☐ ☐ ☐

Name: _____

Picture Dictionary

Draw a picture of 11 of your words. Write the word.



EXAMPLE. laughed

1. _____

2. _____

3. _____

4. _____

5. _____

Name: _____

6. _____

7. _____

8. _____

9. _____

10. _____

11. _____

Name: _____

A T K M E M S T C E E A N E R
 K S T K O T H E R E N M E H E
 O T W H P T H E I R S C T T T
 E S T T T I F V I C I T H J H
 I I C H E H H I I T K I A H I
 C T S H T H E S E E I H T H S
 K H T K E E T E J T K H E S H
 H I H N M E Y T H T H A N K E
 C C E C H E T H E Y A H M T H
 E K M J S E S T K E T H E Z H

"TH" Words

TH _____ TH _____

TH _____ TH _____

TH _____ TH _____

TH _____ TH _____

TH _____

I found _____ "TH" words.

Sudoku Sums of 6

Each row, column, and box must have the numbers 1 through 4.
Hint: Look for sudoku sums. The sum of the two boxes inside of the dashed lines is 6.

Here is an example of a sudoku sum of 6:

1	5
---	---

	4		
3			
		3	
		1	4

100 less
than 477

$$\begin{array}{r} 86 \\ - 56 \\ \hline \end{array}$$

Name: _____

Ms. Brown made happy face cookies for her class. She made 2 cookies for each child. There are 17 children in her class. How many cookies did she make?


There were six bowls on the table. Sara put three popcorn balls in each bowl. How many popcorn balls were there in all?

There are 7 chocolate ice cream sodas on the table. There are 8 vanilla ice cream sodas on the table. How many more vanilla sodas are there?

Take a guess and estimate how many squares are below. Then write the actual number.


Estimate: _____ Actual: _____

How close was your guess? _____



four hundred
thirty-six

100 less
than 341



7 : 10

$$\begin{array}{r} 68 \\ - 43 \\ \hline \end{array}$$

Write the final part of the math analogy.

61, 65, 69, 73, ____ : 77 :: 84, 88, 92, 96, ____ :

Explain why you think your answer is correct.



Name: _____

Jacob, Nathan, and Jack went to the zoo. Jacob saw seven penguins. Nathan saw six penguins. Jack saw five penguins. How many penguins did they see in all?

Holly put 20 brownies on a plate in two stacks. She put 11 brownies in the first stack. How many are in the second stack?

$$\begin{array}{r} 45 \\ + 58 \\ \hline \end{array}$$

Write + or - in the circles.

$$8 \bigcirc 5 = 7 \bigcirc 4$$

$$9 \bigcirc 6 = 17 \bigcirc 14$$

It is your turn. Write X to make your move.

	X	O
O		
O	X	

Write the final part of each math analogy.

PCPPCPCPP ____ : C :: FDFFDFFDFF ____ :

Explain why you think your answer is correct.

BGQBGQ : BGQ :: CPHCPH :

Explain why you think your answer is correct.

$$\begin{array}{r} 96 \\ + 32 \\ \hline \end{array}$$

$$23 + 6 = \underline{\hspace{2cm}}$$

$$\begin{array}{r} 6 \\ 3 \\ + 3 \\ \hline \end{array}$$

$$\begin{array}{r} 8 \\ 8 \\ + 7 \\ \hline \end{array}$$

$$\begin{array}{r} 13 \\ 41 \\ + 21 \\ \hline \end{array}$$

Name: _____

Make change. You can use \$20, \$10, \$5, \$1, 25¢, 10¢, 5¢, or 1¢.

Use the fewest bills and coins to make \$27.45.

\$20	\$5	\$1	\$1
------	-----	-----	-----

25¢	10¢	10¢
-----	-----	-----

Use the fewest bills and coins to make \$53.32.

--	--	--	--	--

\$1

		1¢	
--	--	----	--

Use the fewest bills and coins to make \$15.32.

--	--

--	--	--	--

Use the fewest bills and coins to make \$34.17.

--	--	--	--	--

--

--	--	--	--

Name: _____

This puzzle has a large number in the middle, which is the sum of the four numbers that surround it.

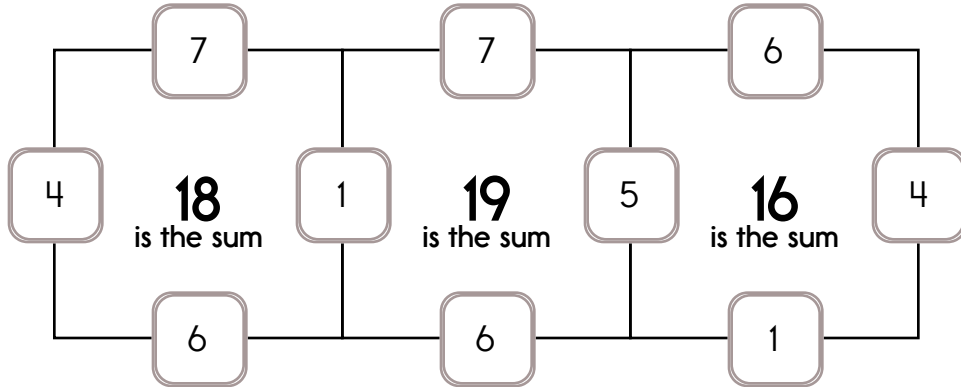
Example:

$$4 + 1 + 7 + 6 = 18$$

Example:

$$5 + 4 + 6 + 1 = 16$$

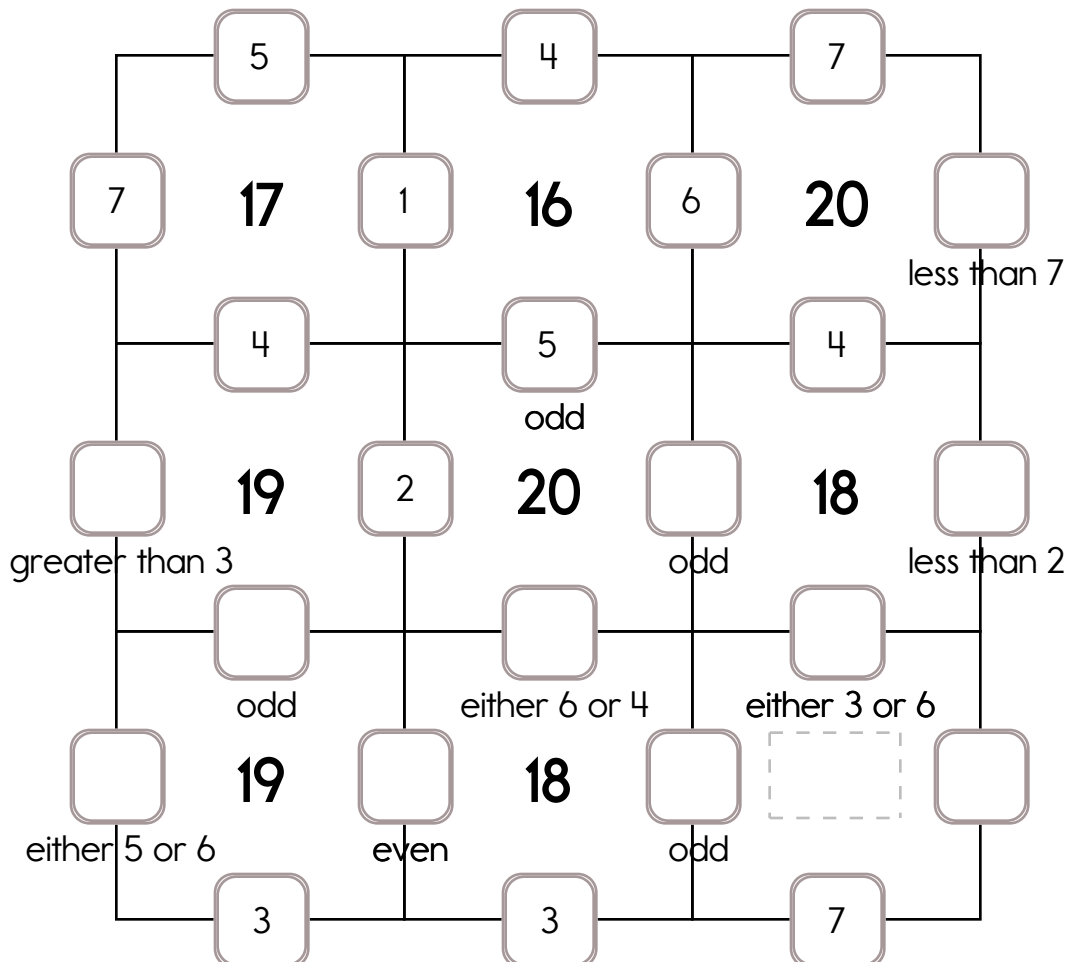
Sample:



Fill in the missing numbers. How? The sum of the four surrounding numbers is in the center of each square.

Exactly one of the four numbers has to be one of these numbers: 1, 2, or 3.

The other three numbers have to all be **DIFFERENT** and must be from these: 4, 5, 6, or 7.

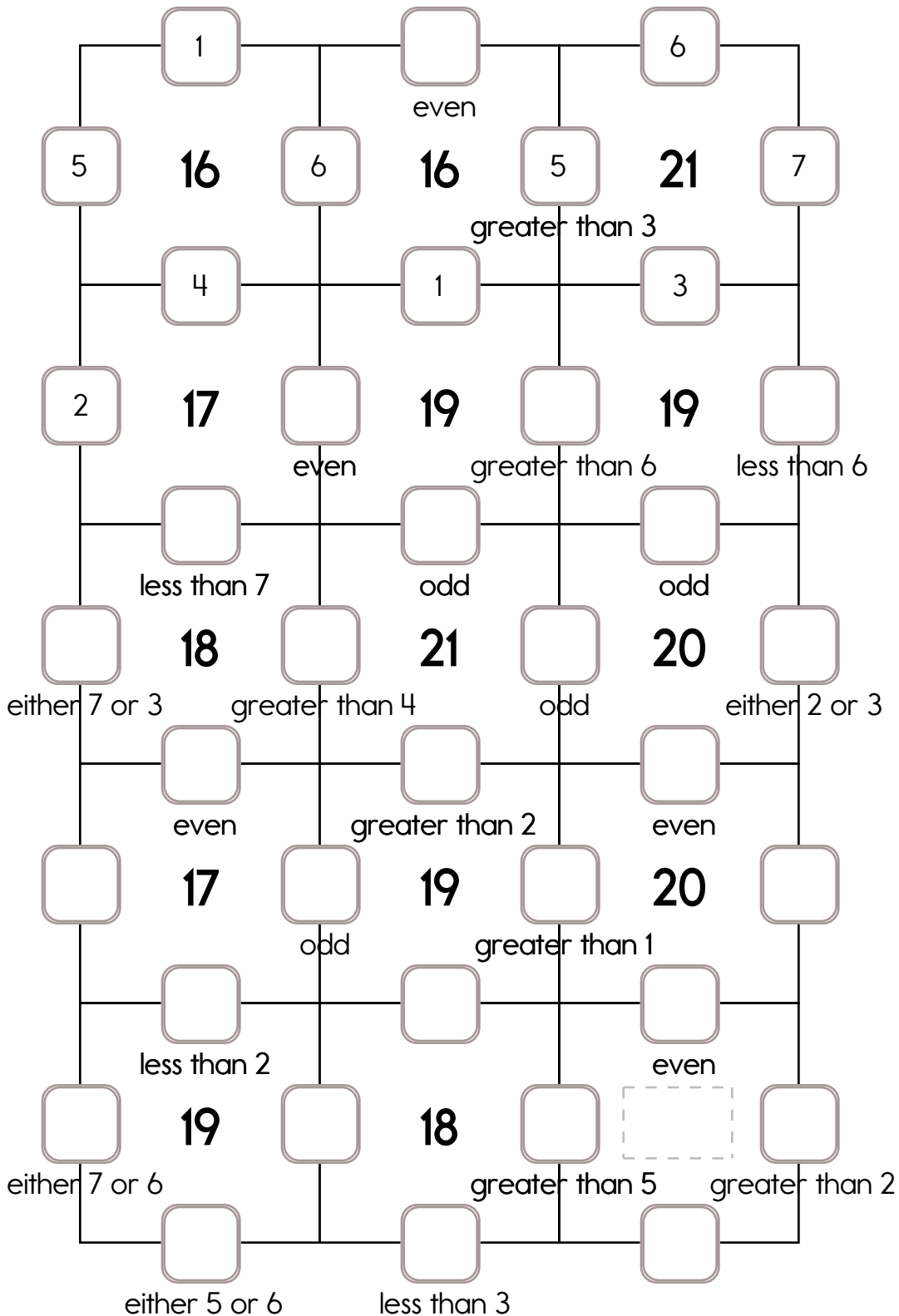


Name: _____

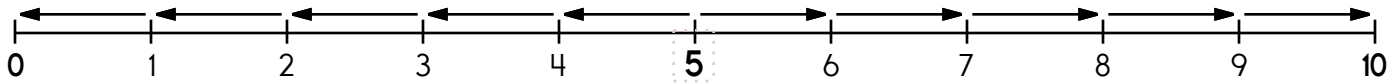
Fill in the missing numbers. How? The sum of the four surrounding numbers is in the center of each square.

Exactly one of the four numbers has to be one of these numbers: 1, 2, or 3.

The other three numbers have to all be **DIFFERENT** and must be from these: 4, 5, 6, or 7.



Name: _____

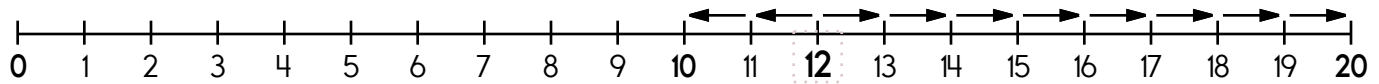

5 is 5 spots away from 0.

$$5 - \underline{\quad} = 0$$

5 is 5 spots away from 10.

$$5 + \underline{\quad} = 10$$

5 is closer to 0 or 10



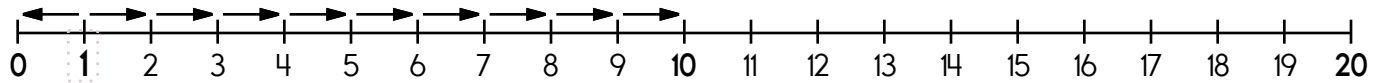
12 is _____ spots away from 10.

$$12 - \underline{\quad} = 10$$

12 is _____ spots away from 20.

$$12 + \underline{\quad} = 20$$

12 is closer to 10 or 20



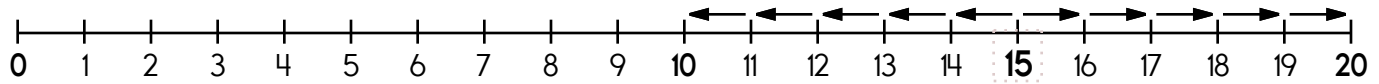
1 is _____ spot away from 0.

$$1 - \underline{\quad} = 0$$

1 is _____ spots away from 10.

$$1 + \underline{\quad} = 10$$

1 is closer to 0 or 10



15 is _____ spots away from 10.

$$15 - \underline{\quad} = 10$$

15 is _____ spots away from 20.

$$15 + \underline{\quad} = 20$$

15 is closer to 10 or 20

Name: _____

Round to the nearest ten.
30 to 34 rounds down to 30.

35 to 40 rounds up to 40.

40 → 40

37 → _____

35 → _____

31 → _____

30 → _____

39 → _____

Round to the nearest ten.
80 to 84 rounds down to 80.

85 to 90 rounds up to 90.

82 → 80

88 → _____

83 → _____

89 → _____

87 → _____

81 → _____

Round to the nearest ten.
90 to 94 rounds down to 90.

95 to 100 rounds up to 100.

90 → 90

97 → _____

98 → _____

100 → _____

95 → _____

96 → _____

Round to the nearest ten.
0 to 4 rounds down to 0.

5 to 10 rounds up to 10.

2 → 0

1 → _____

7 → _____

9 → _____

10 → _____

8 → _____

Round to the nearest ten.
50 to 54 rounds down to 50.

55 to 60 rounds up to 60.

60 → 60

53 → _____

51 → _____

57 → _____

56 → _____

59 → _____

Name: _____

Is 62 closer to 0 or 100?

$$\begin{array}{r} 62 \\ - 0 \\ \hline \end{array} \qquad \begin{array}{r} 100 \\ - 62 \\ \hline \end{array}$$

62 is _____ away from 0.

62 is _____ away from 100.

62 is closest to _____.

Is 349 closer to 300 or 400?

$$\begin{array}{r} 349 \\ - 300 \\ \hline \end{array} \qquad \begin{array}{r} 400 \\ - 349 \\ \hline \end{array}$$

349 is _____ away from 300.

349 is _____ away from 400.

349 is closest to _____.

Is 983 closer to 900 or 1000?

$$\begin{array}{r} 983 \\ - 900 \\ \hline \end{array} \qquad \begin{array}{r} 1000 \\ - 983 \\ \hline \end{array}$$

983 is _____ away from 900.

983 is _____ away from 1000.

983 is closest to _____.

Is 37 closer to 0 or 100?

$$\begin{array}{r} 37 \\ - 0 \\ \hline \end{array} \qquad \begin{array}{r} 100 \\ - 37 \\ \hline \end{array}$$

37 is _____ away from 0.

37 is _____ away from 100.

37 is closest to _____.

Is 28 closer to 0 or 100?

$$\begin{array}{r} 28 \\ - 0 \\ \hline \end{array} \qquad \begin{array}{r} 100 \\ - 28 \\ \hline \end{array}$$

28 is _____ away from 0.

28 is _____ away from 100.

28 is closest to _____.

Is 270 closer to 200 or 300?

$$\begin{array}{r} 270 \\ - 200 \\ \hline \end{array} \qquad \begin{array}{r} 300 \\ - 270 \\ \hline \end{array}$$

270 is _____ away from 200.

270 is _____ away from 300.

270 is closest to _____.

Name: _____

knock n n k n o k c k n o c k k o h k x k c

knew w u e k a w n k k n e w n k n e w w w

knife e c f g v n i i f f f n w s k n i f e

near n a e r r t n e a r a h z b j r a g e

hears j s r h h e r a s a a h d h e a r s r

earmuffs i h r m u h f s s e a r m u f f s l u

name n p x n m m a m a n m a e b e n a m e

natural l q n a t u r a l a c n a t e r a l l

books k h k k k b o o k s g m r o o k s s d

foot f o o r o b v o t o d f o o t f t t t

nickel d n i c k e l n i c k o l o h n z c k

noisy n o i s y n o i s y q i a b h n y o s

knee f s k k n e y z e d c k k n e e m r k

road m g j r o a d d z r o h a r c n e o a

toast t o a s t d t h t o a s t e l a b t v

bye i f p n e a h b i i b y e j m s d x e

quadrilaterals d q u a d r i l a t e r a l s r r e b

said d v q s a i d u h z i s u u d s i n k

disappear p e r a j p c s d i s a p p e a r i i

clear i c a r e c r r k l i h r s c l e a r

by y b t u l b i i s h y b y b o f y c a

year o h y y y i r y e a r r d k s t r l e

enough o e n u o h e n o u g h c m h g i p a

Name: _____

Use each word ONCE. Cross off each word after it is used.

 earmuffs • foot • knife • quadrilaterals • knee • clear • enough
 knew • noisy • books • said • hears • bye • disappear • knock
 near • by • year

These words have "ear" in them.

_____ e a r _____

e a r _____

 These words have
the long i sound like
in bike.

b _____

 These words have "no" in
them.

_____ n o _____

Fit the rest of the words into these shapes.

		n		
--	--	---	--	--

			d							a		s
--	--	--	---	--	--	--	--	--	--	---	--	---

--	--	--	--

--	--	--	--	--

--	--	--	--

--	--	--	--

Name: _____

Read the topic. Try to make it better. The first one is done for you.

Topic: books

1. a biography of Amelia Earhart
2. _____

Would you rather watch TV or read a book? Why?

Free choice writing:

Name: _____

Write the words into the boxes.

 said • year • clear • hears • name • knew • noisy • road • knee
earmuffs

<div></div> <div></div> <div></div> <div></div>	<div></div> <div></div> <div></div> <div></div>	<div></div> <div></div> <div></div> <div></div>	<div></div> <div></div> <div></div> <div></div>
<div></div> <div></div> <div></div> <div></div> <div></div>	<div></div> <div></div> <div></div> <div></div> <div></div>	<div></div> <div></div> <div></div> <div></div> <div></div> <div></div> <div></div> <div></div> <div></div>	<div></div> <div></div> <div></div> <div></div> <div></div>
<div></div> <div></div> <div></div> <div></div>	<div></div> <div></div> <div></div> <div></div>	<div></div> <div></div> <div></div> <div></div> <div></div> <div></div>	

Circle the words.

noisynamenaturalknifekneeknocksaidbyebyroadfoot
footknocknewbyedisappearnaturalroadbynameby
byesaidbyebyesaidbybykneenaturalknocknaturalby

Try to spell some words.

 sy • ne • by • en • ~~ks~~ • kn • ou • ~~o~~ • ife • ar • gh
noi

books			

<div>9</div> <div>-</div> <div>2</div>	<div>6</div> <div>-</div> <div>3</div>	<div>9</div> <div>-</div> <div>5</div>	<div>3</div> <div>+</div> <div>7</div>	<div>1</div> <div>+</div> <div>6</div>	<div>7</div> <div>+</div> <div>8</div>	<div>1</div> <div>+</div> <div>5</div>	<div>9</div> <div>-</div> <div>7</div>	<div>3</div> <div>+</div> <div>8</div>
--	--	--	--	--	--	--	--	--

Name: _____

Write the words into the boxes.

knock • toast • year • foot • noisy • enough • knife • said • books
clear • hears • nickel • name • disappear • knee • bye • enough • by

Circle the words.

roadnickelsaidnamehearsnearbyenoughearmuffs

namehearsnearnaturalbyeearmuffssaidroadfootby

kneearmuffsnameenoughearmuffshearsnameby

Name: _____

Which way does each word go? Write the word.

1. ↓ BLANKETS

← BARN

→ BUMP

N	R	A	¹ B				

1. ↓ BLANKETS

→ BIKE

← BLOCK

2. PRETTY

→ PUT

PLUS

				¹			
		S	U	L	² P		

Jenna, Hannah, and Jessica are so thankful for swimming. Jenna swam three hours last week. Hannah swam three hours last week. Jessica swam four hours last week. How many hours did they swim in all?


$$\begin{array}{r} 4 \\ 2 \\ + 2 \\ \hline \end{array}$$

$$\begin{array}{r} 1 \\ 2 \\ + 6 \\ \hline \end{array}$$

Mary picked 12 pink flowers. Then she picked 9 blue flowers. How many flowers did she pick in all?



09:30



Count by 1.

5 6 _____

10 is 5 more than _____.

Name: _____

Write these spelling words in ABC order:

by • quadrilaterals • nickel • knife • knew • knee

1. _____

4. _____

2. _____

5. _____

3. _____

6. _____

Unscramble the letters to spell a word.

ahser _____

rlace _____

eyb _____

kinlce _____

nkwe _____

yb _____

kifen _____

sttoa _____

genuoh _____

otfo _____

adspepair _____

amen _____

sdai _____

qridllauaraste _____

arey _____

orda _____

kkocn _____

aren _____

ulaanrt _____

eenk _____

Name: _____

Where Do You Go After School?

Afterschool Care

Home									
Daycare									
Friend's House									
	1	2	3	4	5	6	7	8	9

Number of Students

How many students go home after school?

Do more students go to daycare or go home after school?

 100 more
than 674

$$\begin{array}{r} 71 \\ + 12 \\ \hline \end{array}$$

$$\begin{array}{r} 20 \\ + 32 \\ \hline \end{array}$$



$$\begin{array}{r} 65 \\ - 25 \\ \hline \end{array}$$

Complete each analogy with the best word.

canvas roll hen

sketch is to paper as

painting is to _____

ice skate is to slide as

wheel is to _____

male is to rooster as

female is to _____

Draw 15 tally marks.

$$\begin{array}{r} 58 \\ - 25 \\ \hline \end{array}$$

$$\begin{array}{r} 84 \\ - 71 \\ \hline \end{array}$$

4

3

$$\begin{array}{r} + 20 \\ \hline \end{array}$$

4 4

$$\begin{array}{r} + 41 \\ \hline \end{array}$$

7 7

What is the largest two-digit number you can make with the numbers 5, 8, and 9?

Name: _____

Round each number to the nearest tens. Add or subtract to get an estimate of the answer.

$$\begin{array}{r} 84 \rightarrow \boxed{80} \\ + 74 \rightarrow \boxed{70} \\ \hline 160 \end{array}$$

$$\begin{array}{r} 71 \rightarrow \boxed{} \\ - 55 \rightarrow \boxed{} \\ \hline \end{array}$$

$$\begin{array}{r} 99 \rightarrow \boxed{} \\ - 49 \rightarrow \boxed{} \\ \hline \end{array}$$

$$\begin{array}{r} 69 \rightarrow \boxed{} \\ + 65 \rightarrow \boxed{} \\ \hline \end{array}$$

$$\begin{array}{r} 34 \rightarrow \boxed{} \\ - 12 \rightarrow \boxed{} \\ \hline \end{array}$$

$$\begin{array}{r} 26 \rightarrow \boxed{} \\ + 34 \rightarrow \boxed{} \\ \hline \end{array}$$

across →

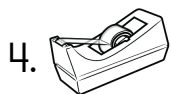
down ↓




2. _____ ar _____



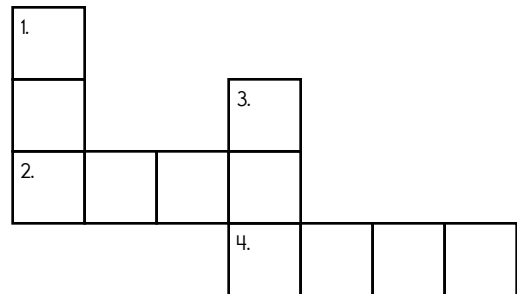
1. _____ sa _____



4. _____ ape _____



3. _____ a _____



Hunter found two rocks. They looked like they were the same size. He weighed each rock. The brown rock weighed seven ounces. The black and white rock weighed eleven ounces. How much less did the brown rock weigh than the black and white rock?

What is the eleventh month of the year?

$$\begin{array}{r} 64 \\ + 24 \\ \hline \end{array}$$


$$\begin{array}{r} 20 \\ + 45 \\ \hline \end{array}$$

$$\begin{array}{r} 26 \\ + 23 \\ \hline \end{array}$$




Name: _____


Circle the letters to the word. Write the word.




H T W
C
A
F




R F S
T
I O F
F



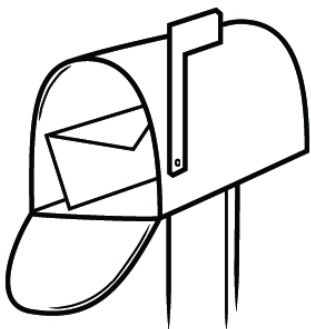
U R W
S
R G



O L E
H E M E




A
A
S L V
L
P B




L I
F X M P
O B
Z A
M

$$\begin{array}{r} 29 \\ + 10 \\ \hline \end{array}$$

How many?



How many?



Name: _____

One letter is missing from each word.

W	E	R	E
---	---	---	---

S	L	I		H	T
---	---	---	--	---	---

C	E	I	L	I	N	
---	---	---	---	---	---	--

R	O		M
---	---	--	---

B	R		S	H
---	---	--	---	---

P	O	O	
---	---	---	--

R	E	A		Y
---	---	---	--	---

H	U		E
---	---	--	---

M		R	K	E	T
---	--	---	---	---	---

E	I	G	H	
---	---	---	---	--

Write your own words!

--	--	--	--

--	--	--	--

--	--	--

--	--	--	--	--

--	--	--	--	--	--

--	--	--	--	--

--	--	--	--	--	--

Name: _____

EAR Words

EAR makes /ihr/ sound

E E A R Y M R E L R A P J Y E
 B R E R E P C A S R A A S R A
 E L E S A E V R E F S R P R R
 A R R A R E P H E A R D A R M
 R F P A N E A R B Y E B Y E U
 D D E A R E S T F D D A A A F
 D N C L E A R E E K E A S R F
 N E A R L Y M F A P C R A I S
 A R R A E E S N R R B E E A L
 E N Y D I S A P P E A R A A S

DEAREST • HEAR • YEAR
 EARMUFFS • BEARD • NEARLY
 DISAPPEAR • FEAR • CLEAR
 NEARBY • EAR • APPEAR

EAR makes /ihr/ sound

C N N T E A E A R M U F F S R
 D E P R Y E R E D E A R E S T
 L A R A H P E A R C L E A R R
 R R E A Y A S A E A E L A P Z
 Y B D I S A P P E A R L A D A
 E Y B E D C F F A P P E A R P
 A E R P C E E J E P R N S Y P
 R R B C R A A E H D B E A R D
 E A E M I Y R C E E N R E O P
 N E A R L Y E R T H E A R D R

BEARD • NEARBY • CLEAR
 APPEAR • HEAR • YEAR • NEARLY
 DEAREST • EAR • EARMUFFS
 DISAPPEAR • FEAR

Help! Some of the EAR words from this page and the previous page are written like they sound. Can you figure out the real spelling of these words? Good luck.

 dihruhst dearest

hihr _____

ihr _____

yihr _____

klihr _____

uhpahr _____

bihrd _____

dihsuhpihr _____

nihrbī _____

nihrlē _____

ō kōz → cause

oo choo → chew

ā kāk → cake

ē fēt → feet

ī īs → ice

ō bōt → boat

ū kūt → cute