
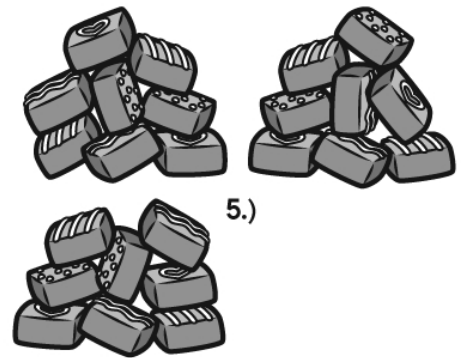



Name: _____

MMmm multiplication and Division


Write an equation to solve each problem.

All four of us want the same amount from each group of treats!



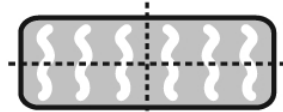

Shade the candies that are factors of the large number in each box.

Which two are the same?




Name: _____

Lines of Symmetry



Total lines of symmetry: 2



Total lines of symmetry:



Total lines of symmetry:



Total lines of symmetry:

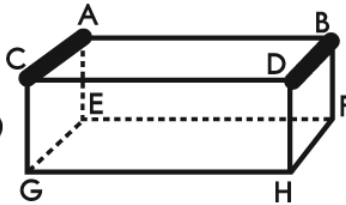



Total lines of symmetry:



Total lines of symmetry:

Parallel Lines

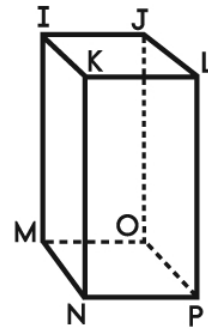


There are many sets of parallel lines in this prism.

One example is:

\overline{AC} and \overline{BD}

What is another set of parallel lines?

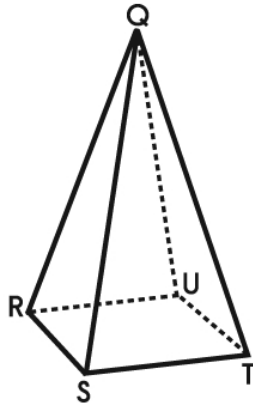


Which two lines are parallel?

- 1.) \overline{MO} and \overline{IK}
- 2.) \overline{JO} and \overline{NP}
- 3.) \overline{IM} and \overline{KN}
- 4.) \overline{MN} and \overline{LP}

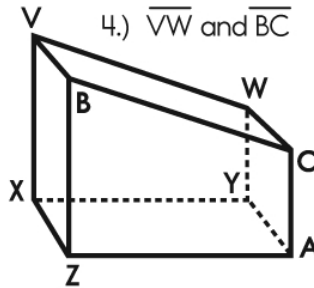
Which two lines are parallel?

- 1.) \overline{CA} and \overline{ZA}
- 2.) \overline{XZ} and \overline{WY}
- 3.) \overline{BC} and \overline{ZA}
- 4.) \overline{VW} and \overline{BC}



Which two lines are parallel?

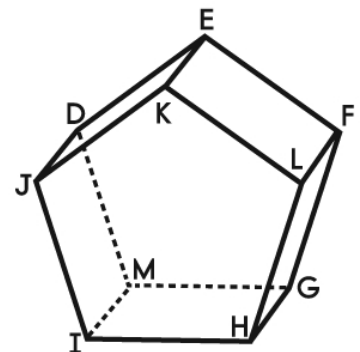
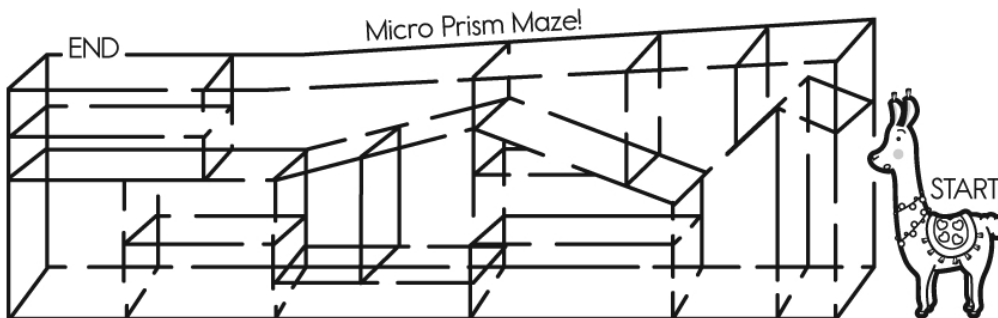
- 1.) \overline{RS} and \overline{UT}
- 2.) \overline{QT} and \overline{SQ}
- 3.) \overline{RU} and \overline{TU}
- 4.) \overline{RQ} and \overline{ST}



This one is tricky!

Which two lines are parallel?

- 1.) \overline{EK} and \overline{FG}
- 2.) \overline{EK} and \overline{FL}
- 3.) \overline{IM} and \overline{ED}
- 4.) \overline{HG} and \overline{KL}





My Name: _____

Pick 1 to do:

- ☐ page 1
☐ page 2

Pick 4 to do:

- ☐ page 3
☐ page 4
☐ page 5
☐ page 6
☐ page 7
☐ page 8

Pick 3 to do:

- ☐ page 9
☐ page 10
☐ page 11
☐ page 12



Your Valentine's Day Activity Book !

Name _____



Date _____

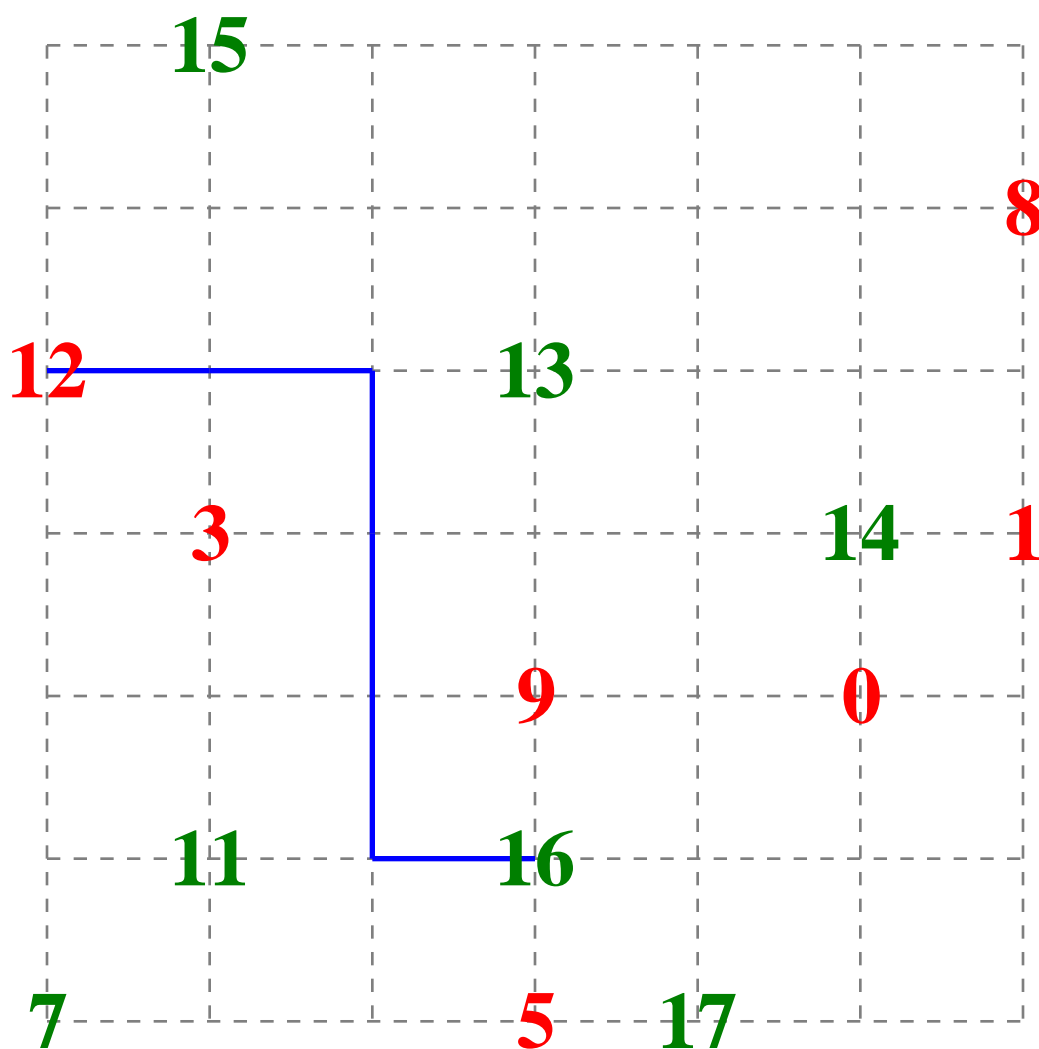
Key #1-8489991

Greater and Less Than Number Kissing

Start at a green number and draw a line to any red number that is less than the green number.

Draw a line that connects one number to one other number to kiss. Draw your lines over the trace lines. No lines may cross. Once you draw a line to a number, that number cannot be used again.

One complete line has already been drawn for you.



Done? Check this: ☐ I did page 1.

edHelper.com/valentine.htm



Valentine's Day

Name _____



Date _____

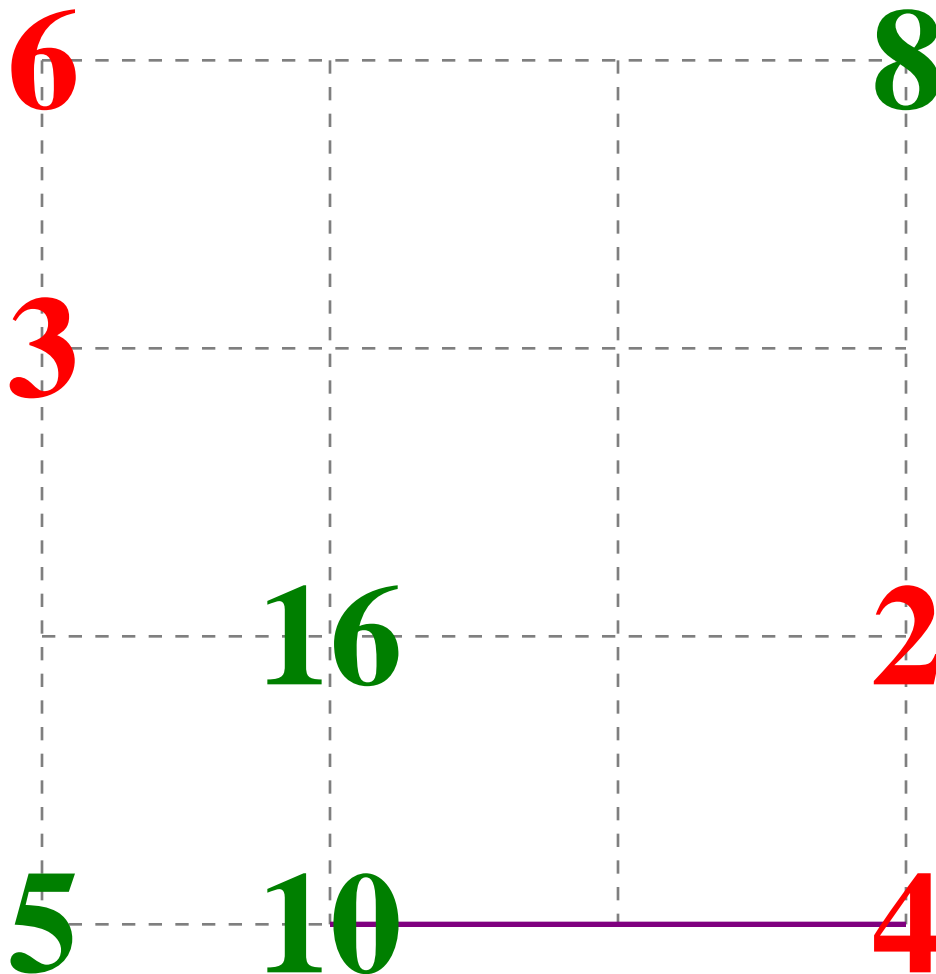
Key #1-6378662

Greater and Less Than Number Kissing

Start at a green number and draw a line to any red number that is less than the green number.

Draw a line that connects one number to one other number to kiss. Draw your lines over the trace lines. No lines may cross. Once you draw a line to a number, that number cannot be used again.

One complete line has already been drawn for you.



Done? Check this: ☐ I did page 2.

edHelper.com/valentine.htm

Valentine's Day

Name: _____

Complete each analogy with the best word.

heart	card	smooch	jewelry
○	racing	envelope	love
arrow	red		

doctor : stethoscope ::

Cupid : _____

gift : box ::

card : _____

stomach : butterflies ::

heart : _____

hug : embrace ::

kiss : _____

chocolate : candy ::

necklace : _____

Halloween : orange ::

Valentine's Day : _____

April Fool's Day : humor ::

Valentine's Day : _____

happy : smiley face ::

love : _____

love : feeling ::

valentine : _____

kiss : X ::

hug : _____
















Name: _____

Each row, column, and box must have the numbers 1 through 6. The first box is done.

1	6	4			
5	3	2	1		
			4	5	
	2				
			5		
6				1	



Each row, column, and box must have 6 different pictures. The first box is done.

Done? Check this: ☐ I did page 4.

edHelper.com/valentine.htm

Valentine's Day



Name: _____

Use each word ONCE. Cross off each word after it is used.

sweetheart • flowers • sweet • party • valentine • cherish
eternal • hugs • candy • gift • greeting • caring • forever • give
sentimental • tradition • admirer • wishes

These words have er in them.

_____ e r _____
_____ e r _____

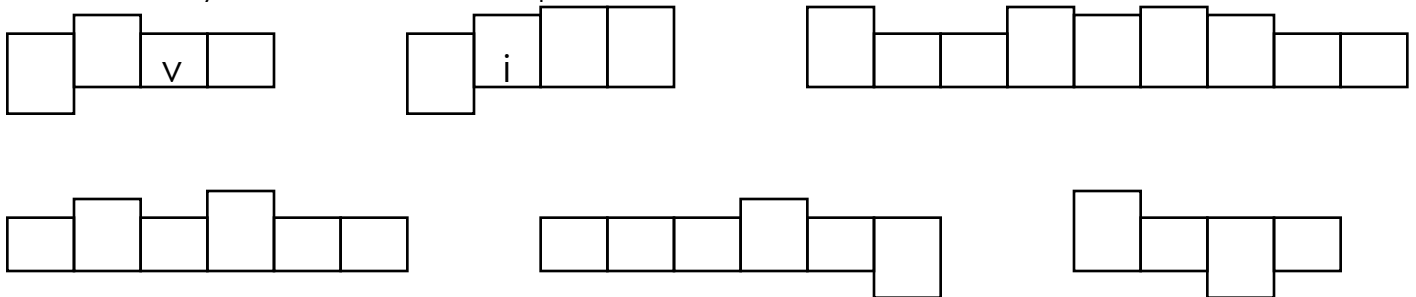
These words have enti in them.

_____ e n t i _____

word has long e sound like in
baby

_____ e e _____
c _____

Fit the last 6 of your words into these shapes.







Name: _____

VASE • SAINT • WISHES • SPOUSE • FLOWERS • ROSES • ETERNAL
MINE • KINDNESS • HUGS • CARD • ADMIRER • LOVE • SWEET • WIFE
GIVE

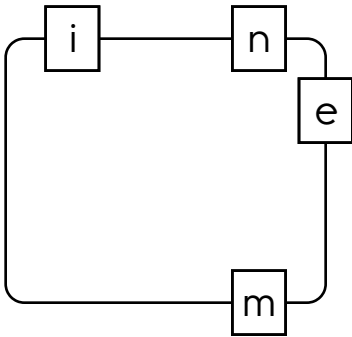
Fill in each word into the grid.

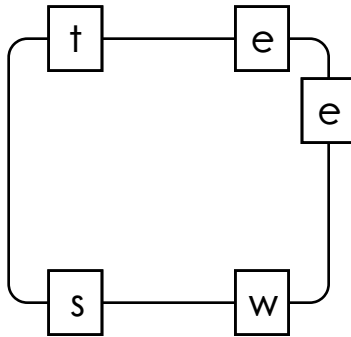


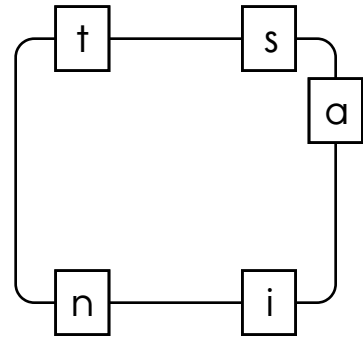
Name: _____



Write the hidden word. Start at one letter and then move either left or right. Continue in same direction.







Draw 3 pictures in the correct order. Use each of the clues so you will know what to draw.



Draw 1 of these 3 pictures.
The picture IS in the correct spot.



Love

Draw 1 of these 3 pictures.
The picture is NOT in the correct spot.






Draw 1 of these 3 pictures.
The picture is NOT in the correct spot.



Draw 2 of these 3 pictures.
The pictures to use are in the correct spot.

Draw the 3 pictures in the correct order:





Name: _____

Use each of the blocks to spell nine Valentine's Day words.

O V E N A D N T S Y

W I H U R E S H D A F E
I L G N V E

S A E W I Y I
E C A T S L N D

1.								2.			
3.								4.			
5.								6.			
7.									F	E	
9.										E	

Circle the words.

award charge hilarious active quality roast televisesoup
oasis preheat bomb charge televise hilarious curtaintwin
goodness reassure inject report curtain breath against

EXTREME

Color by Addition
with Fractions

$1/2 = \text{pink}$

$1 = \text{red}$

$1/3 = \text{orange}$

$2/3 = \text{yellow}$

$2/5 = \text{purple}$

$3/5 = \text{green}$

$5/6 = \text{tan/beige}$

$3/8 = \text{brown}$

$5/8 = \text{black}$

$7/8 = \text{blue}$



Done? Check this: ☐ I did page 9.

edHelper.com/valentine.htm

Valentine's Day

Name: _____

Insert a comma in the correct place in this sentence.

Mr. Harris's class always has the best Valentine's Day parties doesn't it?

Insert a comma in the correct place in this sentence.

She brought the best valentines in the class this year didn't she?

Rewrite this sentence by substituting an interjection for one or more words.

That's Amazing! Your homemade valentine is prettier than the ones that I bought at the store!

Circle the word that best completes the sentence.

Cadence bought her mother flowers for Valentine's Day; (although/moreover) she bought her father a tie with hearts on it.

Insert a comma in the correct place in this sentence.

Your class's Valentine's Day party is at 3 p.m. isn't it?

Put these adjectives in the correct order.

shiny, big, helium

Rewrite the sentence so that it uses the past progressive form of the verb.

I am making my valentines to distribute in class tomorrow.

Write a synonym for this word.

love

Insert a comma in the appropriate place in this sentence.

Yes I am really looking forward to the Valentine's Day party tomorrow!

Explain the meaning of the underlined phrase.

My best friend is as sweet as candy, which is what I am giving her for Valentine's Day!

Write a synonym for this word.

floral

Circle the word that best completes the sentence.

(Although/Moreover) Ava got the most valentines in our class, Joshua got the most carnations.

Explain the meaning of the underlined phrase.

I was as nervous as a kid starting a new school about asking Caleb to be my valentine.

Done? Check this: ☐ I did page 10.

Name: _____

edHelper

teased • laughed • ~~buy~~ • repaid • borrow • in • twenty • you
dollars

"Hey Mom," John asked _____ his sweetest voice. "Can I
_____ twenty bucks?" His mom _____. "You
haven't _____ the twenty bucks you borrowed last month. What do
_____ need another _____
_____ for?" "I want to _____ buy _____ you a present for
Valentine's Day," John responded. "Just make me a card," his mom
_____. "It costs me a lot less and it means a lot more."

Connor said he could drink all the punch in a
rectangular container with a volume of one
hundred sixty-eight cubic inches. The
container's base is six inches by four inches.
What is its height?

The Loveland, Colorado, post office will mail
cards and packages to people with a
heart-shaped postmark that says "Happy
Valentine's Day from Loveland, CO." The
charge for this service is the regular postage
fee plus 9% for handling. Adam wanted to
use this service to mail a package to his
mother. The regular postage was \$3.71. What
did it cost Adam in all to mail the package?

all • bellowing • ~~the~~ • bathroom • knew • stomachache • why
candy

Corrine was rolling around the floor and _____ from the
_____. She had a terrible _____. Her step-mom
instantly _____ the _____ reason
_____. She found Valentine's _____ wrappers
_____ over the Corrine's floor.

Done? Check this: ☐ I did page 11.
edHelper.com/valentine.htm

Valentine's Day

Name: _____

tuo • friends • ~~laughed~~ • taing • iss • to • is • envelopes • too
envelopes • woud • laughid • ef • forward • address • of • would
fehndz • forwad • a • thought • twenty • taking • wood

"Addressing these valentines _____ a lot longer than I _____ it _____," Brandi told her brother. "That's the problem with having so many _____. It only took me _____ minutes _____ address all _____ mine." Brandi _____ laughed _____. "I like having _____ lot of friends, but it does mean I have a lot of _____ to _____ and mail."

Robert is going to bring ice cream to the Valentine's Day party. If two pints of ice cream can feed nine people, how many pints of ice cream does he need to buy for 27 people?

The EdHelper Candy Company donated three thousand, nine hundred fifty-four chocolate-nut bars to Marco Polo Elementary School for their Valentine's Day celebration. There are nine hundred fifty-one students in the school. Four of the students are allergic to chocolate and twelve students can't eat nuts. On the day of the party, eleven other students were absent. If the candy was divided evenly among the remaining students, how many bars did each student get?

There are twenty-eight students in Mr. Jernigan's class. One-fourth of them don't want to have a Valentine's Day party. How many students do want to have a party?

Amy made five and one-eleventh cups of strawberry punch, eight and one-seventh cups of pink lemonade punch, and eight and one-fourth cups of ice tea. How much punch did she make in all?

Ponder the Picture of Valentine's Day



Name _____



Date _____

1. What is the teacher offering her students?

2. What is tied in a bundle?

3. What does the poster say?

4. What has the boy made?

5. What could you use to cut paper?

6. What message has been written with chalk?

7. What stuffed animal do you see?

8. Where do you see hearts?

9. What things have fallen on the floor?

10. What has stripes?

11. Where do you see an arrow?

12. What is hanging from the ceiling?

13. What is taped to the window?

14. Who is delivering a valentine?

15. Where do you see a bear?

16. Who is drinking punch?

17. Where do you see books?

18. Who is reading a valentine card?

19. Who has wings?

Name _____



Date _____

20. Who has a valentine in their pocket?

21. Who is eating something?

22. How many numbers do you count?



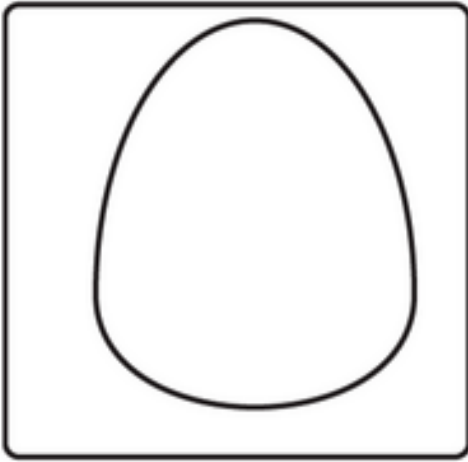
23. How many cups do you count?

24. How many chairs do you see?



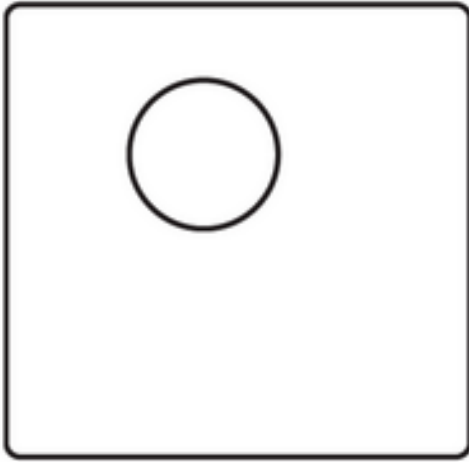
25. How many smiles do you count?

Valentine's Day!



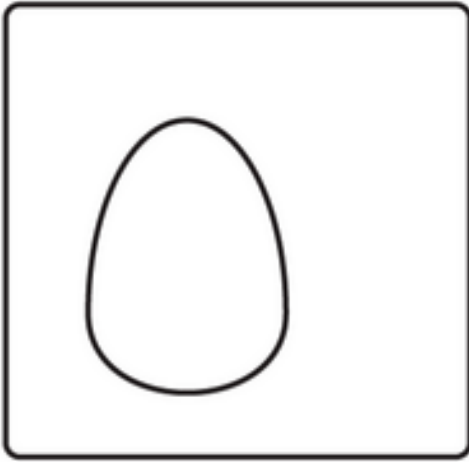
-follow the steps to draw the picture

A large, empty rectangular box with a black border, intended for the student to draw the bear and heart based on the steps shown in the examples above.


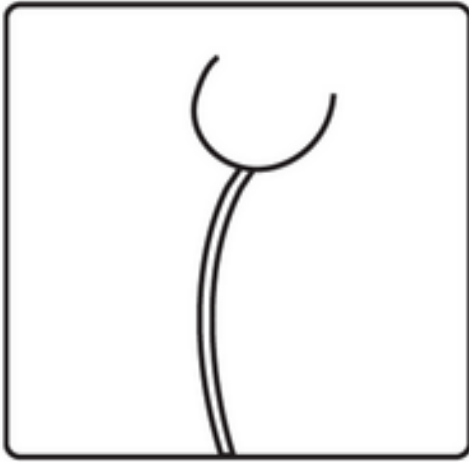
Valentine's Day! -follow the steps to draw the picture





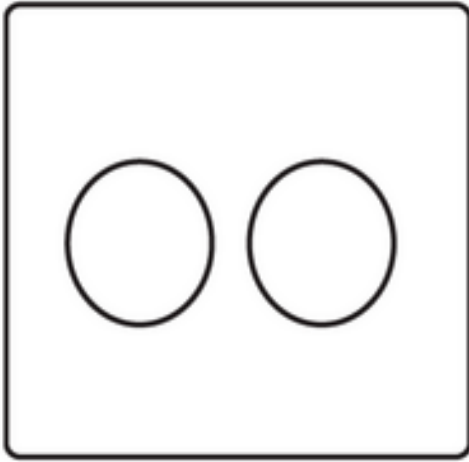
Valentine's Day! -follow the steps to draw the picture



Valentine's Day! -follow the steps to draw the picture




Valentine's Day! -follow the steps to draw the picture

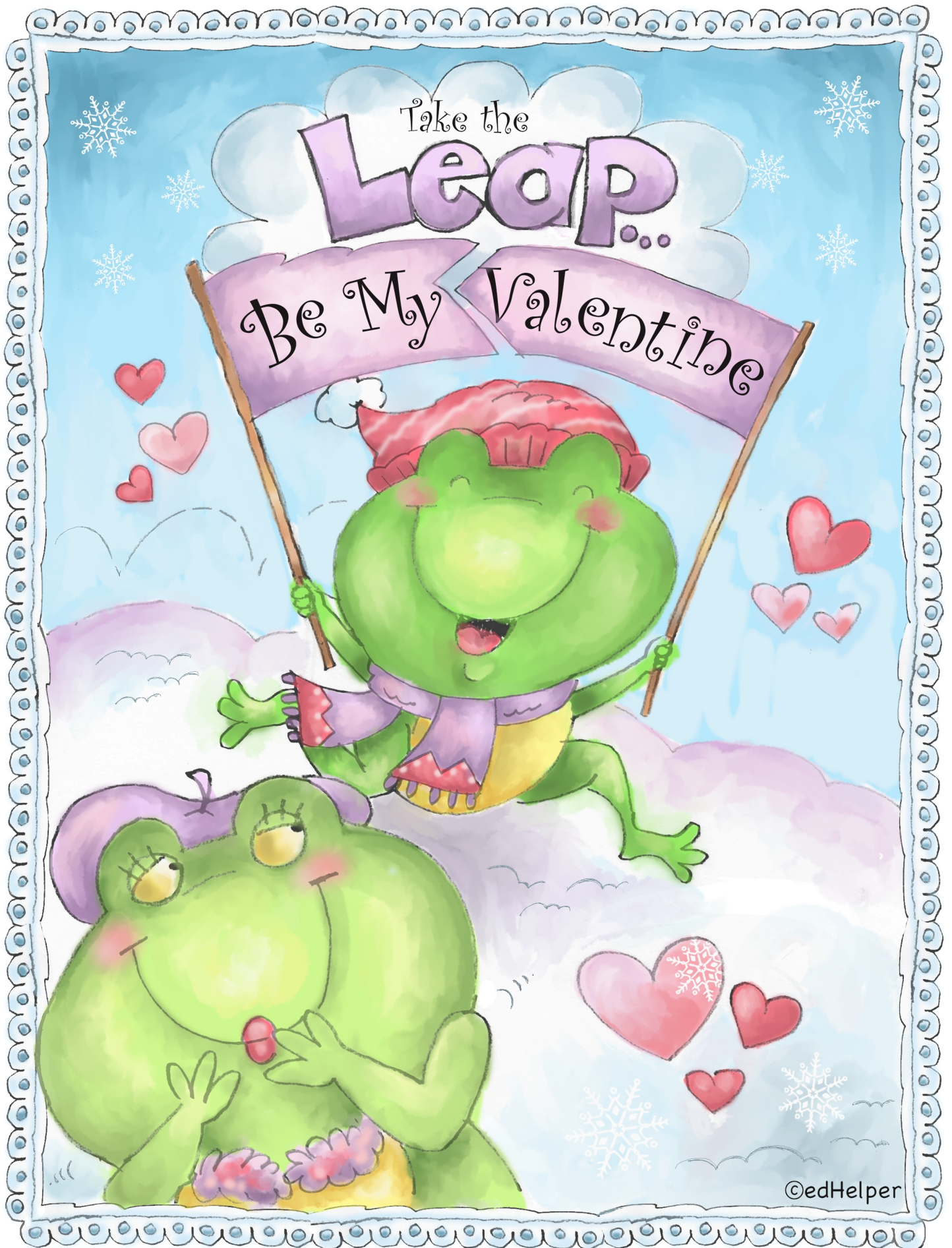


Be That Kind Kid Who...

Sits with a classmate who's alone during lunch. Be a friend and let them know they're important.



©edHelper



©edHelper