


Name: _____

Since many aliens are coming to Earth, you have decided to open a restaurant for their favorite foods. Answer the questions, then draw a picture of one of their favorite meals below:



What is the name of the favorite alien dish in your restaurant?

What planet did this dish come from, and what are its main ingredients?

Do Earthlings like this kind of alien food? Why or why not?



Draw a picture
of your alien
food here:

Name: _____

Uncover the Story Number 1

(Pick just one story to uncover!)



What is going on? Write as many ideas as you can fit in the box.

My ideas...

Name: _____

Uncover the Story Number 2

(Pick just one story to uncover!)



What is going on? Write as many ideas as you can fit in the box.

My ideas...

Name: _____

Which story did you decide to uncover? Check one.


☐

Uncover the Story Number 1


☐

Uncover the Story Number 2

Best idea I had to describe this picture: _____

Add a detail to this idea: _____

SECOND best idea I had to describe this picture: _____

Add a detail to this idea: _____

Uncover the main character. Give the main character a name. Is the main character in the picture? _____

"Nothing is really work unless you would rather be doing something else."

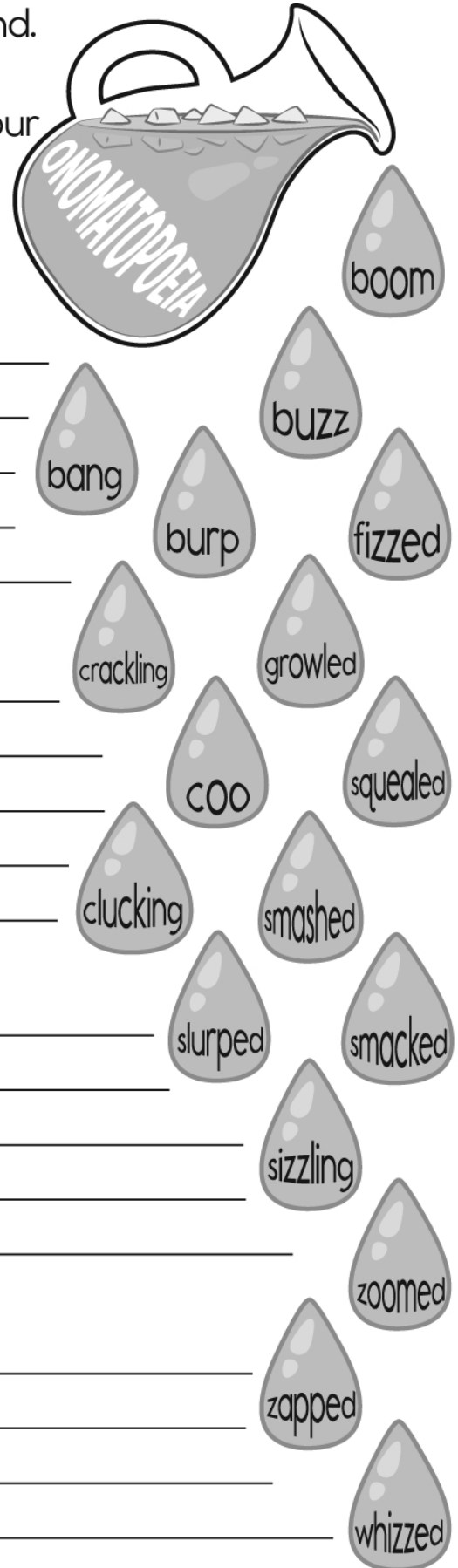
What does this quotation mean to you? Write an essay that explains the quotation above.

- [illegible]

This image shows a full page of white paper with horizontal blue or grey ruling lines. The lines are evenly spaced and run across the width of the page, providing a template for handwriting practice or general note-taking. There are no margins, text, or other markings on the page.

Name: _____

Onomatopoeia is a word that imitates a sound. Pick four words that are drip, drip, dripping from the onomatopoeia pitcher, and write four sentences using them on the blanks below. Then draw a picture for each sentence.



1. _____

2. _____

3. _____

4. _____

Name: _____

Read the topic. Fill in the boxes with your ideas.

Topic: Race Day

You are a famous racecar driver.
Today is the biggest race of your
career! What happens?

Arriving at the track

Preparing your car

A book has 5 pages. Each
page has 12 dimes. How
many dimes in the book?

There are 3 groups of 4
rocks. How many rocks?

How many tens are in the
number 44,000?

How many total legs are on
60 dogs.

How many minutes are
there from 6:30 p.m. until
7:00 p.m.?

Round 56 to the nearest
ten.

I, _____, J, L, K, M, L,
N, M, O

Draw a small clock that
shows 25 minutes to 11:00.

Draw a small clock that
shows 20 minutes past 8:00.

Name: _____

Now write a paragraph using the ideas you have already written down.

Topic: Race Day

You are a famous racecar driver. Today is the biggest race of your career! What happens?

Which is larger, $\frac{3}{6}$ or $\frac{1}{3}$?



Mrs. Walker carved 7 wooden ducks. Then she carved some geese for a total of 20 carvings. How many geese did she carve?

$$\begin{array}{r} 54 \\ - 43 \\ \hline \end{array}$$

Fill in the missing fractions.

_____, $\frac{2}{5}$, $\frac{3}{5}$, _____

What is the ratio of boys to girls in your class?


How many ninths are in 4?

Write the number for one thousand, seven hundred five.

$$2 \overline{)14}$$

$$9 \overline{)63}$$

Name: _____



The prefix “pre” means “before.” Priscilla the pterodactyl lost her eggs, and the only way she can find them is if you help her fill in the blanks with the correct word.



The dinosaur movie _____ was attended by directors, actors, and other professionals.

Priscilla the pterodactyl and her friends lived in _____ times.



Draw a picture of a baby pterodactyl here:

The witch had to _____ her cauldron so it was hot enough to boil her potion.

As an extra _____, the time travelers packed their invisible suits when they went to visit dinosaur times in case they encountered dangerous creatures.

Fortunately, the cookie dough was _____, so all the baker had to do was add several gallons of water to make a giant chocolate chip cookie.

Many people choose to take part in marathons, yet some may participate as a walker rather than a runner. Write an essay in which you compare and contrast walking with running during a marathon. Follow these prewriting steps before writing your essay.

1. Complete a Venn Diagram with the similarities and differences before beginning your essay. Use the information from the diagram to write your essay.
2. Write a general statement for your topic statement.
3. Follow up with details arranged in a logical sequence.

[illegible]

This image shows a full page of white paper with horizontal blue or grey ruling lines. The lines are evenly spaced and run across the width of the page, providing a template for writing. There are no margins, text, or other markings on the page.

Name: _____

Did you know that you don't always have to use the word **strange** in your writing? Try to use different words for an overused word like **strange**. It will make your work more fun for others to read.

Circle words to the RIGHT or DOWN. Every letter is used exactly ONCE.

U	O	D	U	P										
N	U	I	N	E										
F	T	F	U	O	C									
A	L	F	S	D	U									
M	A	E	U	D	L									
I	N	R	A	W	E	I	R	D	I					
L	D	E	L	B	I	Z	A	R	R	E	A			
I	I	N	E	C	C	E	N	T	R	I	C	R		
A	S	T	C	U	R	I	O	U	S					
R	H	E	X	T	R	A	O	R	D	I	N	A	R	Y

Write the words found.

EXTRAORDINARY	CURIOUS
_____	_____
_____	_____
_____	_____
_____	_____
_____	_____

Now rewrite this without using the word **strange**. Add one or two of your own sentences using some of the words you found in the word search.

It was a strange feeling being the only girl taking the test.

My favorite two words to use instead of **strange** are:

_____ and _____

How many words do you think it takes to improve your writing?

Fifty. That's 50! There are about 50 overused words we often use in writing and conversations.

When you find yourself repeating, try something different. It doesn't take much work to sound amazing!

Name: _____

Which way does each word go? Write the word.

1. ↘ INTEND
 ← IT
 ↓ INTERIOR
 → INCHES

		I					
			N				
				T			
					E		
						N	
							D

1. ↘ PAINT
 ← PRAY
 ↓ PRECIOUS
 → PRIZE

2. ↘ PEST
 PRAISE
 PARROTED
 PUT

			P	R	I	Z	E
T	U	P					

Round the number to the
place value of the BIG number.

86,9**3**9,473

Would you use a ruler or a
yardstick to measure the
length of a door?

Fill in the boxes so each line equals 10.

10		
	-	3
5	x	
	÷	5
(+ 5)
	-	

$$\begin{array}{r} 65 \\ - 26 \\ \hline \end{array}$$

Name the polygon that has
ten vertices.

$$\begin{array}{r} 8 \\ x 7 \\ \hline \end{array}$$

$$\begin{array}{r} 9 \\ x 5 \\ \hline \end{array}$$



word root **spec** can mean **look**

spectacle, spectator

Name: _____

1. IS ITS ↓ IMPERSONATED ICE IMITATED	2. → SIDES SIGHS SHEAR	3. POT PRECISION → PAW	4. RED ↓ RESPONSIBLE RUSH REGION REEF
			5. POST ↑ PIG POOL PILL PENTAGON
			6. THAW TIP ↑ TRY TEN
			7. HAT HOT HAS → HER HIKE
			8. ↑ JAW JOG JUMP JET

If there are four orange marbles and five green marbles in a box, what is the probability that you will pick out a orange one with your eyes shut?

The factors of 15 are 1 _____ 15

Circle the correctly spelled words.
weeve, weave
whenever, wenever
funeral, funral





Count by 2s.

24 _____
_____ 46

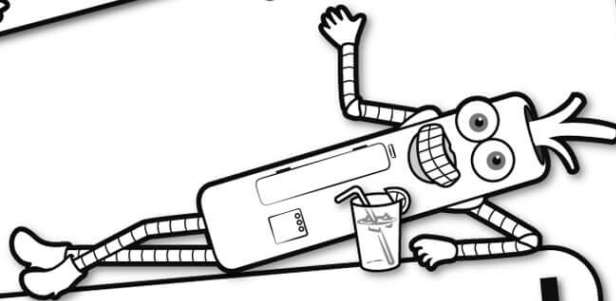
This polygon has three more sides than a triangle. What polygon is this?

word root **tempor** can mean **time**

contemporary, temporary




It's NO PREP
at edHelper.



edHelper.com!

More
history!



**only \$19.99
per year**

